



Use the block on the left to find the value of the set of blocks on the right.

Answers

1) = 1

1. _____

2) = 1

2. _____

3) = 1

3. _____

4) = 1

4. _____

5) = 1

5. _____

6) = 1

6. _____

7) = 1

7. _____

8) = 1

8. _____

9) = 1

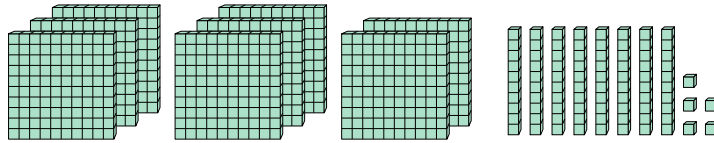
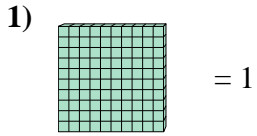
9. _____

10) = 1

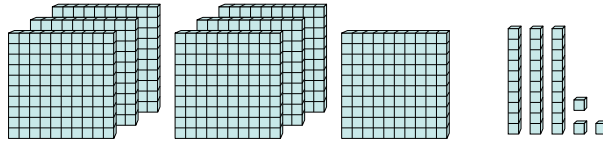
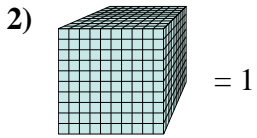
10. _____



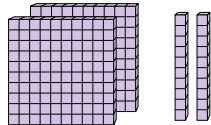
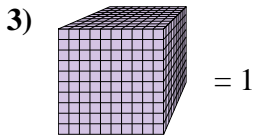
Use the block on the left to find the value of the set of blocks on the right.



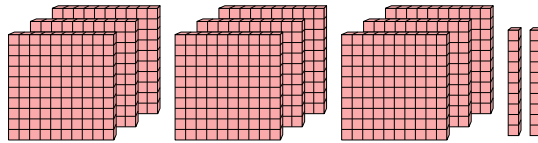
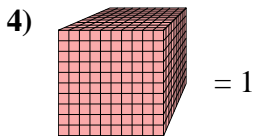
1. 8.85



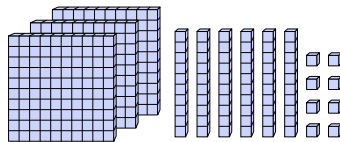
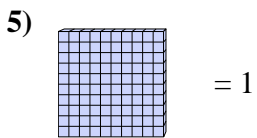
2. 0.733



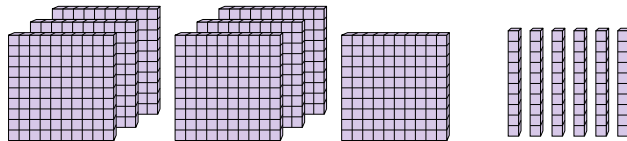
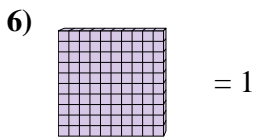
3. 0.22



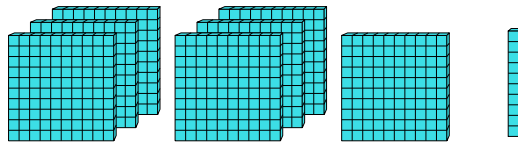
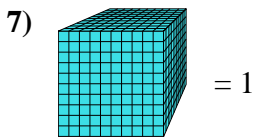
4. 0.92



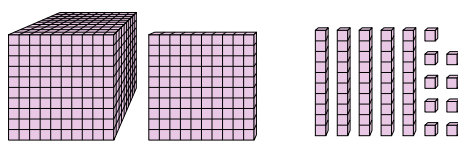
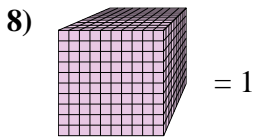
5. 3.68



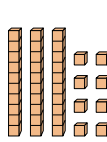
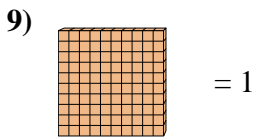
6. 7.6



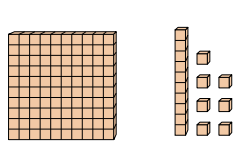
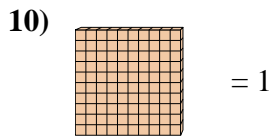
7. 0.71



8. 1.159



9. 0.38



10. 1.17

Answers