



Use the block on the left to find the value of the set of blocks on the right.

Answers

1) = 1

1. \_\_\_\_\_

2) = 1

2. \_\_\_\_\_

3) = 1

3. \_\_\_\_\_

4) = 1

4. \_\_\_\_\_

5) = 1

5. \_\_\_\_\_

6) = 1

6. \_\_\_\_\_

7) = 1

7. \_\_\_\_\_

8) = 1

8. \_\_\_\_\_

9) = 1

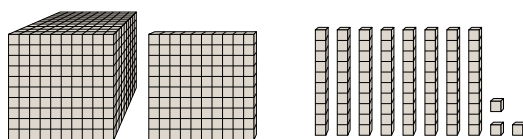
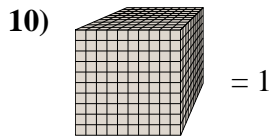
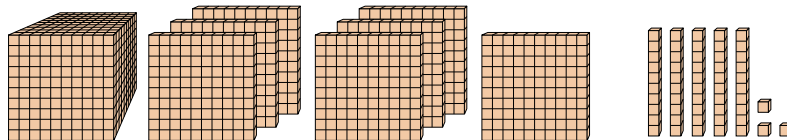
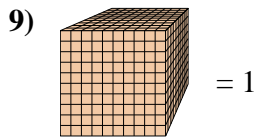
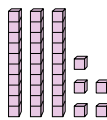
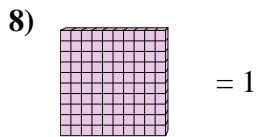
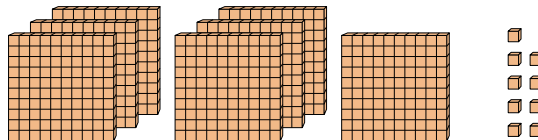
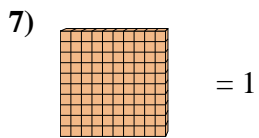
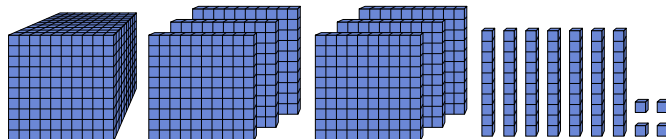
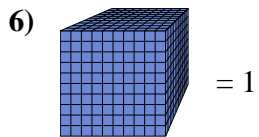
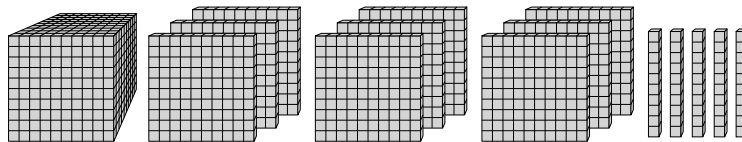
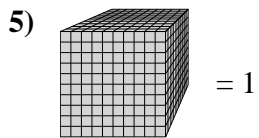
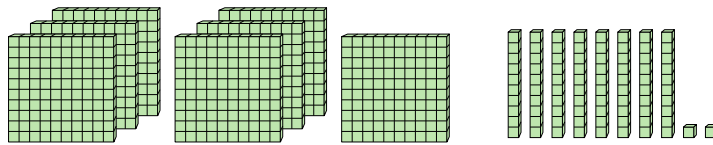
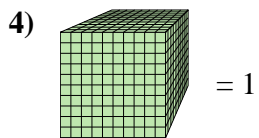
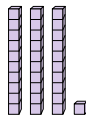
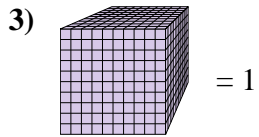
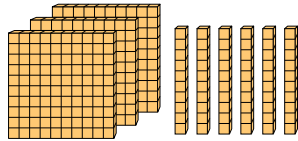
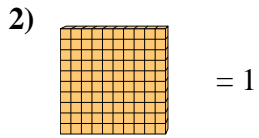
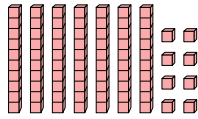
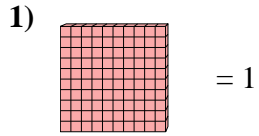
9. \_\_\_\_\_

10) = 1

10. \_\_\_\_\_



Use the block on the left to find the value of the set of blocks on the right.



Answers

1. 0.78

2. 3.6

3. 0.031

4. 0.782

5. 1.95

6. 1.674

7. 7.09

8. 0.35

9. 1.753

10. 1.183