


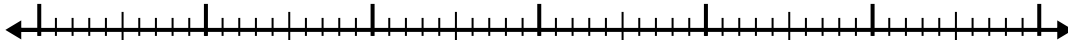


Use the number line to solve each problem.

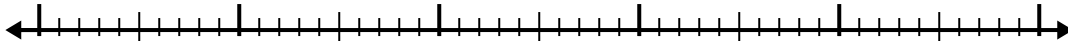
1) $5.6 + 1.4 =$



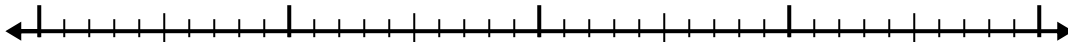
2) $1.1 + 3.5 =$



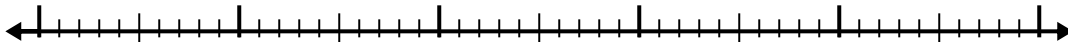
3) $8.7 + 2.6 =$




4) $7.3 + 2.6 =$



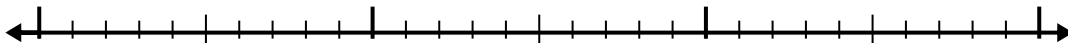
5) $1.7 + 3.2 =$



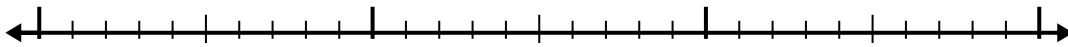
6) $2.9 + 1.1 =$



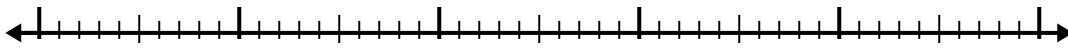
7) $1.9 + 1.5 =$



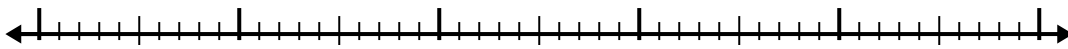
8) $7.1 + 1.9 =$



9) $1.8 + 3.7 =$



10) $7.8 + 3.7 =$



Answers

1. _____

2. _____

3. _____

4. _____

5. _____

6. _____

7. _____

8. _____

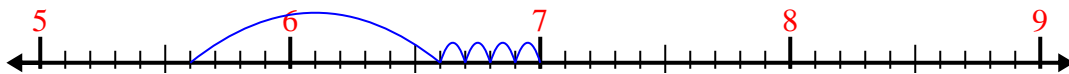
9. _____

10. _____

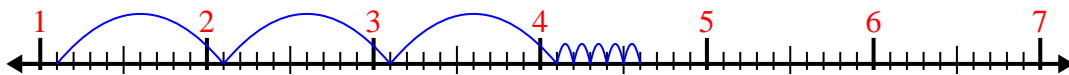


Use the number line to solve each problem.

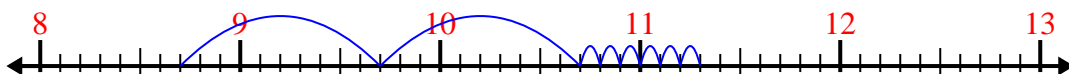
1) $5.6 + 1.4 =$



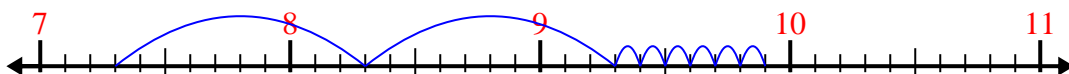
2) $1.1 + 3.5 =$



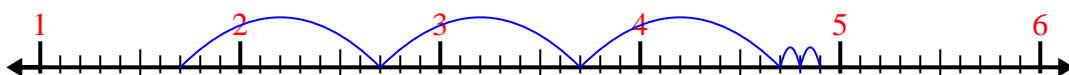
3) $8.7 + 2.6 =$



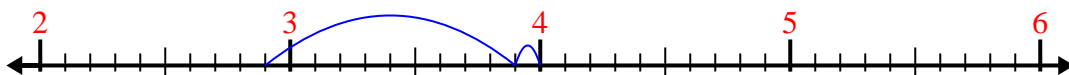
4) $7.3 + 2.6 =$




5) $1.7 + 3.2 =$



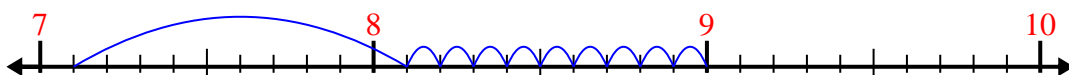
6) $2.9 + 1.1 =$



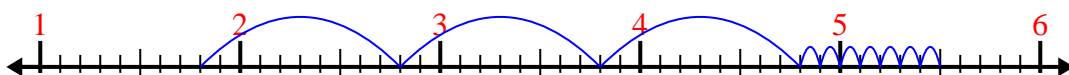
7) $1.9 + 1.5 =$



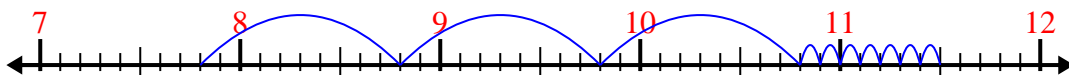
8) $7.1 + 1.9 =$



9) $1.8 + 3.7 =$



10) $7.8 + 3.7 =$



Answers

1. 7.0

2. 4.6

3. 11.3

4. 9.9

5. 4.9

6. 4.0

7. 3.4

8. 9.0

9. 5.5

10. 11.5