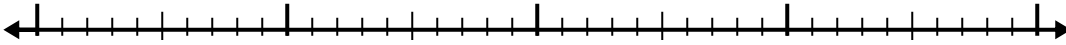


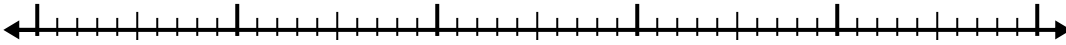


Use the number line to solve each problem.

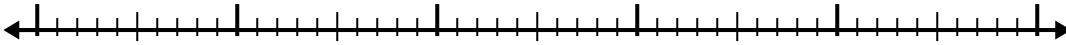
1)  $7.4 + 2.2 =$



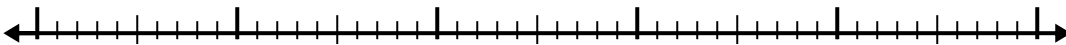
2)  $5.4 + 2.3 =$



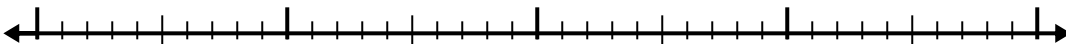
3)  $4.7 + 2.9 =$



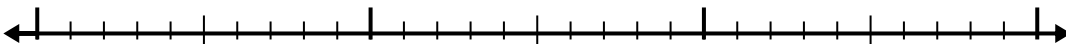
4)  $4.4 + 3.7 =$




5)  $2.2 + 2.3 =$



6)  $3.9 + 1.3 =$



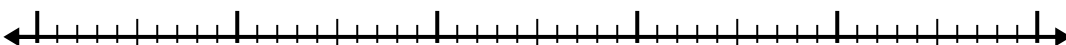
7)  $1 + 3.9 =$



8)  $5.8 + 2.1 =$



9)  $6.3 + 2.3 =$



10)  $7.3 + 2.9 =$



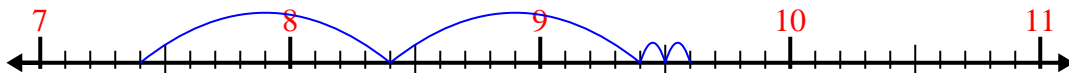
Answers

- 1. \_\_\_\_\_
- 2. \_\_\_\_\_
- 3. \_\_\_\_\_
- 4. \_\_\_\_\_
- 5. \_\_\_\_\_
- 6. \_\_\_\_\_
- 7. \_\_\_\_\_
- 8. \_\_\_\_\_
- 9. \_\_\_\_\_
- 10. \_\_\_\_\_

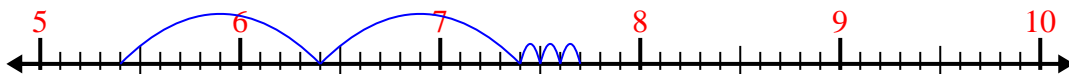


Use the number line to solve each problem.

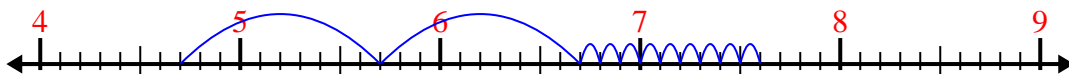
1)  $7.4 + 2.2 =$



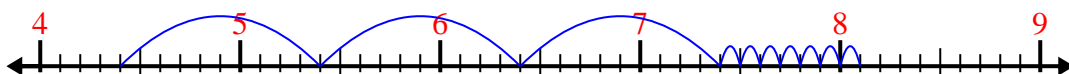
2)  $5.4 + 2.3 =$



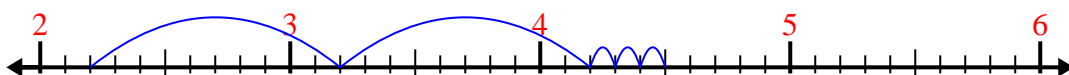
3)  $4.7 + 2.9 =$




4)  $4.4 + 3.7 =$



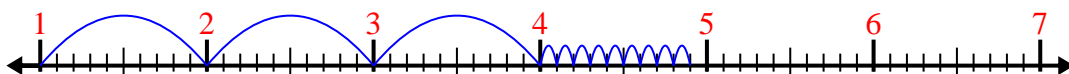
5)  $2.2 + 2.3 =$



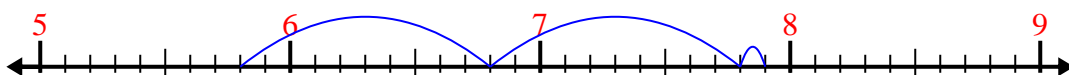
6)  $3.9 + 1.3 =$



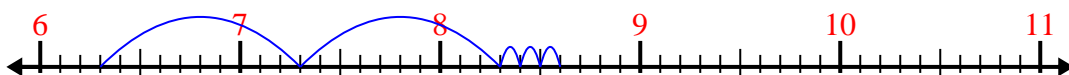
7)  $1 + 3.9 =$



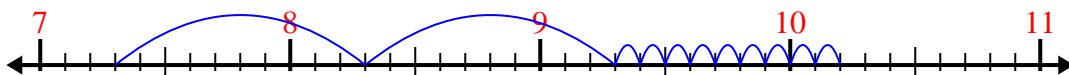
8)  $5.8 + 2.1 =$



9)  $6.3 + 2.3 =$



10)  $7.3 + 2.9 =$



Answers

1. 9.6
2. 7.7
3. 7.6
4. 8.1
5. 4.5
6. 5.2
7. 4.9
8. 7.9
9. 8.6
10. 10.2