



Count the number of shapes shown.

Answers

1) ☆ ☆ ☆

1. _____

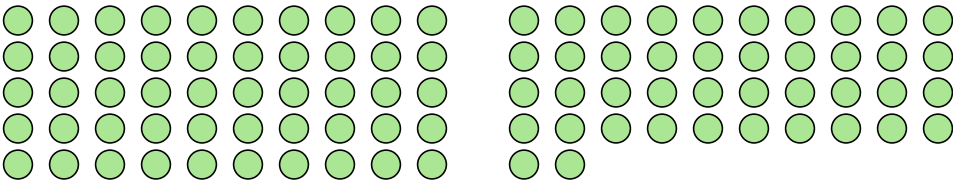
2. _____


3. _____

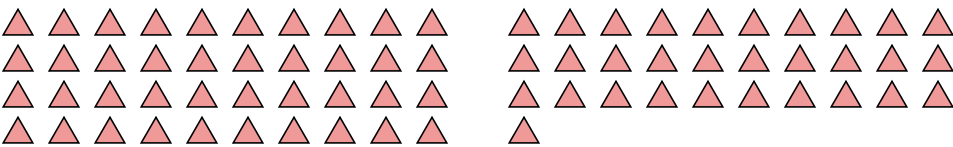
4. _____

5. _____

2) 

3) 

4) 

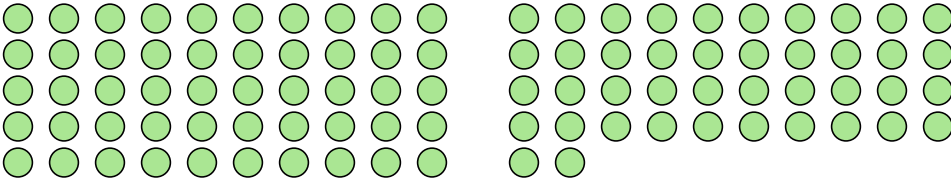
5) 

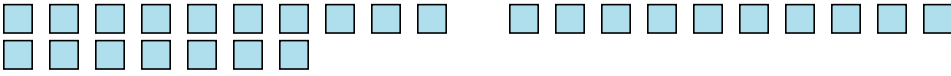


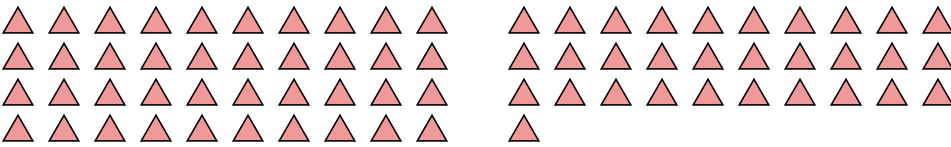
Count the number of shapes shown.

1) ☆ ☆ ☆

2) 

3) 

4) 

5) 

Answers

1. 3

2. 54

3. 92

4. 27

5. 71