



Determine which letter best represents the volume.

**Milliliter**

A milliliter is equal to about 20 drops of water.



**Liter**

Many large soda bottles are either 1 or 2 liters.


1 Liter = 1,000 Milliliters



**Answers**

1. \_\_\_\_\_
2. \_\_\_\_\_
3. \_\_\_\_\_
4. \_\_\_\_\_
5. \_\_\_\_\_
6. \_\_\_\_\_
7. \_\_\_\_\_
8. \_\_\_\_\_
9. \_\_\_\_\_

1)



Soda in a can

- A. 350 liters
- B. 2 milliliters
- C. 350 milliliters
- D. 2 liters


2)



Flour in a pan of brownies

- A. 10 milliliters
- B. 0.5 liters
- C. 3 liters
- D. 16 liters


3)



Sand a wheel barrow holds

- A. 500 milliliters
- B. 3 liters
- C. 170 liters
- D. 50 milliliters

4)



Gas tank in a car

- A. 3 liters
- B. 70 milliliters
- C. 60 liters
- D. 15 milliliters

5)



Sand in a pail

- A. 20 liters
- B. 1 milliliter
- C. 4 liters
- D. 4 milliliters


6)



Glue in a bottle

- A. 120 milliliters
- B. 3 milliliters
- C. 5 liters
- D. 2 liters

7)



Water in an ice tray

- A. 2 milliliters
- B. 0.5 liters
- C. 50 milliliters
- D. 2 liters

8)



Measuring Cup

- A. 237 milliliters
- B. 237 liters
- C. 50 milliliters
- D. 1 liter

9)



Shampoo in a bottle

- A. 1 milliliter
- B. 1.5 liters
- C. 20 liters
- D. 20 milliliters



Determine which letter best represents the volume.

**Milliliter**

A milliliter is equal to about 20 drops of water.



**Liter**

Many large soda bottles are either 1 or 2 liters.

1 Liter = 1,000 Milliliters



**Answers**

1)



Soda in a can

- A. 350 liters
- B. 2 milliliters
- C. 350 milliliters
- D. 2 liters


2)



Flour in a pan of brownies

- A. 10 milliliters
- B. 0.5 liters
- C. 3 liters
- D. 16 liters


3)



Sand a wheel barrow holds

- A. 500 milliliters
- B. 3 liters
- C. 170 liters
- D. 50 milliliters

4)



Gas tank in a car

- A. 3 liters
- B. 70 milliliters
- C. 60 liters
- D. 15 milliliters

5)



Sand in a pail

- A. 20 liters
- B. 1 milliliter
- C. 4 liters
- D. 4 milliliters


6)



Glue in a bottle

- A. 120 milliliters
- B. 3 milliliters
- C. 5 liters
- D. 2 liters

7)



Water in an ice tray

- A. 2 milliliters
- B. 0.5 liters
- C. 50 milliliters
- D. 2 liters

8)



Measuring Cup

- A. 237 milliliters
- B. 237 liters
- C. 50 milliliters
- D. 1 liter

9)



Shampoo in a bottle

- A. 1 milliliter
- B. 1.5 liters
- C. 20 liters
- D. 20 milliliters

- 1.   **C**
- 2.   **B**
- 3.   **C**
- 4.   **C**
- 5.   **C**
- 6.   **A**
- 7.   **B**
- 8.   **A**
- 9.   **B**