




Determine which letter best represents the volume.

Milliliter

A milliliter is equal to about 20 drops of water.



Liter

Many large soda bottles are either 1 or 2 liters.

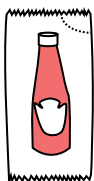
1 Liter = 1,000 Milliliters



Answers

1. _____
2. _____
3. _____
4. _____
5. _____
6. _____
7. _____
8. _____
9. _____

1)



Ketchup in a packet

- A. 500 milliliters
- B. 1 liter
- C. 1 milliliter
- D. 50 milliliters


2)



Liquid a spoon holds

- A. 5 liters
- B. 500 milliliters
- C. 5 milliliters
- D. 1 liter

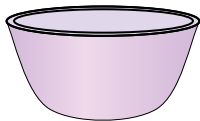
3)



Liquid in a pitcher

- A. 1 liter
- B. 5 liters
- C. 20 milliliters
- D. 500 milliliters

4)



Cereal Bowl

- A. 1 milliliter
- B. 50 milliliters
- C. 475 milliliters
- D. 2 liters


5)



Measuring Cup

- A. 237 liters
- B. 50 milliliters
- C. 237 milliliters
- D. 1 liter

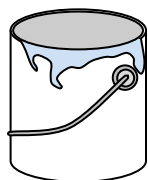
6)



Water in a pool

- A. 12000 milliliters
- B. 12000 liters
- C. 800 liters
- D. 800 milliliters

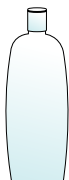
7)



Paint in a can

- A. 400 milliliters
- B. 20 milliliters
- C. 3.75 liters
- D. 1 liter

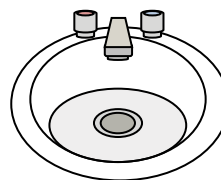
8)



Shampoo in a bottle

- A. 1 milliliter
- B. 1.5 liters
- C. 20 milliliters
- D. 20 liters

9)



Water in bathroom sink

- A. 10 milliliters
- B. 2 liters
- C. 500 milliliters
- D. 7.5 liters



Determine which letter best represents the volume.

Milliliter

A milliliter is equal to about 20 drops of water.



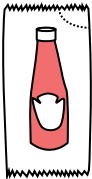
Liter


Many large soda bottles are either 1 or 2 liters.


1 Liter = 1,000 Milliliters

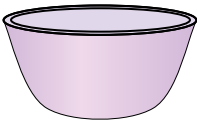



Answers

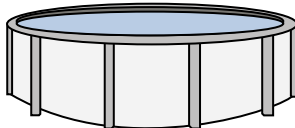
- 1) 
 Ketchup in a packet
 A. 500 milliliters
 B. 1 liter
 C. 1 milliliter
 D. 50 milliliters


- 2) 
 Liquid a spoon holds
 A. 5 liters
 B. 500 milliliters
 C. 5 milliliters
 D. 1 liter


- 3) 
 Liquid in a pitcher
 A. 1 liter
 B. 5 liters
 C. 20 milliliters
 D. 500 milliliters

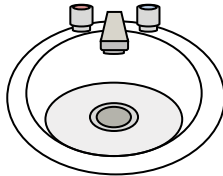
- 4) 
 Cereal Bowl
 A. 1 milliliter
 B. 50 milliliters
 C. 475 milliliters
 D. 2 liters

- 5) 
 Measuring Cup
 A. 237 liters
 B. 50 milliliters
 C. 237 milliliters
 D. 1 liter

- 6) 
 Water in a pool
 A. 12000 milliliters
 B. 12000 liters
 C. 800 liters
 D. 800 milliliters

- 7) 
 Paint in a can
 A. 400 milliliters
 B. 20 milliliters
 C. 3.75 liters
 D. 1 liter

- 8) 
 Shampoo in a bottle
 A. 1 milliliter
 B. 1.5 liters
 C. 20 milliliters
 D. 20 liters

- 9) 
 Water in bathroom sink
 A. 10 milliliters
 B. 2 liters
 C. 500 milliliters
 D. 7.5 liters

1. **C**
 2. **C**
 3. **B**
 4. **C**
 5. **C**
 6. **B**
 7. **C**
 8. **B**
 9. **D**