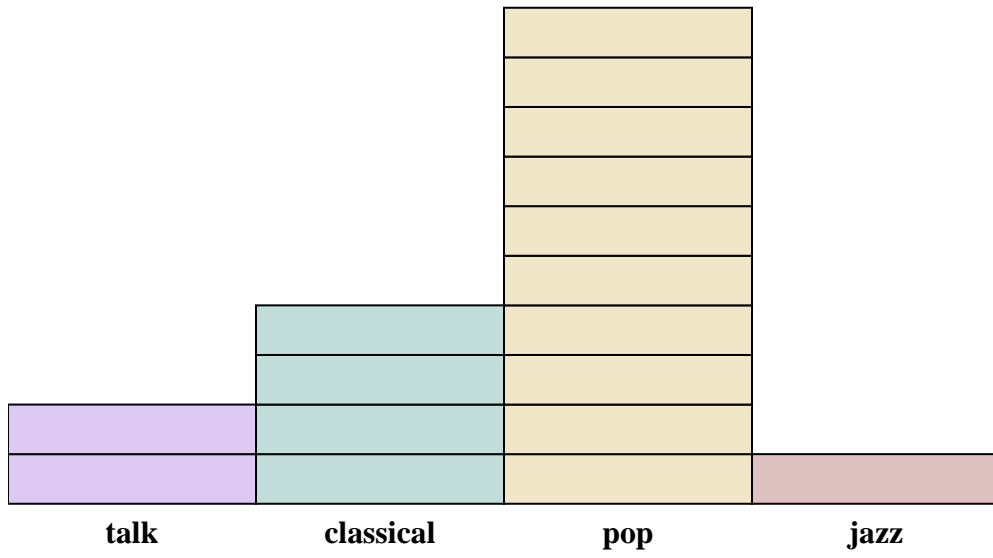
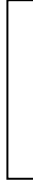




Solve each problem.



Each  = 2 ads played

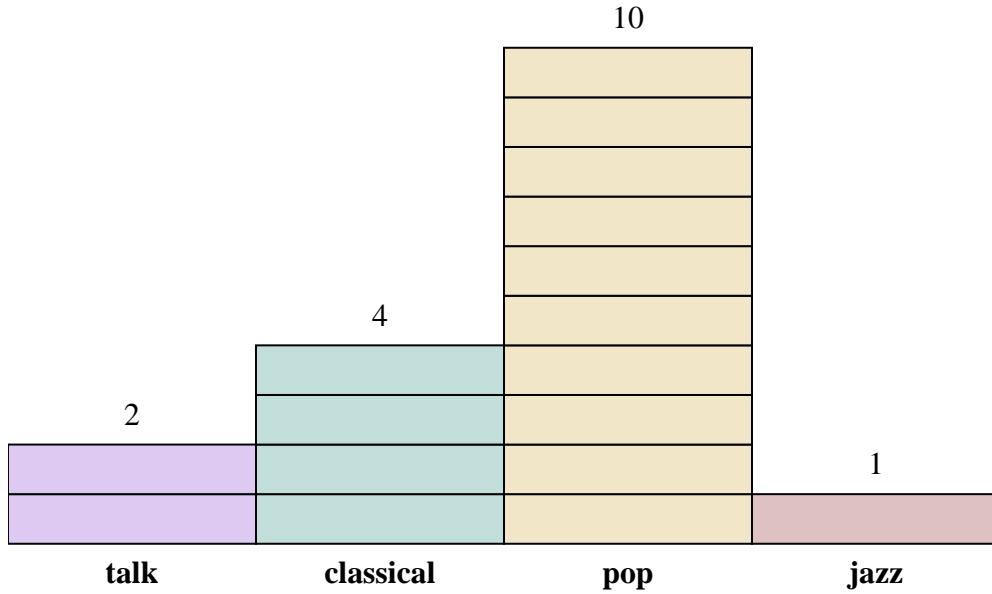
Answers

1. _____
2. _____
3. _____
4. _____
5. _____
6. _____
7. _____
8. _____
9. _____
10. _____

- 1) How many more ads did the classical station have than the talk station?
- 2) Which station had the most ads?
- 3) Which station had the fewest ads?
- 4) What is the total number of ads on all the stations?
- 5) Were there fewer ads on the jazz station or the talk station?
- 6) Were there more ads on the pop station or the talk station?
- 7) Which station had exactly 8 ads?
- 8) How many ads were on the pop station?
- 9) What is the combined number of ads played on the jazz station and the pop station?
- 10) What is the difference in the number of ads played on the jazz station and the number played on the classical station?



Solve each problem.



Each  = 2 ads played

Answers

1. 4
2. pop
3. jazz
4. 34
5. jazz
6. pop
7. classical
8. 20
9. 22
10. 6

- 1) How many more ads did the classical station have than the talk station?
- 2) Which station had the most ads?
- 3) Which station had the fewest ads?
- 4) What is the total number of ads on all the stations?
- 5) Were there fewer ads on the jazz station or the talk station?
- 6) Were there more ads on the pop station or the talk station?
- 7) Which station had exactly 8 ads?
- 8) How many ads were on the pop station?
- 9) What is the combined number of ads played on the jazz station and the pop station?
- 10) What is the difference in the number of ads played on the jazz station and the number played on the classical station?