



Determine which graph goes with which table.

1)

| Color | People |
|--------|--------|
| blue | 6,000 |
| green | 9,000 |
| orange | 8,000 |
| yellow | 4,000 |
| red | 7,000 |

2)

| Color | People |
|--------|--------|
| blue | 9,000 |
| green | 8,000 |
| orange | 4,000 |
| yellow | 7,000 |
| red | 6,000 |

3)

| Color | People |
|--------|--------|
| blue | 4,000 |
| green | 9,000 |
| orange | 8,000 |
| yellow | 6,000 |
| red | 7,000 |

4)

| Color | People |
|--------|--------|
| blue | 8,000 |
| green | 7,000 |
| orange | 4,000 |
| yellow | 6,000 |
| red | 9,000 |

5)

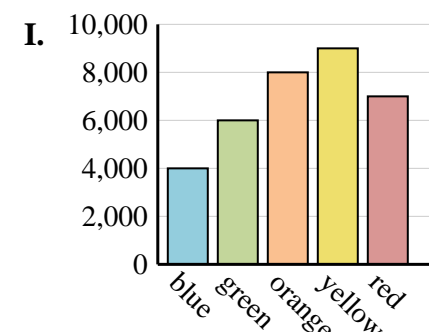
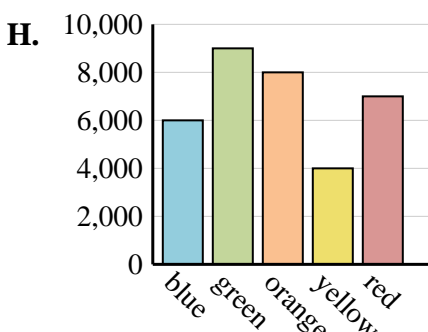
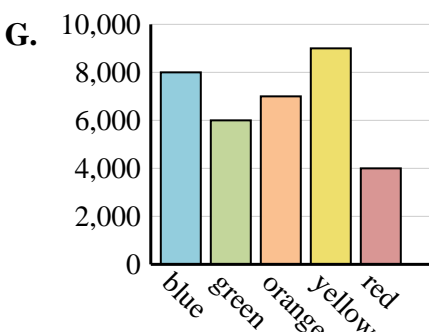
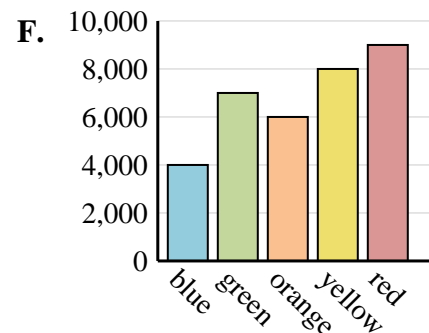
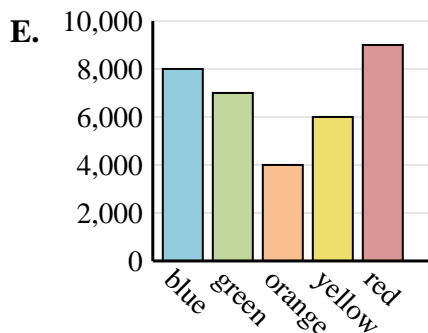
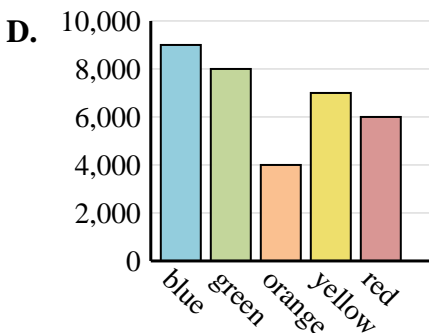
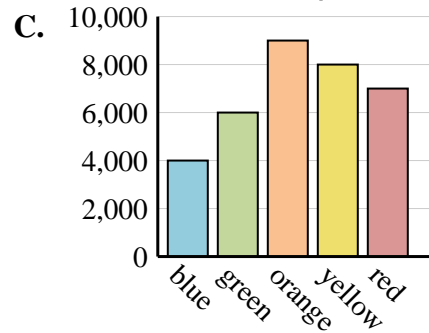
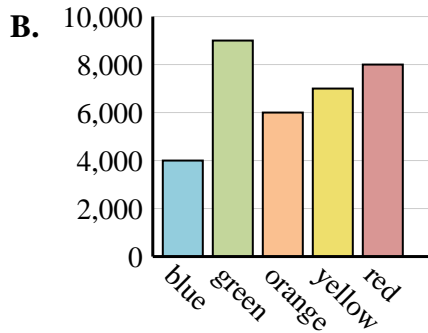
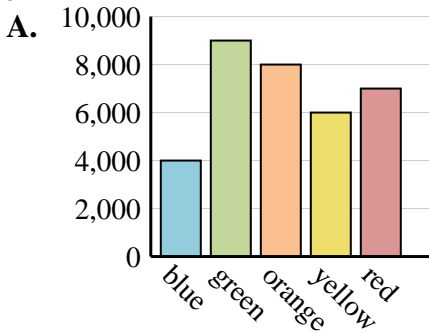
| Color | People |
|--------|--------|
| blue | 8,000 |
| green | 6,000 |
| orange | 7,000 |
| yellow | 9,000 |
| red | 4,000 |

6)

| Color | People |
|--------|--------|
| blue | 4,000 |
| green | 9,000 |
| orange | 6,000 |
| yellow | 7,000 |
| red | 8,000 |

Answers

1. _____
2. _____
3. _____
4. _____
5. _____
6. _____





Determine which graph goes with which table.

1)

| Color | People |
|--------|--------|
| blue | 6,000 |
| green | 9,000 |
| orange | 8,000 |
| yellow | 4,000 |
| red | 7,000 |

2)

| Color | People |
|--------|--------|
| blue | 9,000 |
| green | 8,000 |
| orange | 4,000 |
| yellow | 7,000 |
| red | 6,000 |

3)

| Color | People |
|--------|--------|
| blue | 4,000 |
| green | 9,000 |
| orange | 8,000 |
| yellow | 6,000 |
| red | 7,000 |

4)

| Color | People |
|--------|--------|
| blue | 8,000 |
| green | 7,000 |
| orange | 4,000 |
| yellow | 6,000 |
| red | 9,000 |

5)

| Color | People |
|--------|--------|
| blue | 8,000 |
| green | 6,000 |
| orange | 7,000 |
| yellow | 9,000 |
| red | 4,000 |

6)

| Color | People |
|--------|--------|
| blue | 4,000 |
| green | 9,000 |
| orange | 6,000 |
| yellow | 7,000 |
| red | 8,000 |

Answers

1. **H**
2. **D**
3. **A**
4. **E**
5. **G**
6. **B**

