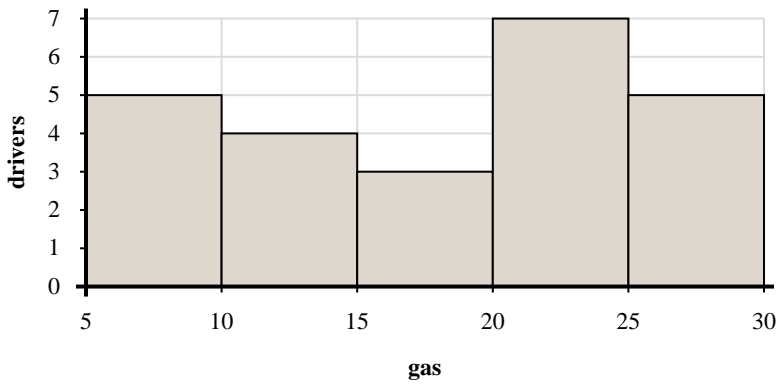
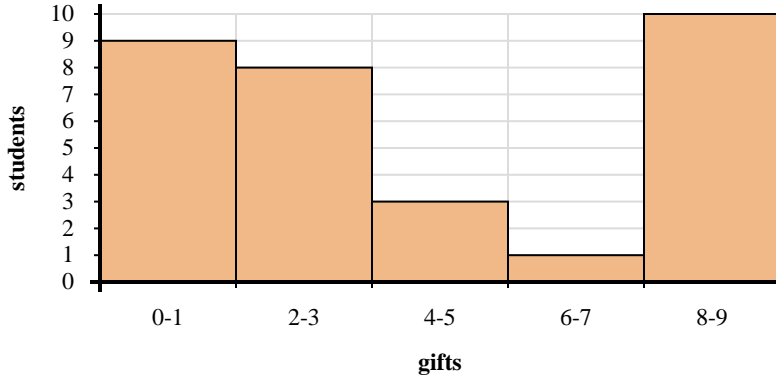




Use the histograms shown to answer each question.



- 1) Most drivers purchased between _____ and _____ gallons.
- 2) How many drivers purchased between 15 and 20 gallons?
- 3) How many drivers are represented in this histogram?
- 4) If a driver purchased 27 gallons which bar would they be added to?



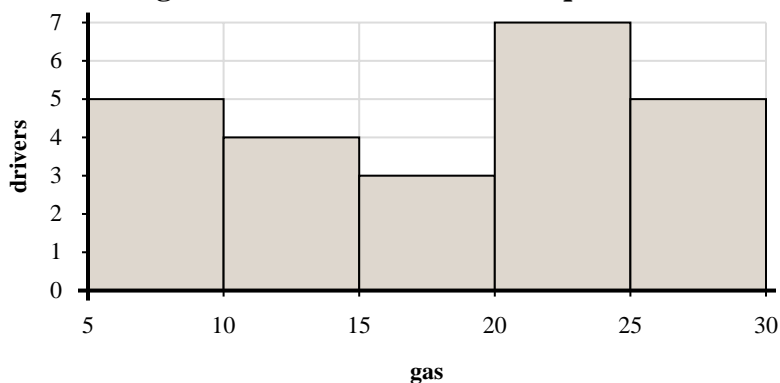
- 5) If a student received 0 gifts which bar would they be added to?
- 6) Most students received between _____ and _____ gifts.
- 7) How many students received between 0 and 2 gifts?
- 8) How many students are represented in this histogram?

Answers

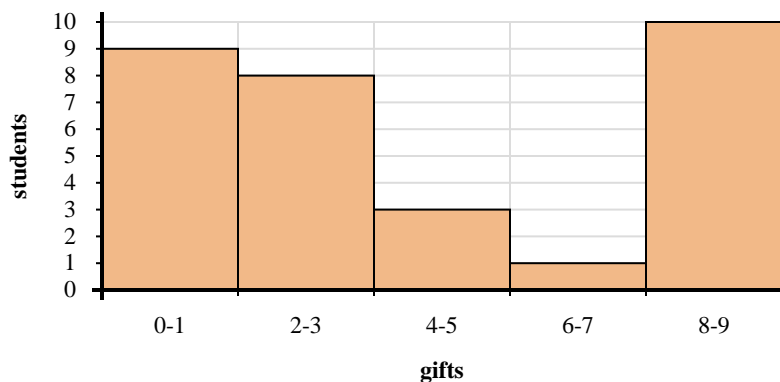
1. _____
2. _____
3. _____
4. _____
5. _____
6. _____
7. _____
8. _____



Use the histograms shown to answer each question.



- 1) Most drivers purchased between _____ and _____ gallons.
- 2) How many drivers purchased between 15 and 20 gallons?
- 3) How many drivers are represented in this histogram?
- 4) If a driver purchased 27 gallons which bar would they be added to?



- 5) If a student received 0 gifts which bar would they be added to?
- 6) Most students received between _____ and _____ gifts.
- 7) How many students received between 0 and 2 gifts?
- 8) How many students are represented in this histogram?

Answers

1. 20 25
2. 3
3. 24
4. 5
5. 1
6. 8 10
7. 9
8. 31