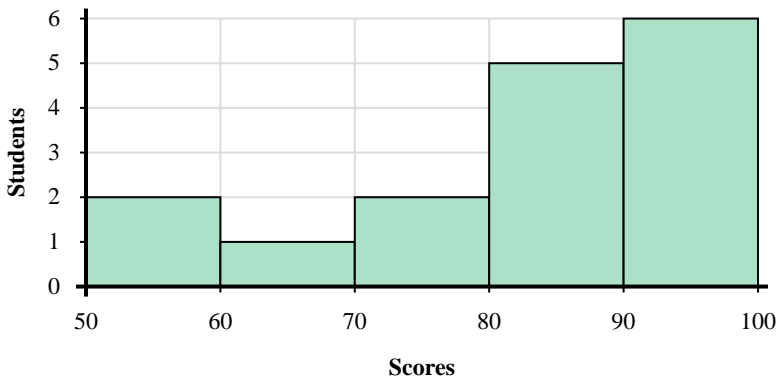
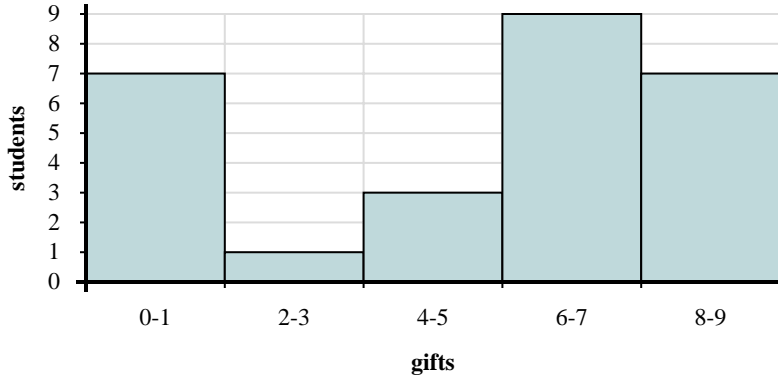




Use the histograms shown to answer each question.



- 1) How many students scored between a 90 and 100?
- 2) Most students scored between a _____ and _____.
- 3) If a student scored a 54 which bar would they be added to?
- 4) How many students are represented in this histogram?



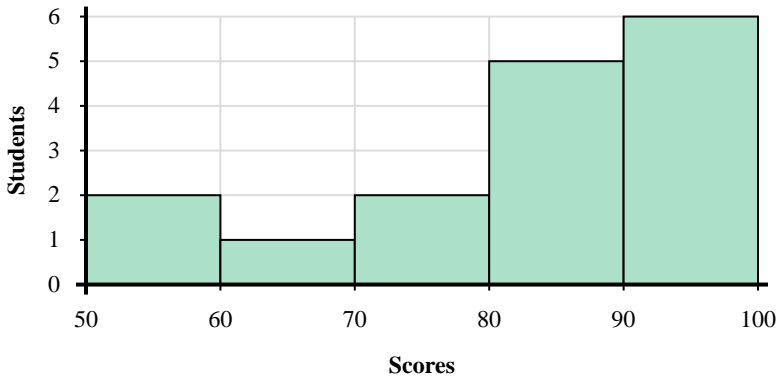
- 5) Most students received between _____ and _____ gifts.
- 6) How many students are represented in this histogram?
- 7) If a student received 0 gifts which bar would they be added to?
- 8) How many students received between 6 and 8 gifts?

Answers

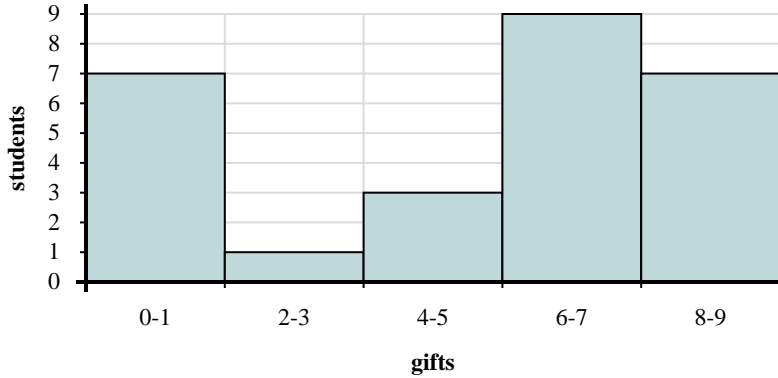
1. _____
2. _____
3. _____
4. _____
5. _____
6. _____
7. _____
8. _____



Use the histograms shown to answer each question.



- How many students scored between a 90 and 100?
- Most students scored between a _____ and _____.
- If a student scored a 54 which bar would they be added to?
- How many students are represented in this histogram?



- Most students received between _____ and _____ gifts.
- How many students are represented in this histogram?
- If a student received 0 gifts which bar would they be added to?
- How many students received between 6 and 8 gifts?

Answers

- 6
- 90 100
- 1
- 16
- 6 8
- 27
- 1
- 9