

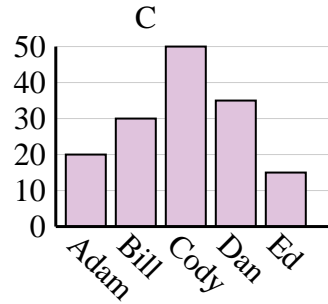
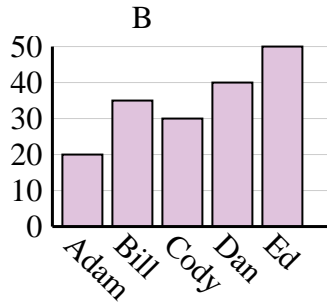
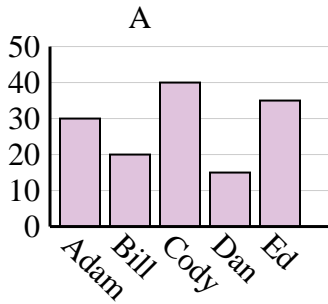


Determine which graph (A, B or C) best represents the information in the table.

Answers

1)

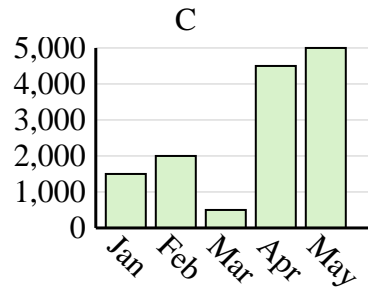
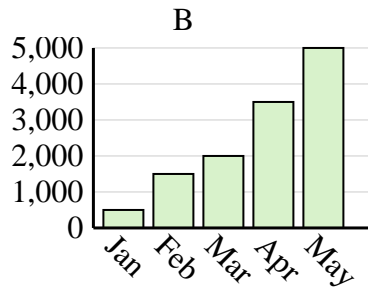
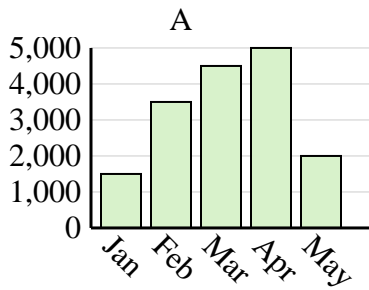
Name	Adam	Bill	Cody	Dan	Ed
Points	30	20	40	15	35



1. _____
2. _____
3. _____
4. _____

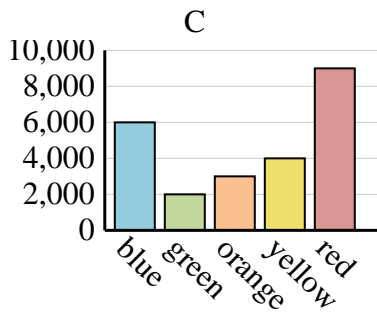
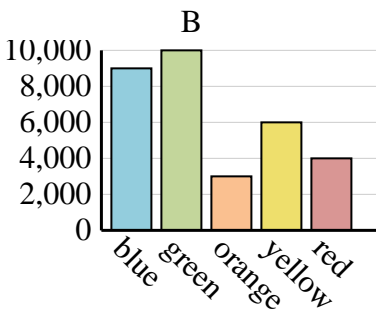
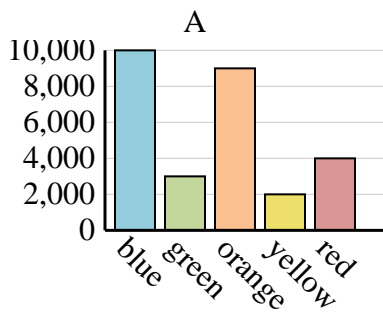
2)

Sales	Jan	Feb	Mar	Apr	May
Month	500	1,500	2,000	3,500	5,000



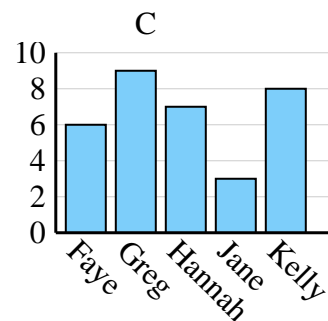
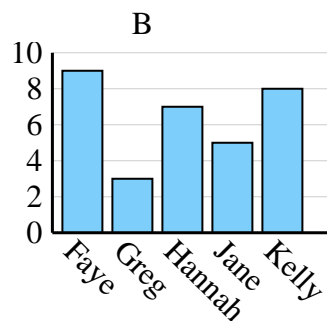
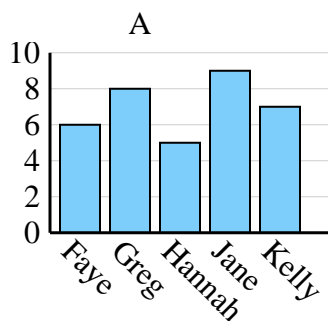
3)

Favorite Color	blue	green	orange	yellow	red
People	9,000	10,000	3,000	6,000	4,000



4)

Name	Faye	Greg	Hannah	Jane	Kelly
States Lived In	9	3	7	5	8

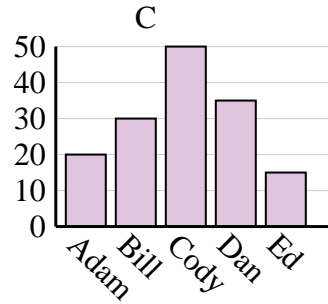
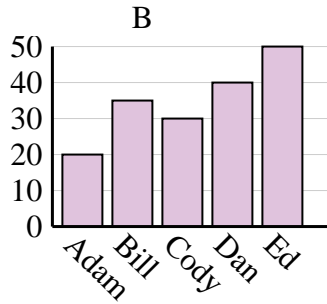
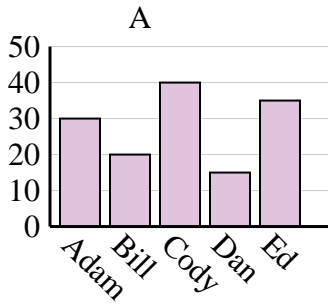




Determine which graph (A, B or C) best represents the information in the table.

Answers

Name	Adam	Bill	Cody	Dan	Ed
Points	30	20	40	15	35



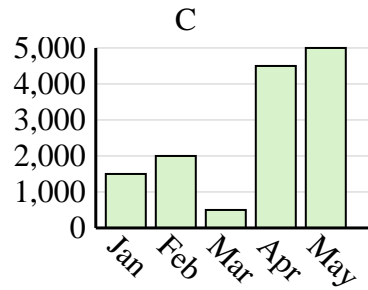
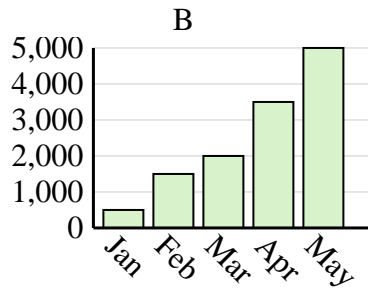
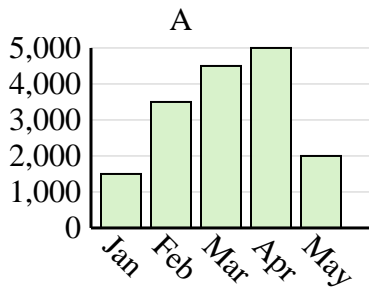
1. **A**

2. **B**

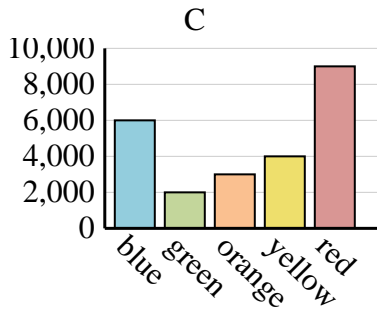
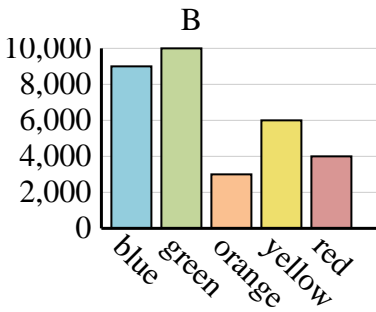
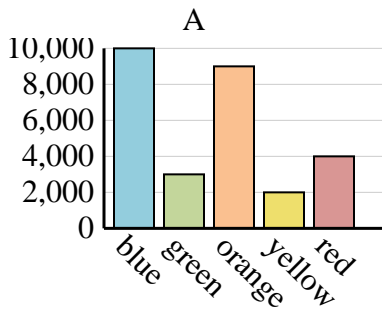
3. **B**

4. **B**

Sales	Jan	Feb	Mar	Apr	May
Month	500	1,500	2,000	3,500	5,000



Favorite Color	blue	green	orange	yellow	red
People	9,000	10,000	3,000	6,000	4,000



Name	Faye	Greg	Hannah	Jane	Kelly
States Lived In	9	3	7	5	8

