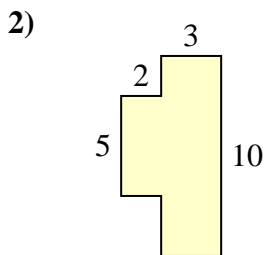
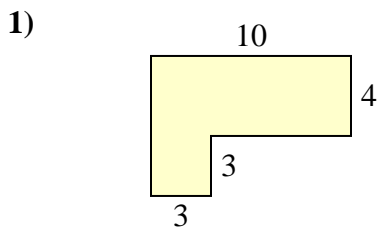




Find the total area of each shape. Measurement is in millimeters (mm). Not to scale.

Answers

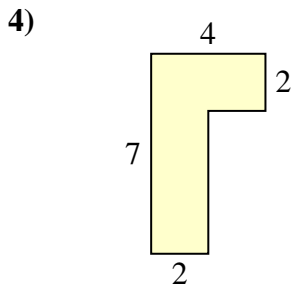
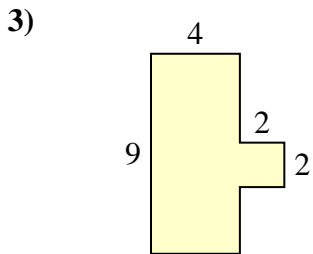


1. \_\_\_\_\_

2. \_\_\_\_\_

3. \_\_\_\_\_

4. \_\_\_\_\_

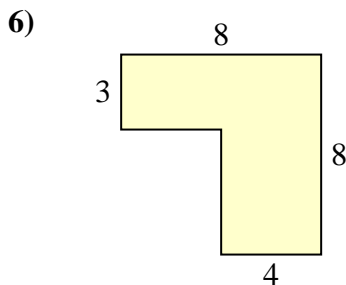
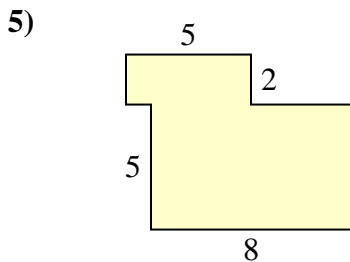


5. \_\_\_\_\_

6. \_\_\_\_\_

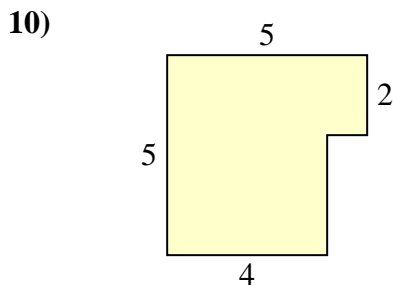
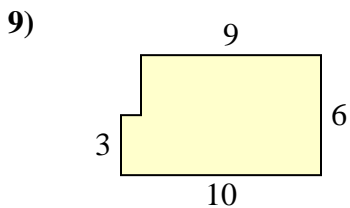
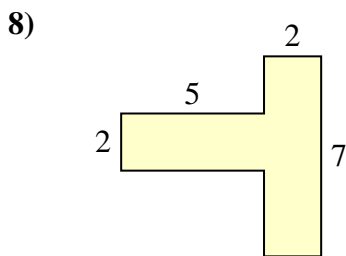
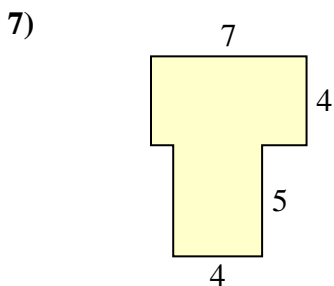
7. \_\_\_\_\_

8. \_\_\_\_\_



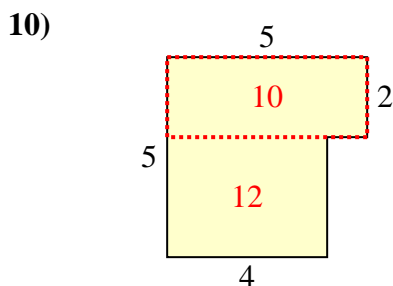
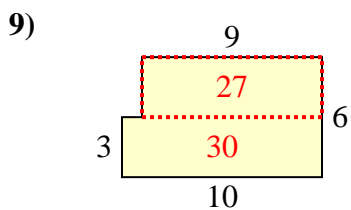
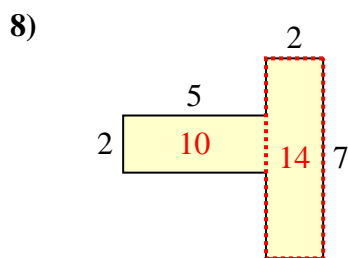
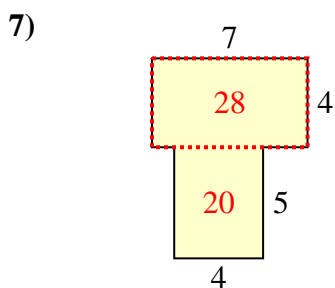
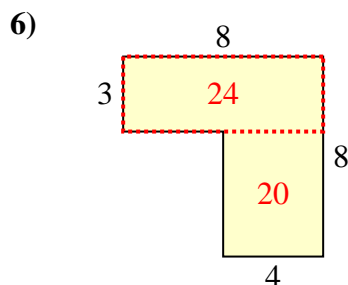
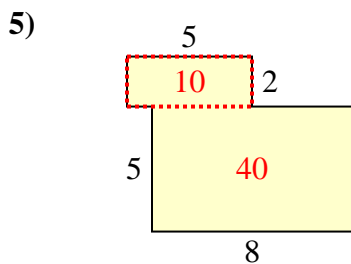
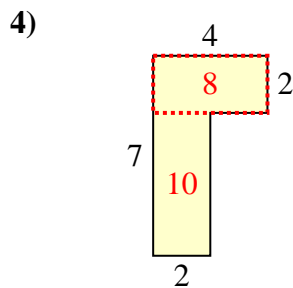
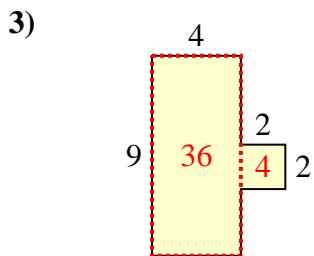
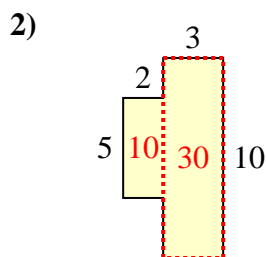
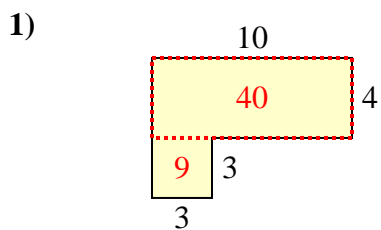
9. \_\_\_\_\_

10. \_\_\_\_\_





Find the total area of each shape. Measurement is in millimeters (mm). Not to scale.



Answers

1. 49 mm<sup>2</sup>
2. 40 mm<sup>2</sup>
3. 40 mm<sup>2</sup>
4. 18 mm<sup>2</sup>
5. 50 mm<sup>2</sup>
6. 44 mm<sup>2</sup>
7. 48 mm<sup>2</sup>
8. 24 mm<sup>2</sup>
9. 57 mm<sup>2</sup>
10. 22 mm<sup>2</sup>