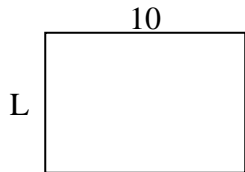


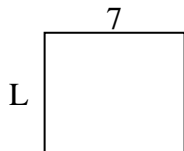


Determine the value of 'L'. Lengths are in cm (not to scale).


1) perimeter = 34



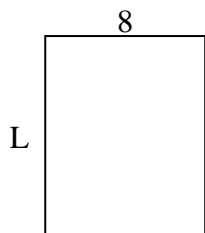
2) perimeter = 26



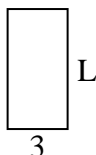
3) perimeter = 18



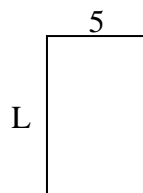
4) perimeter = 36



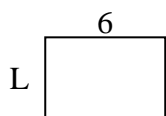
5) perimeter = 18




6) perimeter = 26



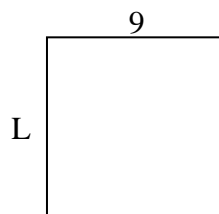
7) perimeter = 20



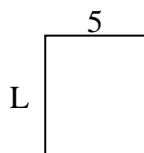
8) perimeter = 32



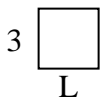
9) perimeter = 36



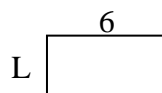
10) perimeter = 22



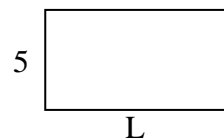
11) perimeter = 12




12) perimeter = 18



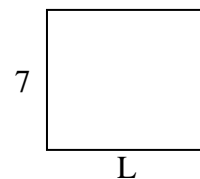
13) perimeter = 28



14) perimeter = 24



15) perimeter = 30



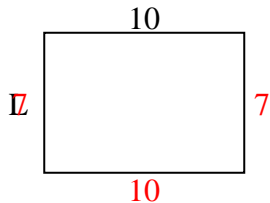
**Answers**

1. \_\_\_\_\_
2. \_\_\_\_\_
3. \_\_\_\_\_
4. \_\_\_\_\_
5. \_\_\_\_\_
6. \_\_\_\_\_
7. \_\_\_\_\_
8. \_\_\_\_\_
9. \_\_\_\_\_
10. \_\_\_\_\_
11. \_\_\_\_\_
12. \_\_\_\_\_
13. \_\_\_\_\_
14. \_\_\_\_\_
15. \_\_\_\_\_

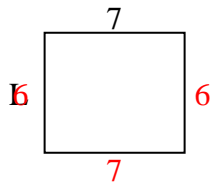


Determine the value of 'L'. Lengths are in cm (not to scale).

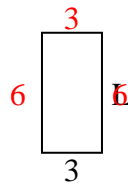
1) perimeter = 34



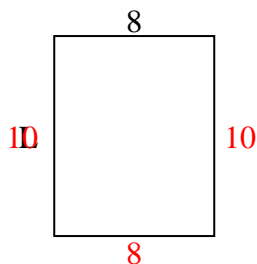
2) perimeter = 26



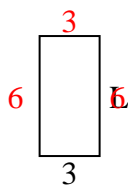
3) perimeter = 18



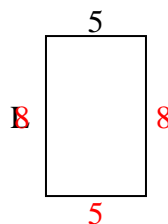
4) perimeter = 36



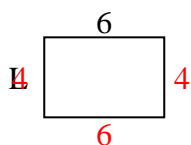
5) perimeter = 18



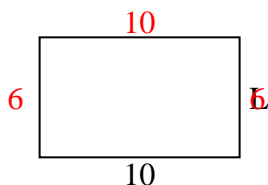
6) perimeter = 26



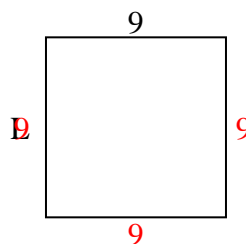
7) perimeter = 20



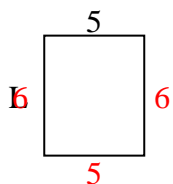
8) perimeter = 32



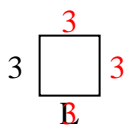
9) perimeter = 36



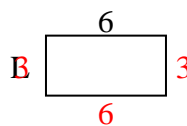
10) perimeter = 22



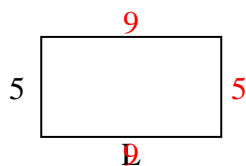
11) perimeter = 12



12) perimeter = 18



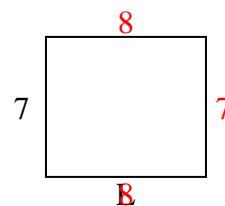
13) perimeter = 28



14) perimeter = 24



15) perimeter = 30



Answers

1. 7 cm

2. 6 cm

3. 6 cm

4. 10 cm

5. 6 cm

6. 8 cm

7. 4 cm

8. 6 cm

9. 9 cm

10. 6 cm

11. 3 cm

12. 3 cm

13. 9 cm

14. 4 cm

15. 8 cm