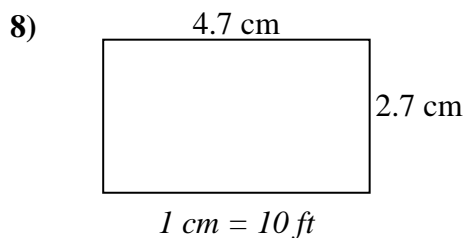
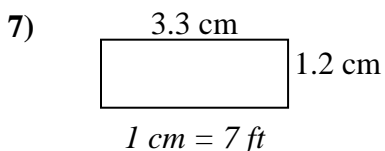
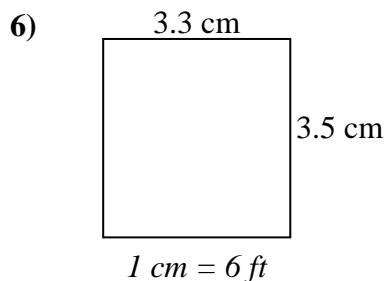
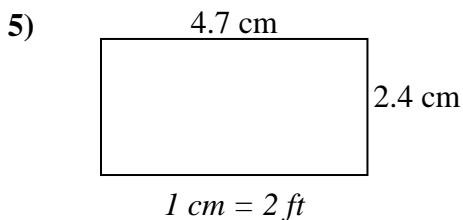
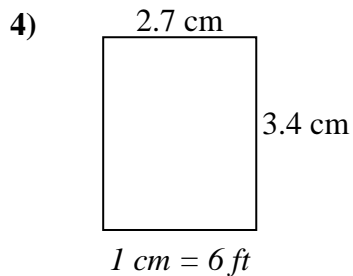
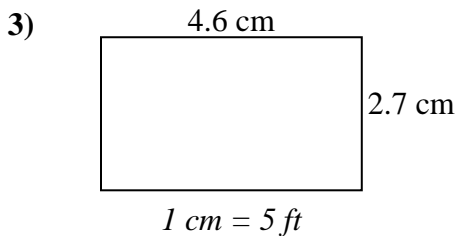
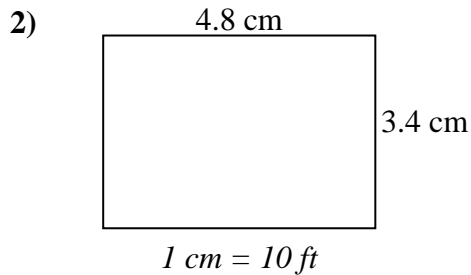
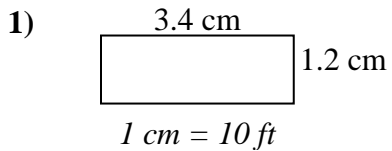




Determine the actual width, height and area of each scale rectangle.

Round the area to the nearest whole number.



Answers

1. _____

2. _____

3. _____

4. _____

5. _____

6. _____

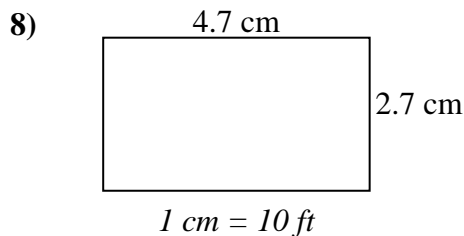
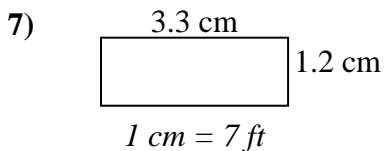
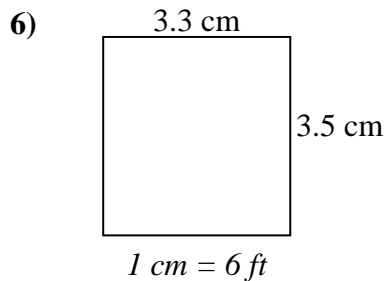
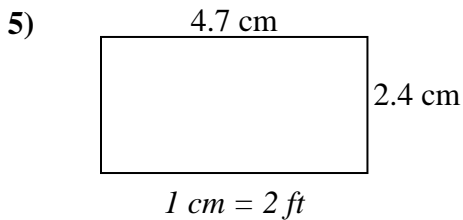
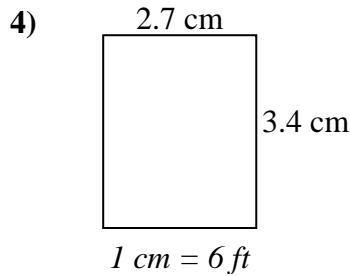
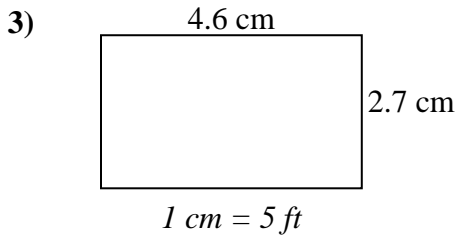
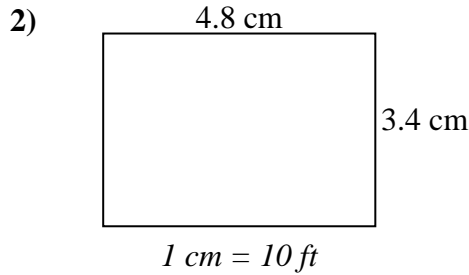
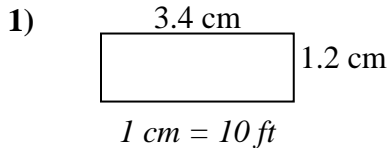
7. _____

8. _____



Determine the actual width, height and area of each scale rectangle.

Round the area to the nearest whole number.



Answers

1.	<u>34</u>	<u>12</u>	<u>408</u>
2.	<u>48</u>	<u>34</u>	<u>1,632</u>
3.	<u>23</u>	<u>13.5</u>	<u>311</u>
4.	<u>16.2</u>	<u>20.4</u>	<u>330</u>
5.	<u>9.4</u>	<u>4.8</u>	<u>45</u>
6.	<u>19.8</u>	<u>21</u>	<u>416</u>
7.	<u>23.1</u>	<u>8.4</u>	<u>194</u>
8.	<u>47</u>	<u>27</u>	<u>1,269</u>