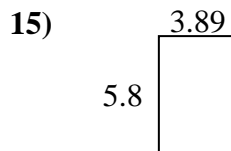
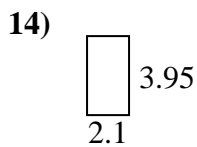
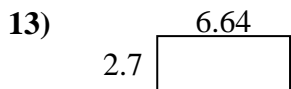
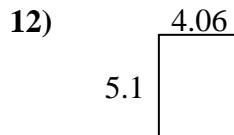
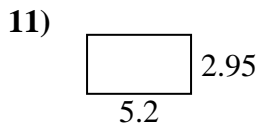
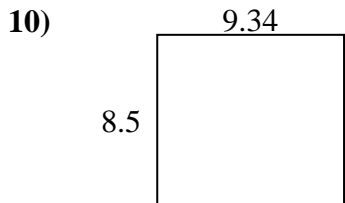
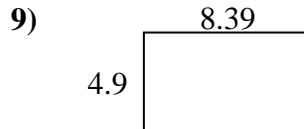
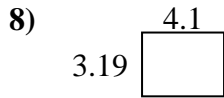
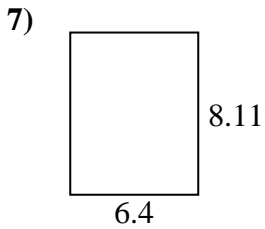
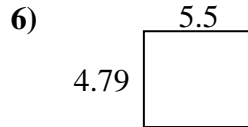
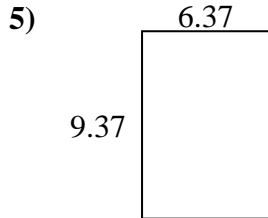
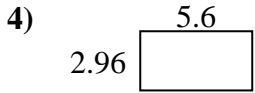
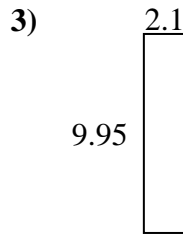
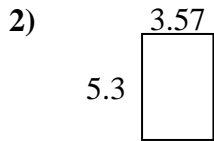
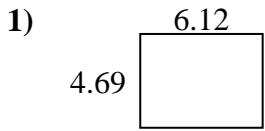




Find the perimeter and area of each figure. Answer to the nearest 10th.

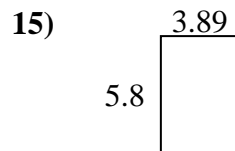
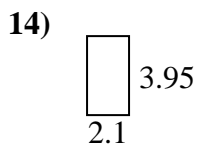
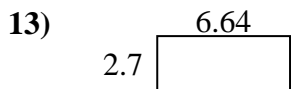
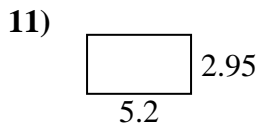
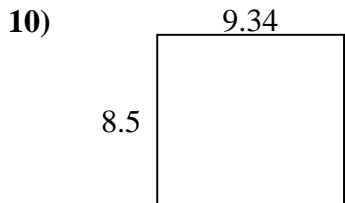
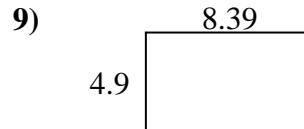
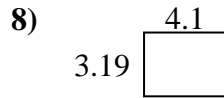
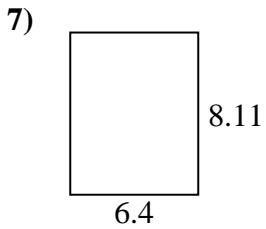
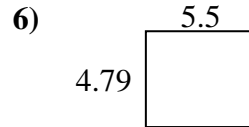
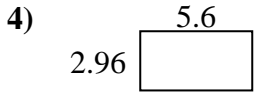
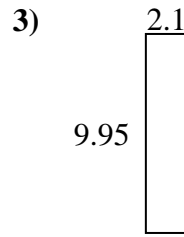
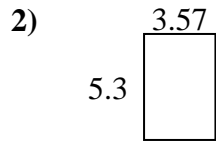
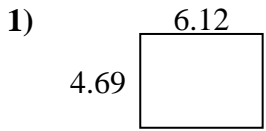


Answers

1. _____
2. _____
3. _____
4. _____
5. _____
6. _____
7. _____
8. _____
9. _____
10. _____
11. _____
12. _____
13. _____
14. _____
15. _____



Find the perimeter and area of each figure. Answer to the nearest 10th.



Answers

1.	<u>28.7</u>	<u>21.6</u>
2.	<u>18.9</u>	<u>17.7</u>
3.	<u>20.9</u>	<u>24.1</u>
4.	<u>16.6</u>	<u>17.1</u>
5.	<u>59.7</u>	<u>31.5</u>
6.	<u>26.3</u>	<u>20.6</u>
7.	<u>51.9</u>	<u>29.0</u>
8.	<u>13.1</u>	<u>14.6</u>
9.	<u>41.1</u>	<u>26.6</u>
10.	<u>79.4</u>	<u>35.7</u>
11.	<u>15.3</u>	<u>16.3</u>
12.	<u>20.7</u>	<u>18.3</u>
13.	<u>17.9</u>	<u>18.7</u>
14.	<u>8.3</u>	<u>12.1</u>
15.	<u>22.6</u>	<u>19.4</u>