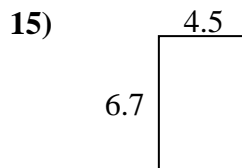
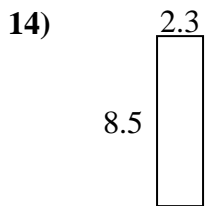
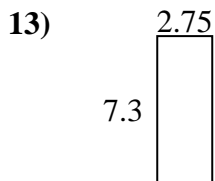
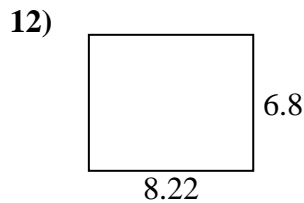
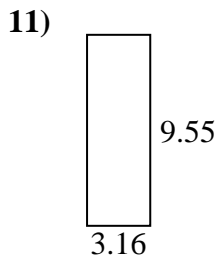
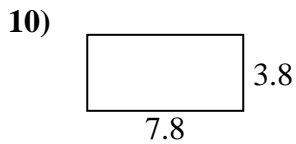
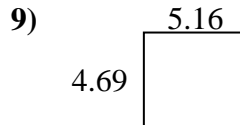
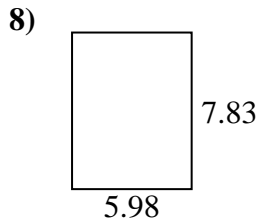
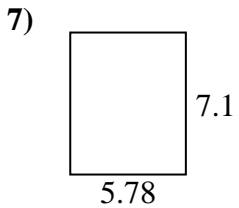
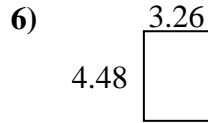
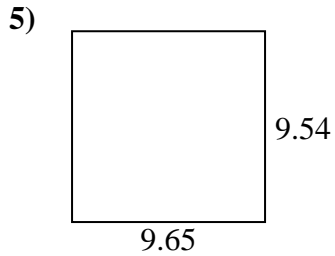
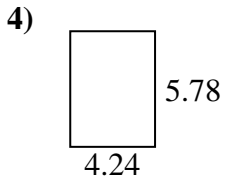
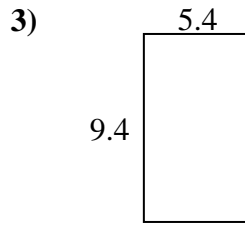
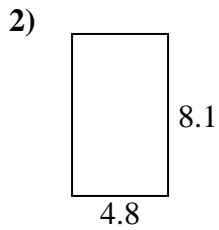
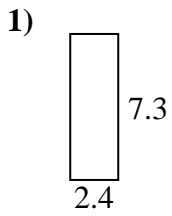




Find the perimeter and area of each figure. Answer to the nearest 10th.

Answers



1. _____

2. _____

3. _____

4. _____

5. _____

6. _____

7. _____

8. _____

9. _____

10. _____

11. _____

12. _____

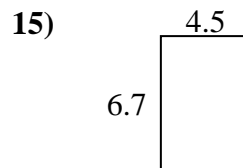
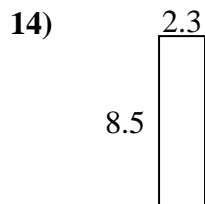
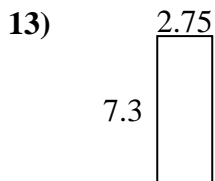
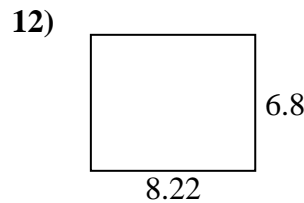
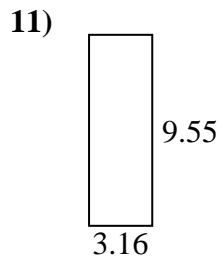
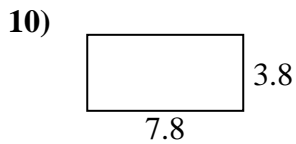
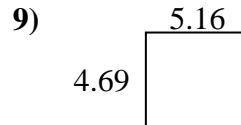
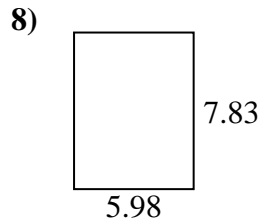
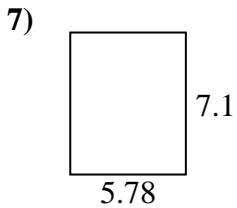
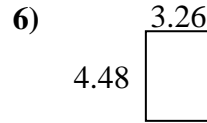
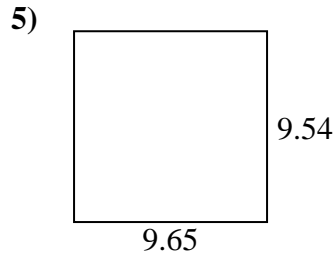
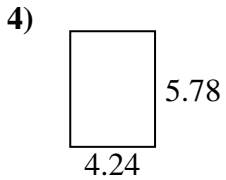
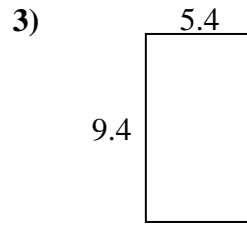
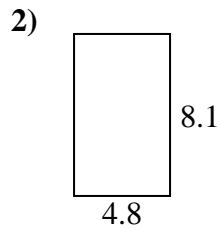
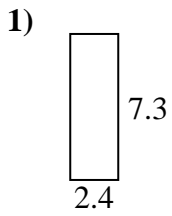
13. _____

14. _____

15. _____



Find the perimeter and area of each figure. Answer to the nearest 10th.



Answers

| | | |
|-----|-------------|-------------|
| 1. | <u>17.5</u> | <u>19.4</u> |
| 2. | <u>38.9</u> | <u>25.8</u> |
| 3. | <u>50.8</u> | <u>29.6</u> |
| 4. | <u>24.5</u> | <u>20.0</u> |
| 5. | <u>92.1</u> | <u>38.4</u> |
| 6. | <u>14.6</u> | <u>15.5</u> |
| 7. | <u>41.0</u> | <u>25.8</u> |
| 8. | <u>46.8</u> | <u>27.6</u> |
| 9. | <u>24.2</u> | <u>19.7</u> |
| 10. | <u>29.6</u> | <u>23.2</u> |
| 11. | <u>30.2</u> | <u>25.4</u> |
| 12. | <u>55.9</u> | <u>30.0</u> |
| 13. | <u>20.1</u> | <u>20.1</u> |
| 14. | <u>19.6</u> | <u>21.6</u> |
| 15. | <u>30.2</u> | <u>22.4</u> |