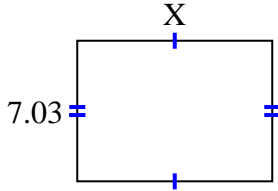


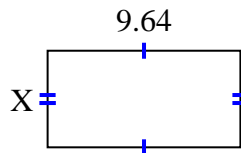


Find the value of X for each figure. Each figure is in centimeters (cm). Not to scale.

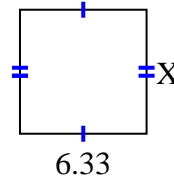
1) area =  $68.5425 \text{ cm}^2$



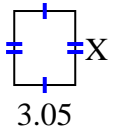
2) area =  $46.5612 \text{ cm}^2$



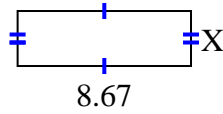
3) area =  $39.246 \text{ cm}^2$



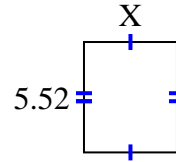
4) area =  $11.285 \text{ cm}^2$



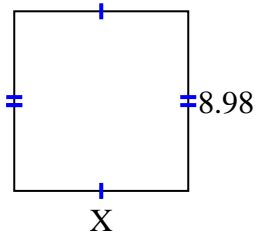
5) area =  $23.8425 \text{ cm}^2$



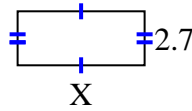
6) area =  $25.668 \text{ cm}^2$



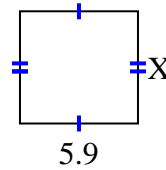
7) area =  $78.126 \text{ cm}^2$



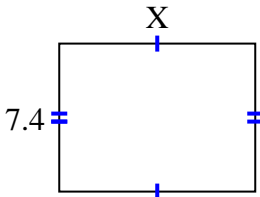
8) area =  $17.145 \text{ cm}^2$



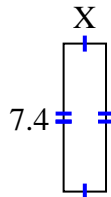
9) area =  $33.099 \text{ cm}^2$



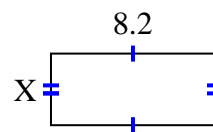
10) area =  $72.52 \text{ cm}^2$



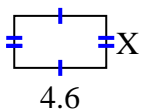
11) area =  $15.688 \text{ cm}^2$



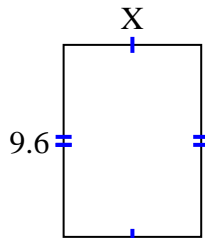
12) area =  $29.356 \text{ cm}^2$



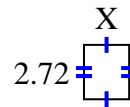
13) area =  $11.96 \text{ cm}^2$



14) area =  $66.048 \text{ cm}^2$



15) area =  $6.1472 \text{ cm}^2$



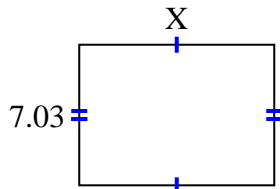
**Answers**

1. \_\_\_\_\_
2. \_\_\_\_\_
3. \_\_\_\_\_
4. \_\_\_\_\_
5. \_\_\_\_\_
6. \_\_\_\_\_
7. \_\_\_\_\_
8. \_\_\_\_\_
9. \_\_\_\_\_
10. \_\_\_\_\_
11. \_\_\_\_\_
12. \_\_\_\_\_
13. \_\_\_\_\_
14. \_\_\_\_\_
15. \_\_\_\_\_

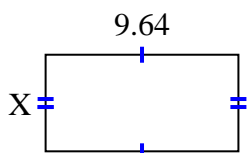


Find the value of X for each figure. Each figure is in centimeters (cm). Not to scale.

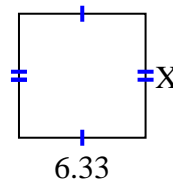
1) area =  $68.5425 \text{ cm}^2$



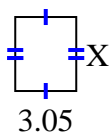
2) area =  $46.5612 \text{ cm}^2$



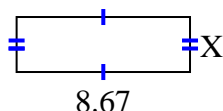
3) area =  $39.246 \text{ cm}^2$



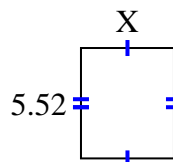
4) area =  $11.285 \text{ cm}^2$



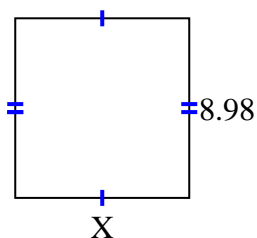
5) area =  $23.8425 \text{ cm}^2$



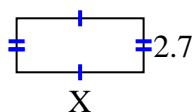
6) area =  $25.668 \text{ cm}^2$



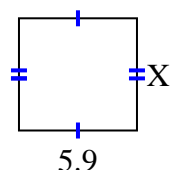
7) area =  $78.126 \text{ cm}^2$



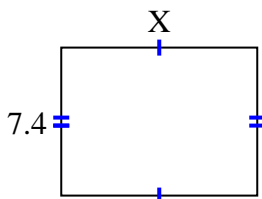
8) area =  $17.145 \text{ cm}^2$



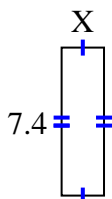
9) area =  $33.099 \text{ cm}^2$



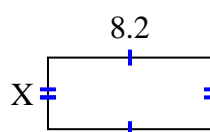
10) area =  $72.52 \text{ cm}^2$



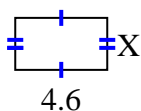
11) area =  $15.688 \text{ cm}^2$



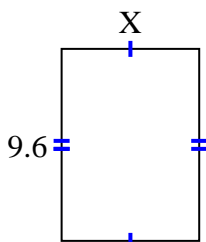
12) area =  $29.356 \text{ cm}^2$



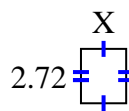
13) area =  $11.96 \text{ cm}^2$



14) area =  $66.048 \text{ cm}^2$



15) area =  $6.1472 \text{ cm}^2$



Answers

1. 9.75

2. 4.83

3. 6.2

4. 3.7

5. 2.75

6. 4.65

7. 8.7

8. 6.35

9. 5.61

10. 9.8

11. 2.12

12. 3.58

13. 2.6

14. 6.88

15. 2.26