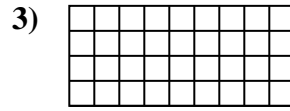
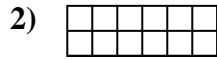
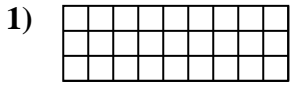




Determine the area. Each **SVGREPLACE** = 1 square unit ( $u^2$ ).

**Answers**


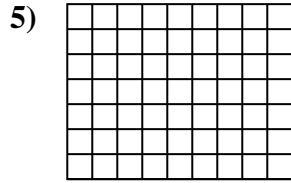
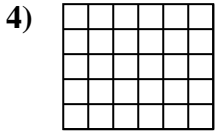


1. \_\_\_\_\_

2. \_\_\_\_\_

3. \_\_\_\_\_

4. \_\_\_\_\_

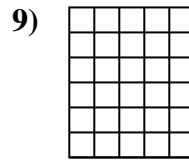
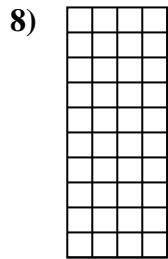
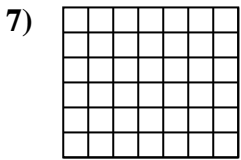


5. \_\_\_\_\_

6. \_\_\_\_\_

7. \_\_\_\_\_

8. \_\_\_\_\_

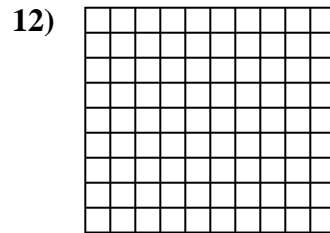
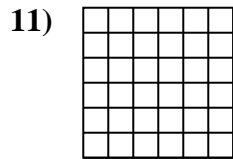
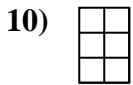


9. \_\_\_\_\_

10. \_\_\_\_\_

11. \_\_\_\_\_

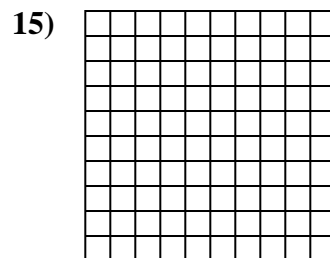
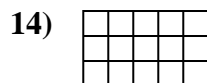
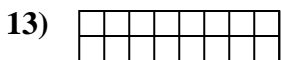
12. \_\_\_\_\_



13. \_\_\_\_\_

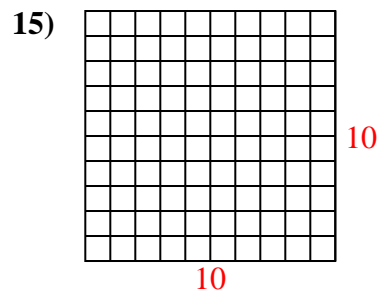
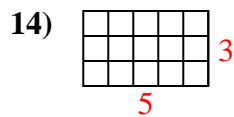
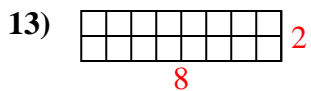
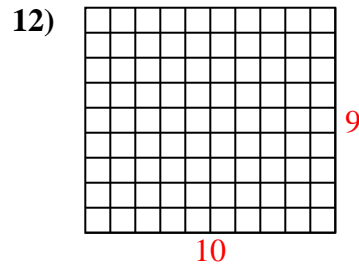
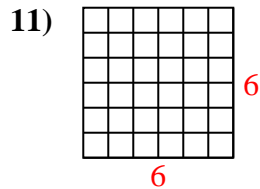
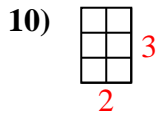
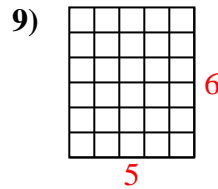
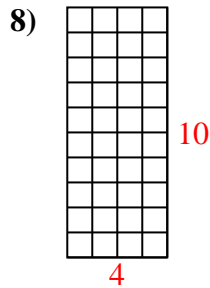
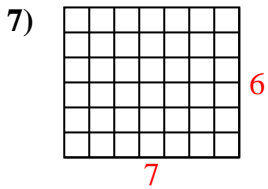
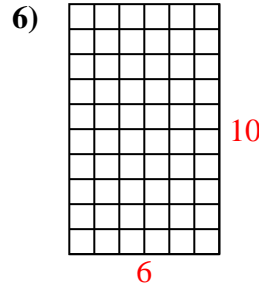
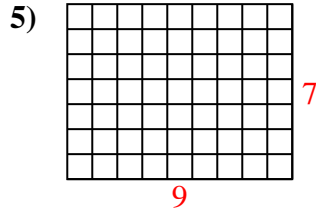
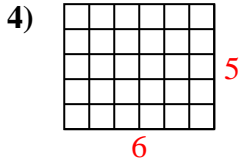
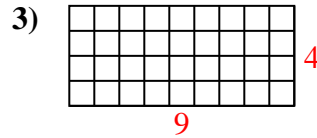
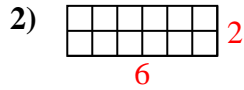
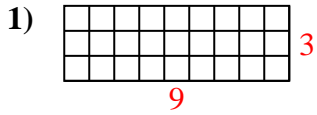
14. \_\_\_\_\_

15. \_\_\_\_\_





Determine the area. Each **SVGREPLACE** = 1 square unit ( $u^2$ ).



Answers

1. 27  $u^2$

2. 12  $u^2$

3. 36  $u^2$

4. 30  $u^2$

5. 63  $u^2$

6. 60  $u^2$

7. 42  $u^2$

8. 40  $u^2$

9. 30  $u^2$

10. 6  $u^2$

11. 36  $u^2$

12. 90  $u^2$

13. 16  $u^2$

14. 15  $u^2$

15. 100  $u^2$