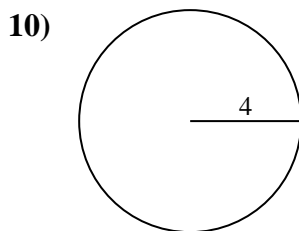
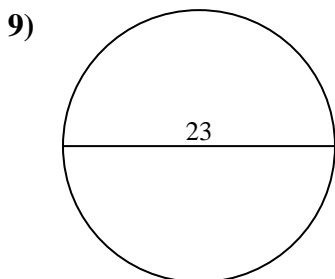
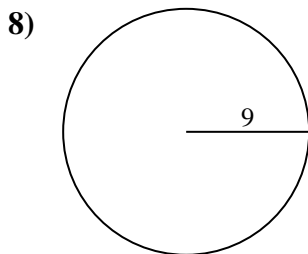
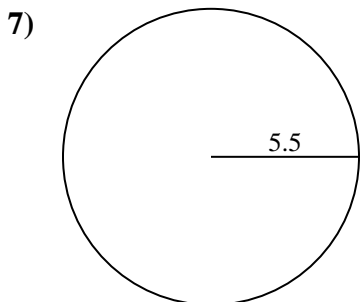
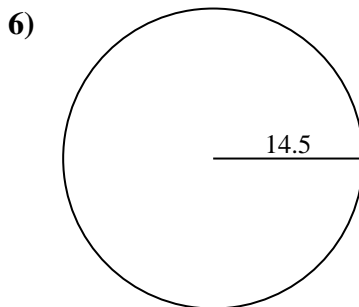
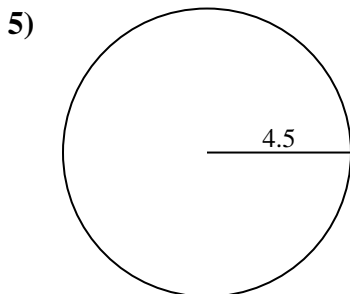
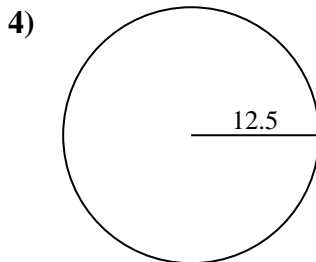
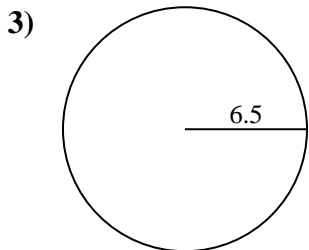
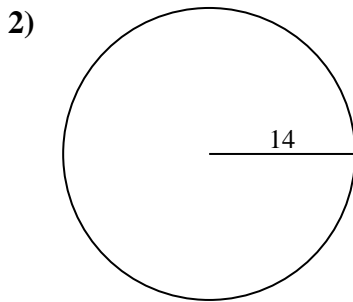
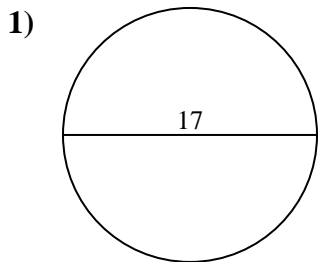




Find the circumference (in cm) of the circle. Circles are not to scale.



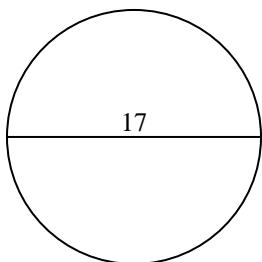
Answers

- 1. _____
- 2. _____
- 3. _____
- 4. _____
- 5. _____
- 6. _____
- 7. _____
- 8. _____
- 9. _____
- 10. _____

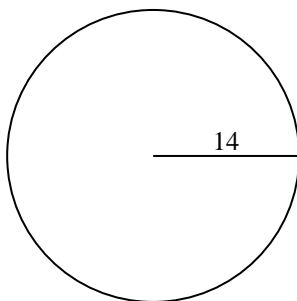


Find the circumference (in cm) of the circle. Circles are not to scale.

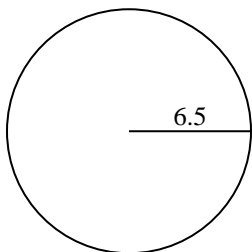
1)



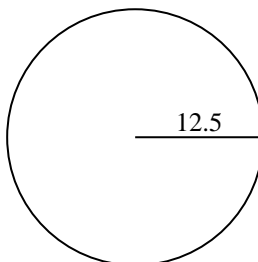
2)



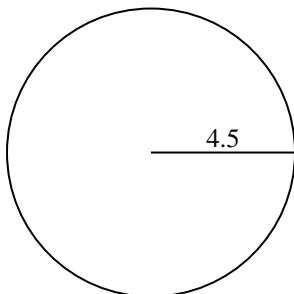
3)



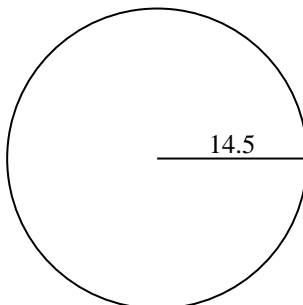
4)



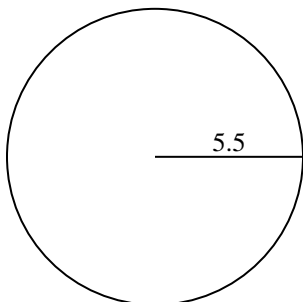
5)



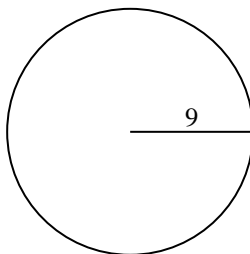
6)



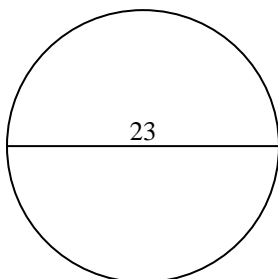
7)



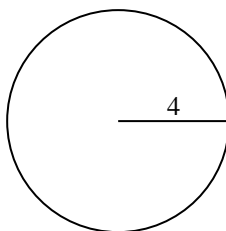
8)



9)



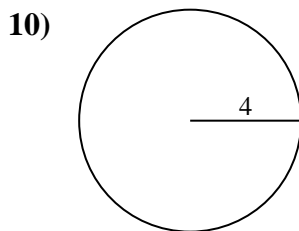
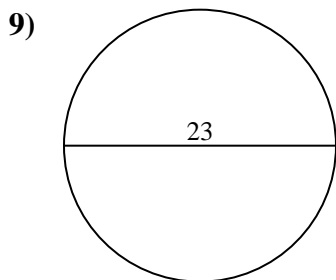
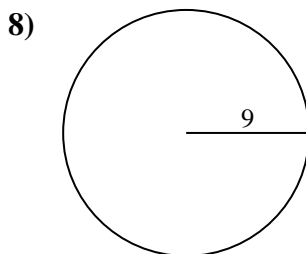
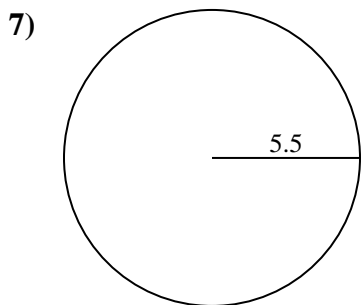
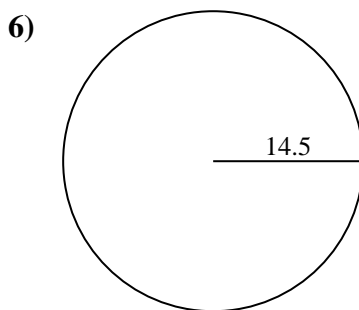
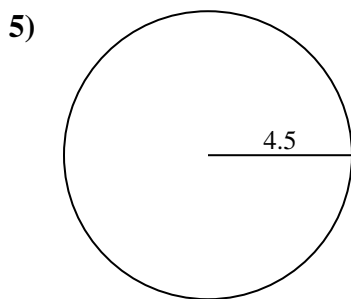
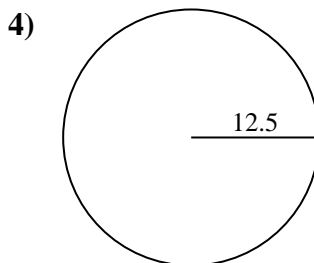
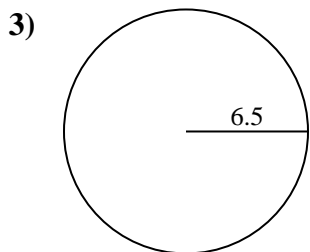
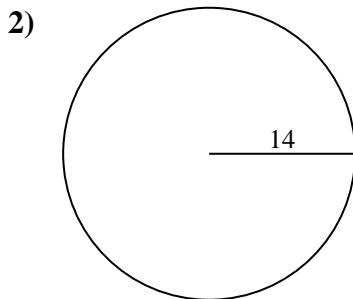
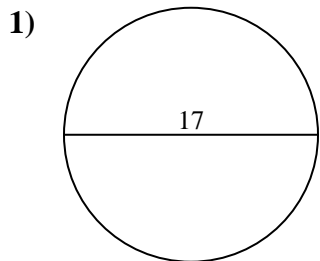
10)

**Answers**1. **53.41 cm**2. **87.96 cm**3. **40.84 cm**4. **78.54 cm**5. **28.27 cm**6. **91.11 cm**7. **34.56 cm**8. **56.55 cm**9. **72.26 cm**10. **25.13 cm**



Find the circumference (in cm) of the circle. Circles are not to scale.

| | | | | |
|----------|----------|----------|----------|----------|
| 72.26 cm | 40.84 cm | 34.56 cm | 53.41 cm | 25.13 cm |
| 28.27 cm | 87.96 cm | 78.54 cm | 91.11 cm | 56.55 cm |



Answers

1. _____
2. _____
3. _____
4. _____
5. _____
6. _____
7. _____
8. _____
9. _____
10. _____