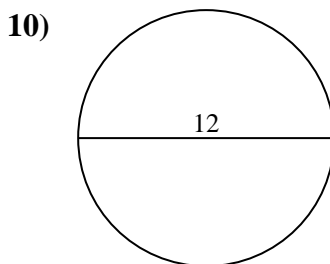
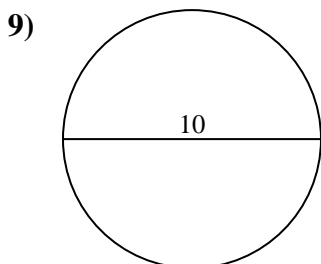
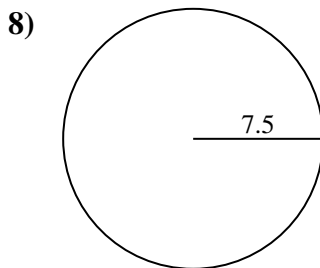
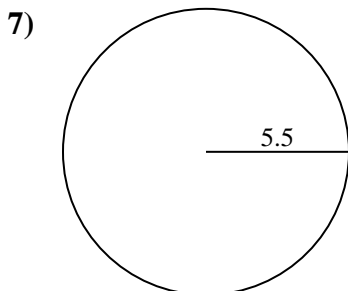
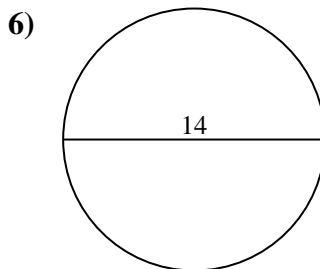
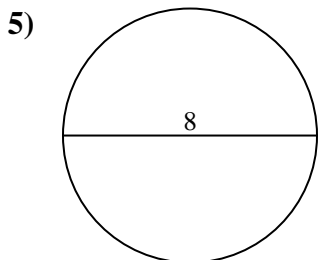
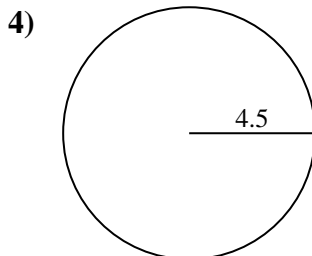
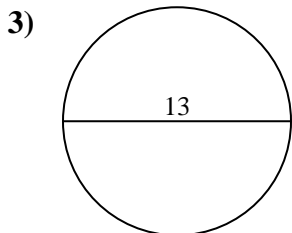
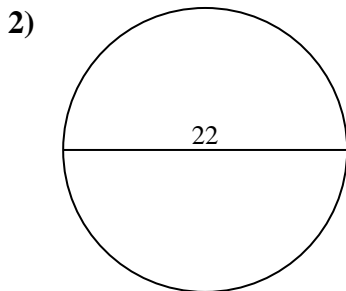
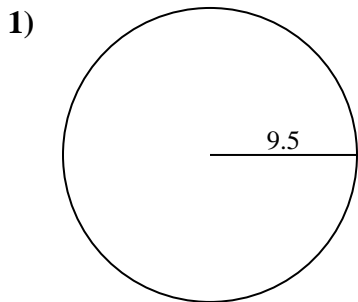




Find the circumference (in cm) of the circle. Circles are not to scale.



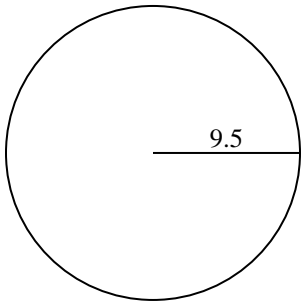
Answers

- 1. _____
- 2. _____
- 3. _____
- 4. _____
- 5. _____
- 6. _____
- 7. _____
- 8. _____
- 9. _____
- 10. _____

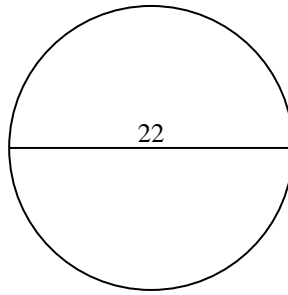


Find the circumference (in cm) of the circle. Circles are not to scale.

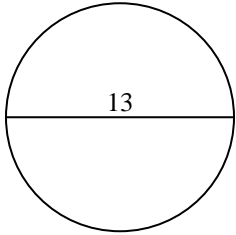
1)



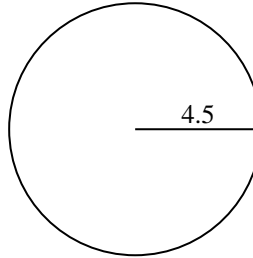
2)



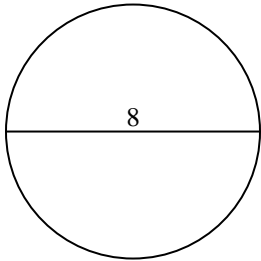
3)



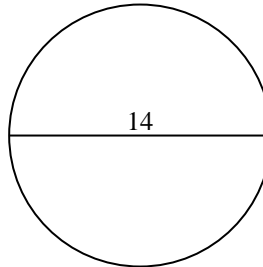
4)



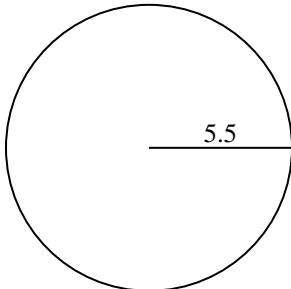
5)



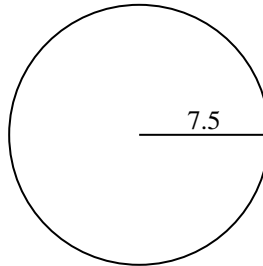
6)



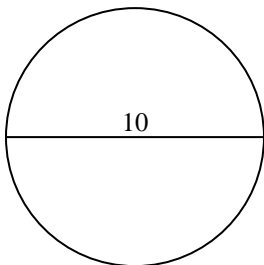
7)



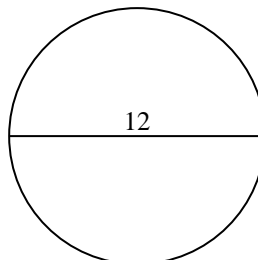
8)



9)



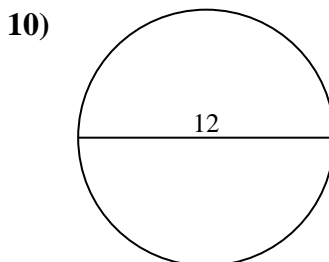
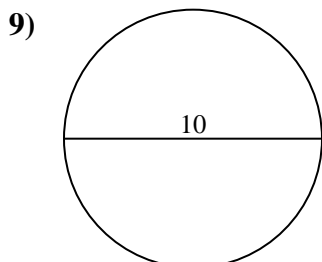
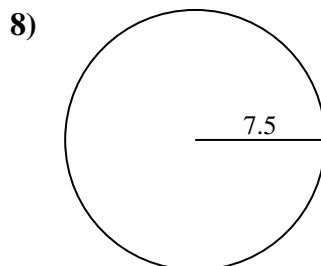
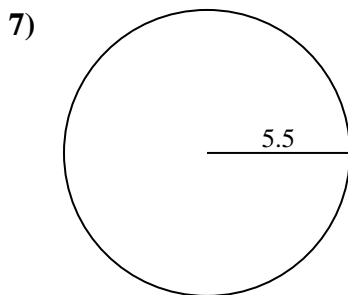
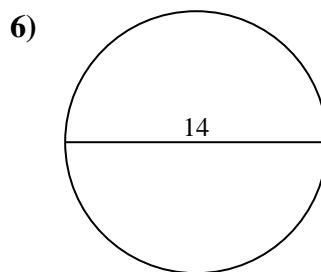
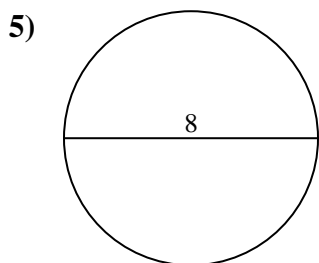
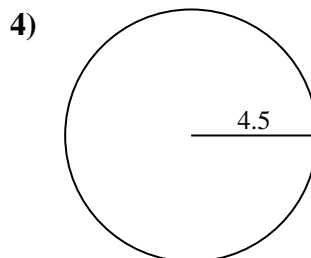
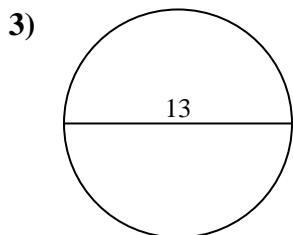
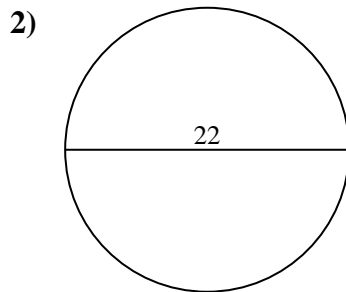
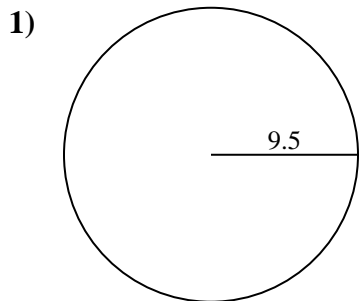
10)

**Answers**1. **59.69 cm**2. **69.12 cm**3. **40.84 cm**4. **28.27 cm**5. **25.13 cm**6. **43.98 cm**7. **34.56 cm**8. **47.12 cm**9. **31.42 cm**10. **37.7 cm**



Find the circumference (in cm) of the circle. Circles are not to scale.

- | | | | | |
|----------|----------|----------|----------|----------|
| 59.69 cm | 25.13 cm | 31.42 cm | 40.84 cm | 34.56 cm |
| 28.27 cm | 37.7 cm | 69.12 cm | 47.12 cm | 43.98 cm |



Answers

1. _____
2. _____
3. _____
4. _____
5. _____
6. _____
7. _____
8. _____
9. _____
10. _____