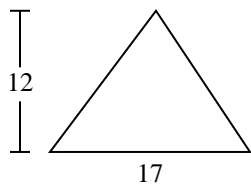


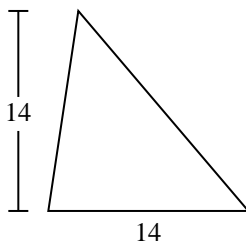


Find the area of the triangle. Round your answer to the nearest 10th.

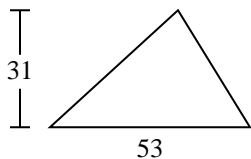
1)



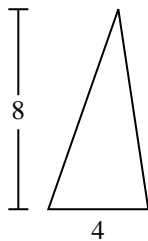
2)



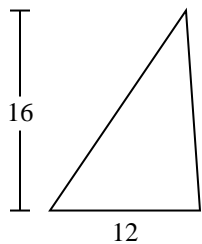
3)



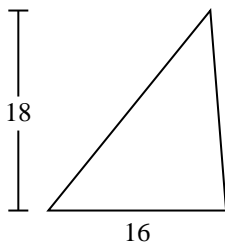
4)



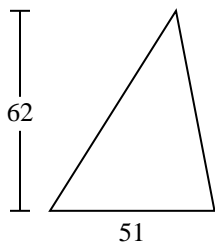
5)



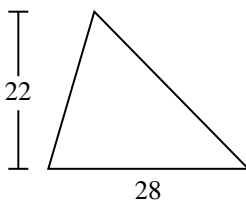
6)



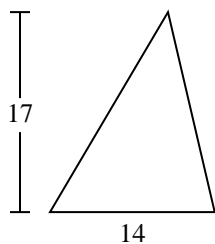
7)



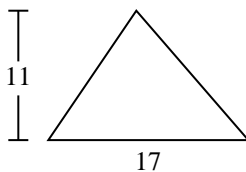
8)



9)



10)



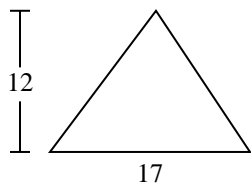
Answers

- 1. _____
- 2. _____
- 3. _____
- 4. _____
- 5. _____
- 6. _____
- 7. _____
- 8. _____
- 9. _____
- 10. _____

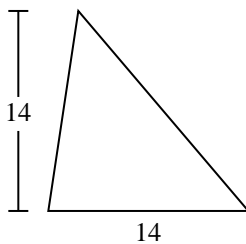


Find the area of the triangle. Round your answer to the nearest 10th.

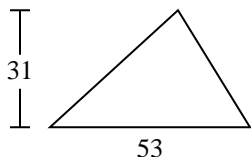
1)



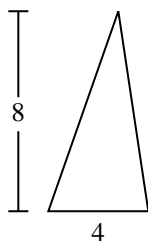
2)



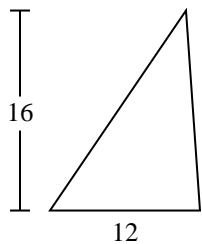
3)



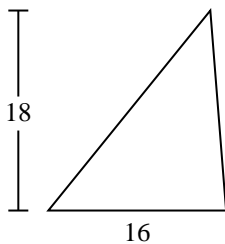
4)



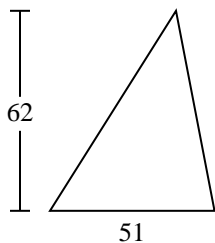
5)



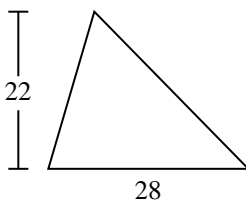
6)



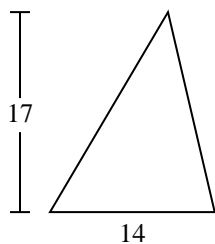
7)



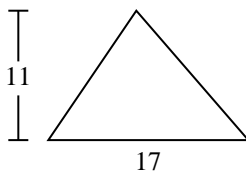
8)



9)



10)



Answers

1. 102

2. 98

3. 821.5

4. 16

5. 96

6. 144

7. 1,581

8. 308

9. 119

10. 93.5

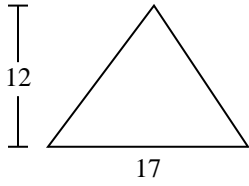


Find the area of the triangle. Round your answer to the nearest 10th.

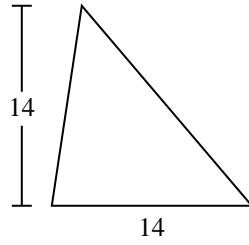
102	1,581	308	144	16
119	821.5	98	96	

Answers

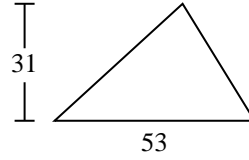
1)



2)



3)



1. _____

2. _____

3. _____

4. _____

5. _____

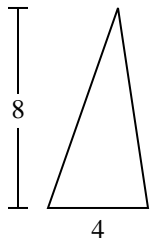
6. _____

7. _____

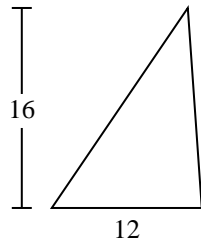
8. _____

9. _____

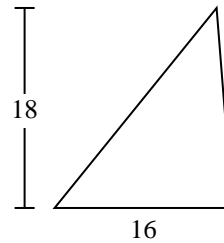
4)



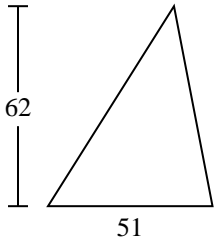
5)



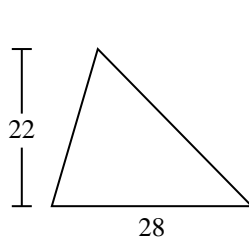
6)



7)



8)



9)

