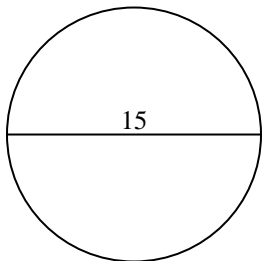


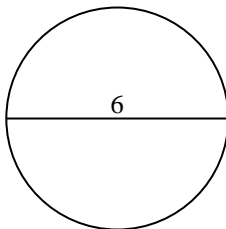


Find the area and circumference of the circle. Circles are not to scale. Round to the nearest 10th.

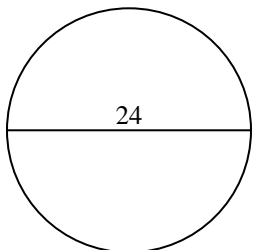
1)



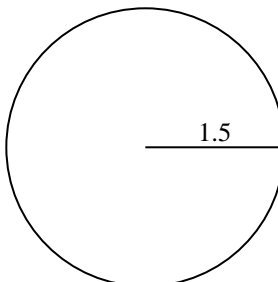
2)



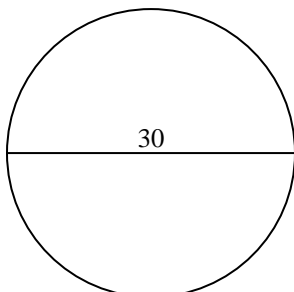
3)



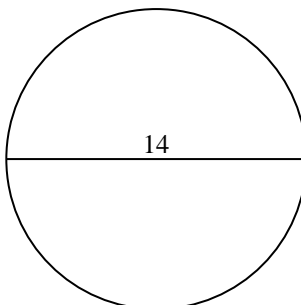
4)



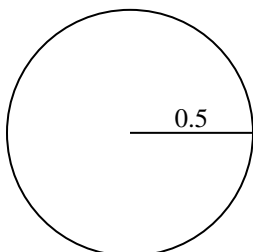
5)



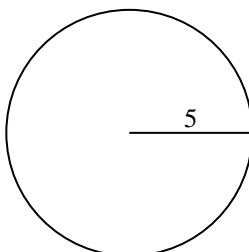
6)



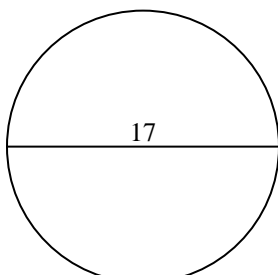
7)



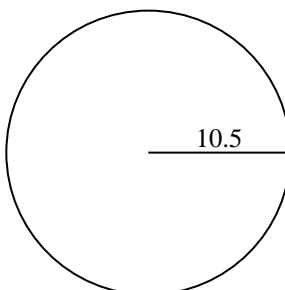
8)



9)



10)



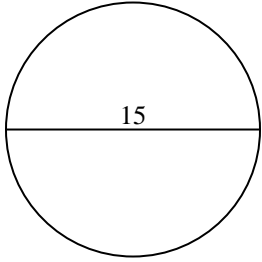
Answers

- 1. _____
- 2. _____
- 3. _____
- 4. _____
- 5. _____
- 6. _____
- 7. _____
- 8. _____
- 9. _____
- 10. _____

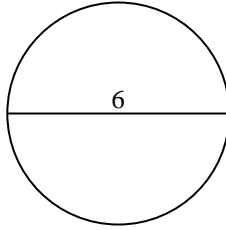


Find the area and circumference of the circle. Circles are not to scale. Round to the nearest 10th.

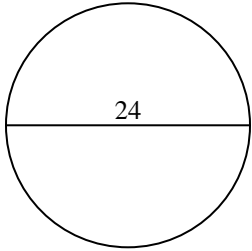
1)



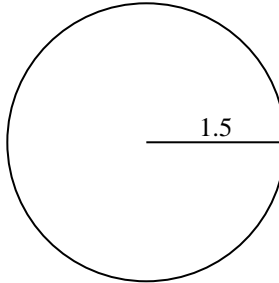
2)



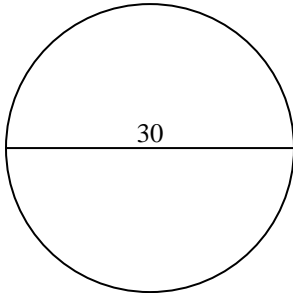
3)



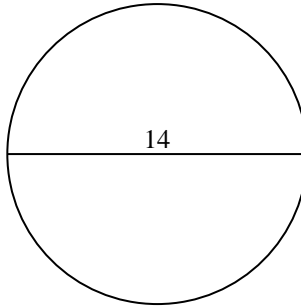
4)



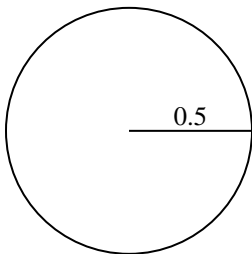
5)



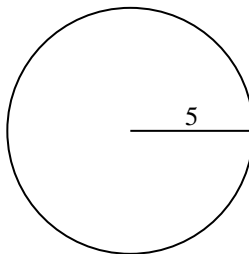
6)



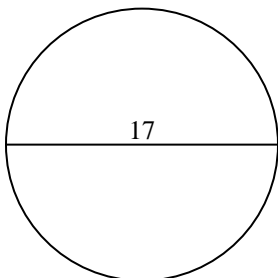
7)



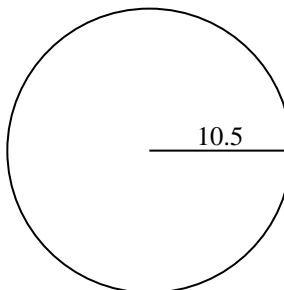
8)



9)



10)



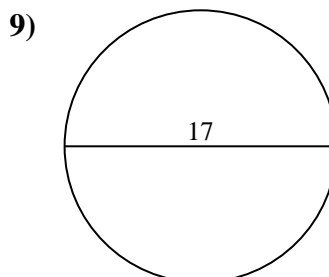
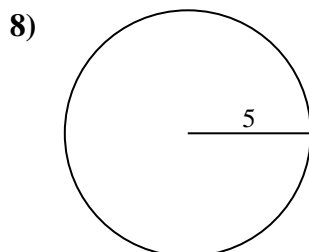
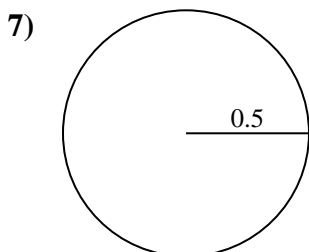
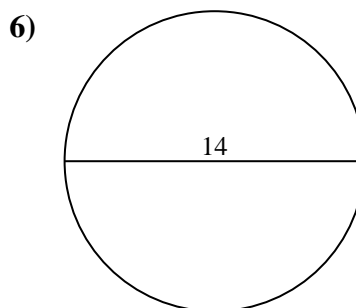
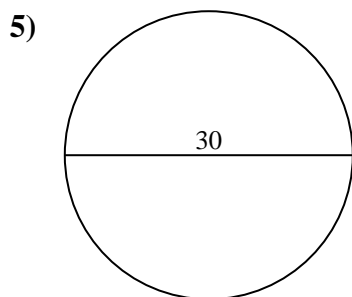
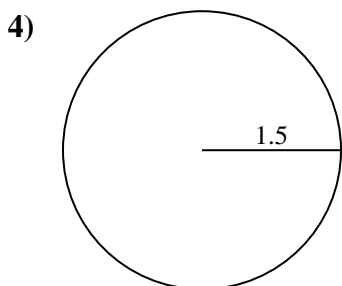
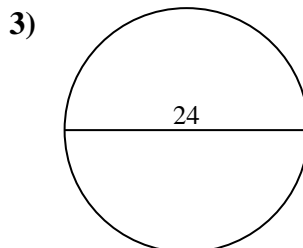
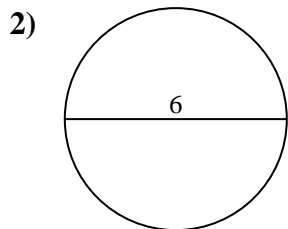
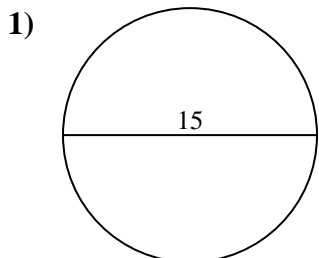
Answers

| | | |
|-----|--------------|-------------|
| 1. | <u>176.7</u> | <u>47.1</u> |
| 2. | <u>28.3</u> | <u>18.8</u> |
| 3. | <u>452.4</u> | <u>75.4</u> |
| 4. | <u>7.1</u> | <u>9.4</u> |
| 5. | <u>706.9</u> | <u>94.2</u> |
| 6. | <u>153.9</u> | <u>44</u> |
| 7. | <u>0.8</u> | <u>3.1</u> |
| 8. | <u>78.5</u> | <u>31.4</u> |
| 9. | <u>227</u> | <u>53.4</u> |
| 10. | <u>346.4</u> | <u>66</u> |



Find the area and circumference of the circle. Circles are not to scale. Round to the nearest 10th.

| | | | | |
|-------|------|-------|-------|------|
| 78.5 | 75.4 | 7.1 | 18.8 | 53.4 |
| 31.4 | 28.3 | 153.9 | 3.1 | 9.4 |
| 176.7 | 0.8 | 452.4 | 706.9 | 47.1 |
| 227 | 44 | 94.2 | | |



Answers

1. _____
2. _____
3. _____
4. _____
5. _____
6. _____
7. _____
8. _____
9. _____