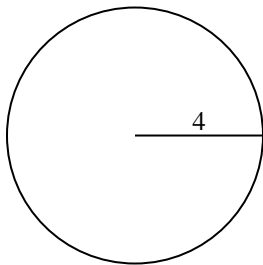


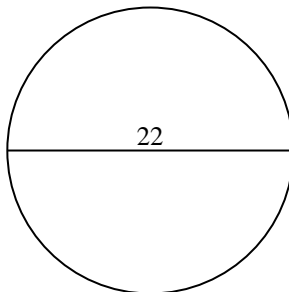


Find the area and circumference of the circle. Circles are not to scale. Round to the nearest 10th.

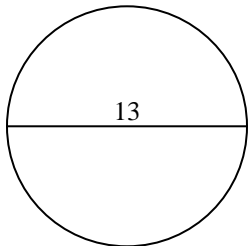
1)



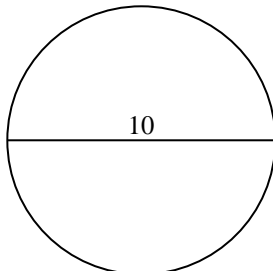
2)



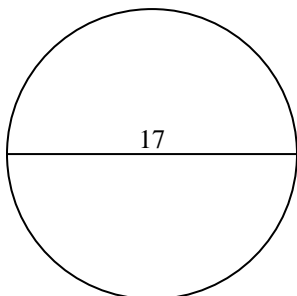
3)



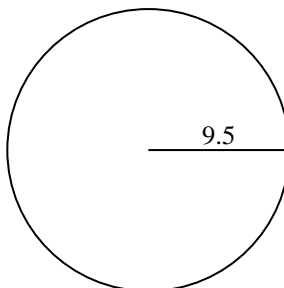
4)



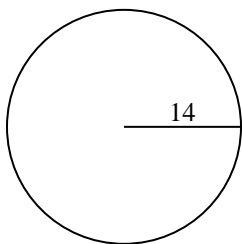
5)



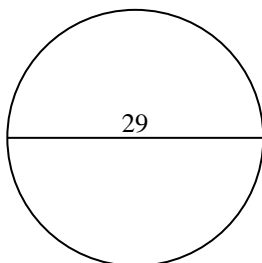
6)



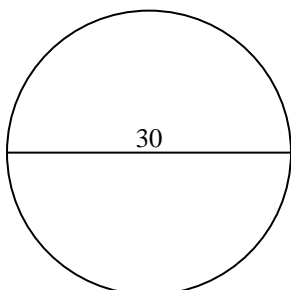
7)



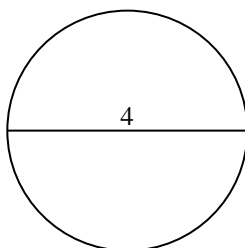
8)



9)



10)

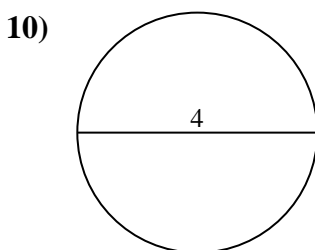
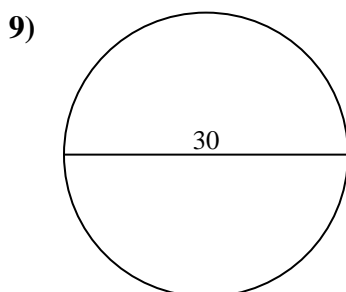
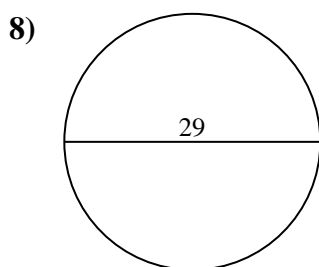
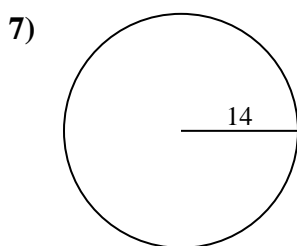
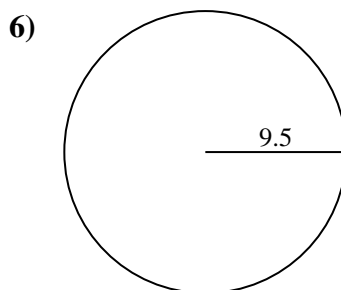
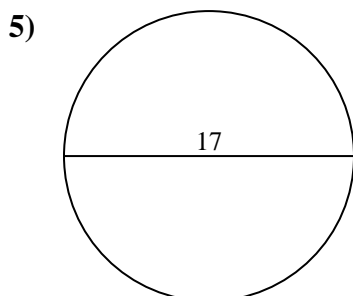
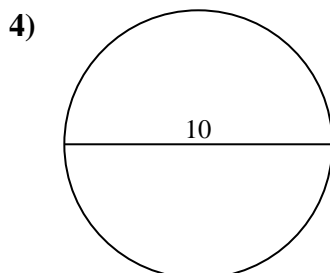
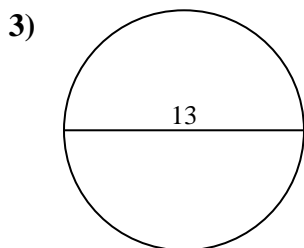
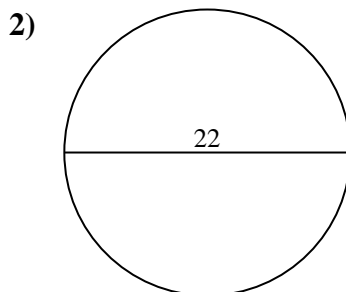
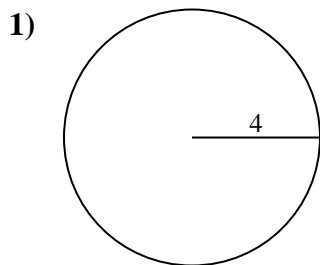


Answers

- 1. _____
- 2. _____
- 3. _____
- 4. _____
- 5. _____
- 6. _____
- 7. _____
- 8. _____
- 9. _____
- 10. _____



Find the area and circumference of the circle. Circles are not to scale. Round to the nearest 10th.



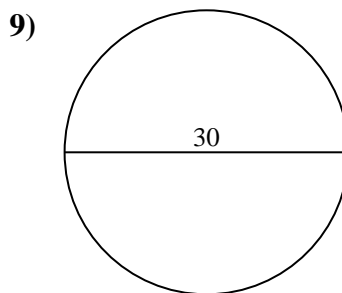
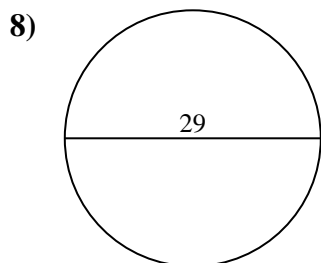
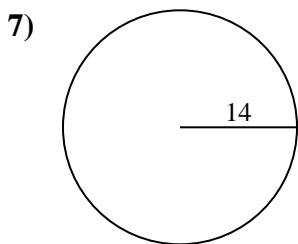
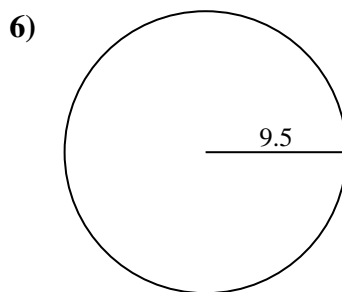
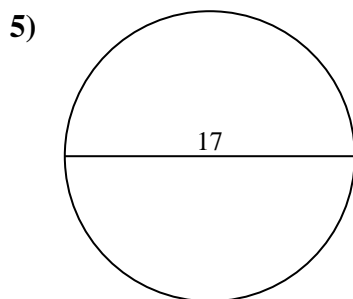
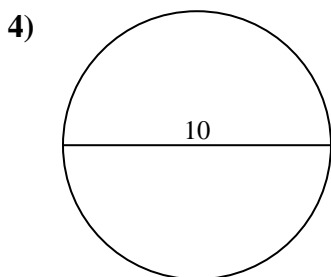
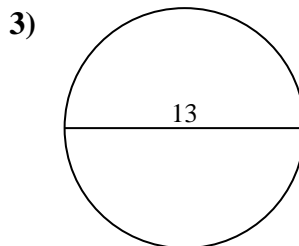
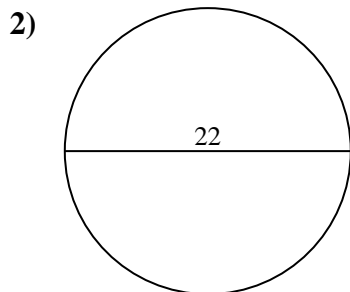
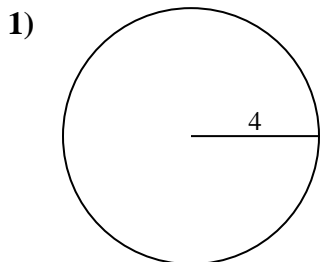
Answers

| | | |
|-----|--------------|-------------|
| 1. | <u>50.3</u> | <u>25.1</u> |
| 2. | <u>380.1</u> | <u>69.1</u> |
| 3. | <u>132.7</u> | <u>40.8</u> |
| 4. | <u>78.5</u> | <u>31.4</u> |
| 5. | <u>227</u> | <u>53.4</u> |
| 6. | <u>283.5</u> | <u>59.7</u> |
| 7. | <u>615.8</u> | <u>88</u> |
| 8. | <u>660.5</u> | <u>91.1</u> |
| 9. | <u>706.9</u> | <u>94.2</u> |
| 10. | <u>12.6</u> | <u>12.6</u> |



Find the area and circumference of the circle. Circles are not to scale. Round to the nearest 10th.

| | | | | |
|-------|------|-------|-------|-------|
| 25.1 | 227 | 78.5 | 615.8 | 91.1 |
| 380.1 | 31.4 | 132.7 | 706.9 | 59.7 |
| 50.3 | 69.1 | 88 | 53.4 | 660.5 |
| 283.5 | 40.8 | 94.2 | | |



Answers

1. _____
2. _____
3. _____
4. _____
5. _____
6. _____
7. _____
8. _____
9. _____