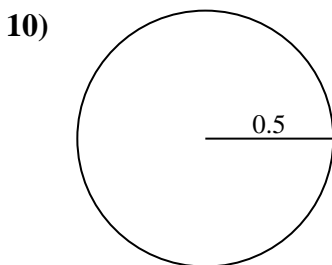
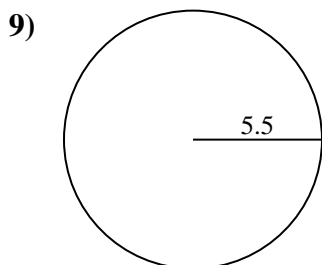
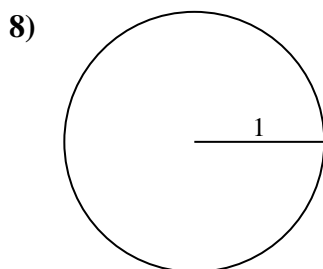
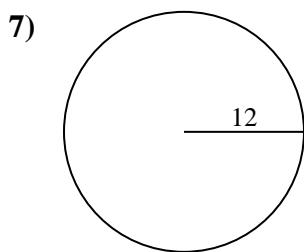
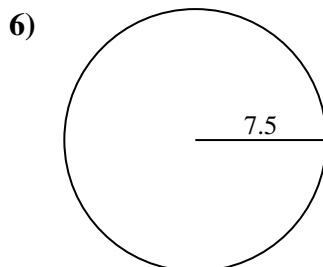
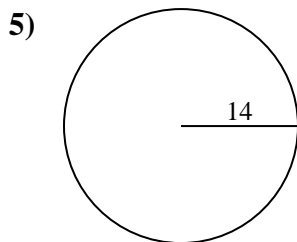
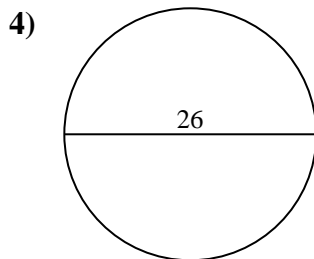
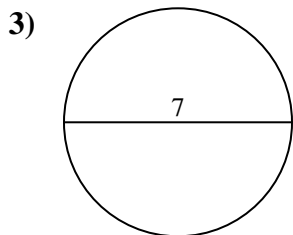
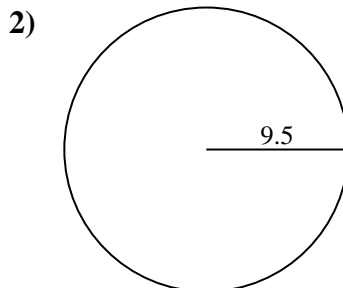
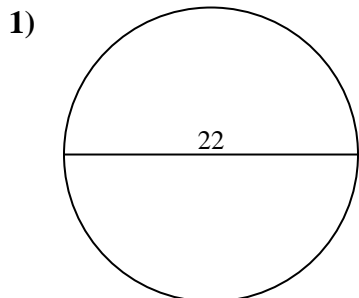




Find the area and circumference of the circle. Circles are not to scale. Round to the nearest 10th.



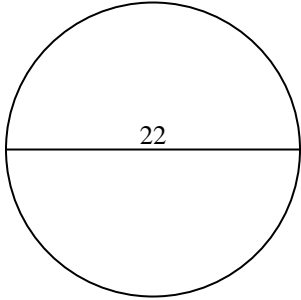
Answers

- 1. _____
- 2. _____
- 3. _____
- 4. _____
- 5. _____
- 6. _____
- 7. _____
- 8. _____
- 9. _____
- 10. _____

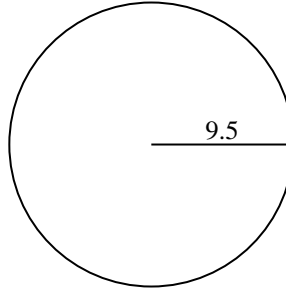


Find the area and circumference of the circle. Circles are not to scale. Round to the nearest 10th.

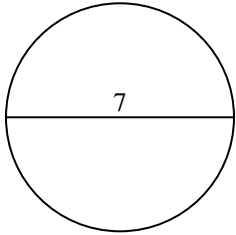
1)



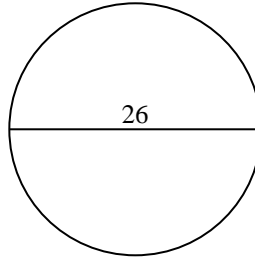
2)



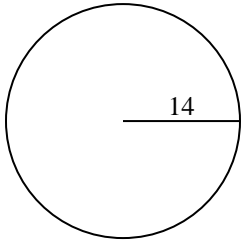
3)



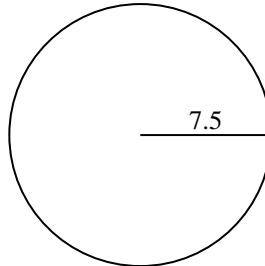
4)



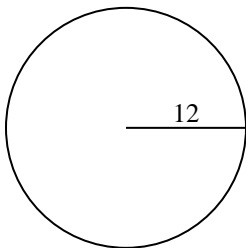
5)



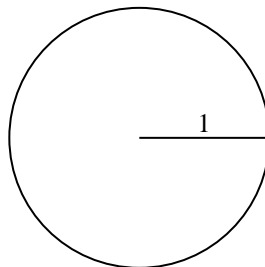
6)



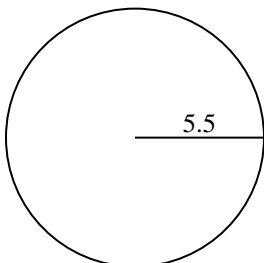
7)



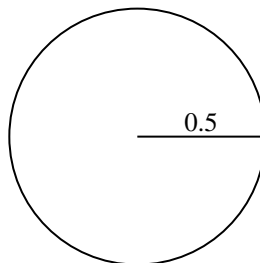
8)



9)



10)



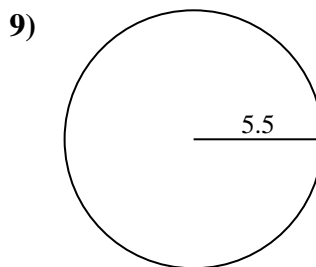
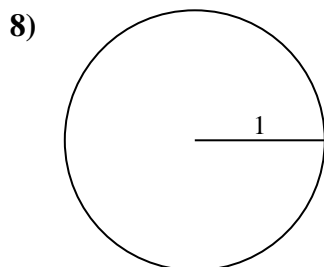
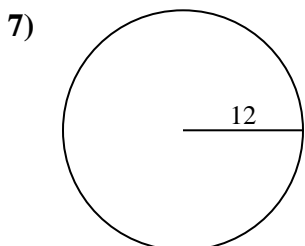
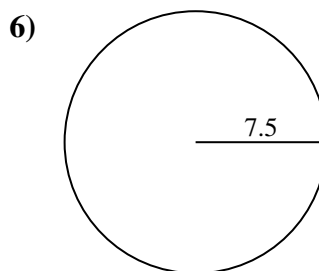
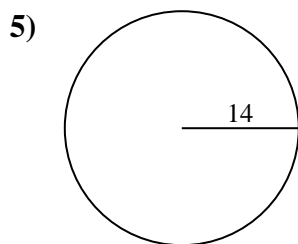
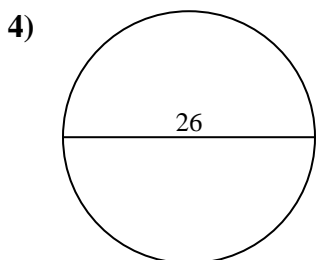
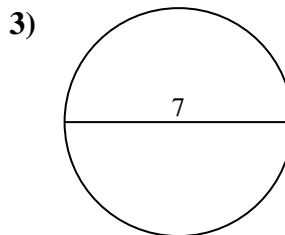
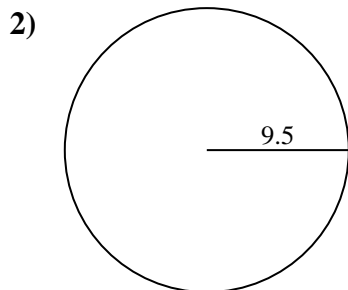
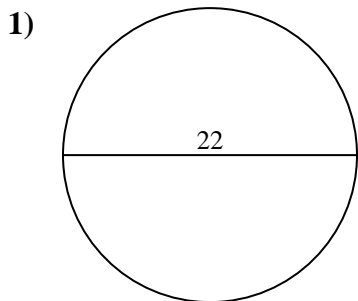
Answers

| | | |
|-----|--------------|-------------|
| 1. | <u>380.1</u> | <u>69.1</u> |
| 2. | <u>283.5</u> | <u>59.7</u> |
| 3. | <u>38.5</u> | <u>22</u> |
| 4. | <u>530.9</u> | <u>81.7</u> |
| 5. | <u>615.8</u> | <u>88</u> |
| 6. | <u>176.7</u> | <u>47.1</u> |
| 7. | <u>452.4</u> | <u>75.4</u> |
| 8. | <u>3.1</u> | <u>6.3</u> |
| 9. | <u>95</u> | <u>34.6</u> |
| 10. | <u>0.8</u> | <u>3.1</u> |



Find the area and circumference of the circle. Circles are not to scale. Round to the nearest 10th.

| | | | | |
|------|------|-------|-------|-------|
| 95 | 34.6 | 283.5 | 380.1 | 530.9 |
| 75.4 | 59.7 | 615.8 | 452.4 | 6.3 |
| 81.7 | 3.1 | 47.1 | 22 | 176.7 |
| 69.1 | 38.5 | 88 | | |



Answers

1. _____
2. _____
3. _____
4. _____
5. _____
6. _____
7. _____
8. _____
9. _____