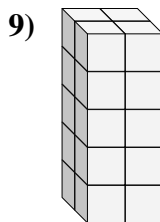
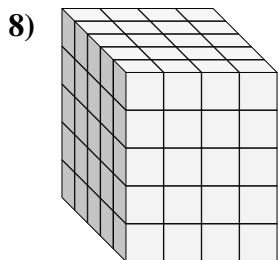
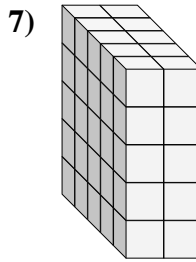
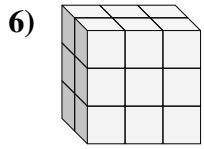
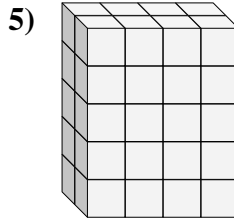
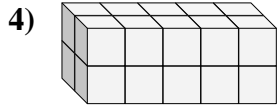
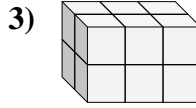
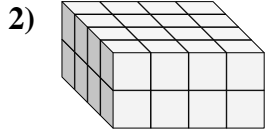
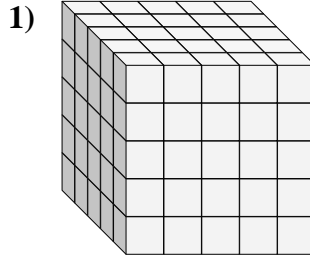
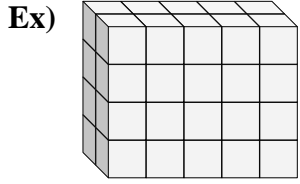




Find the length, width and height of the rectangular prism. Then find the volume.



Answers

Ex. 2 5 4 40

1. _____

2. _____

3. _____

4. _____

5. _____

6. _____

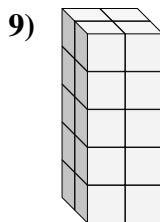
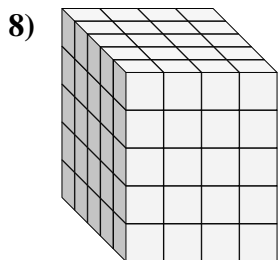
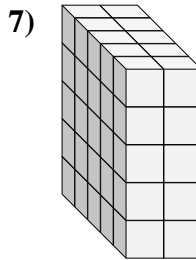
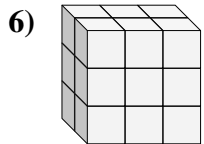
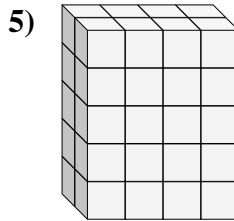
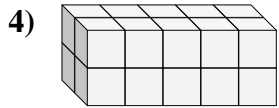
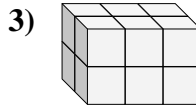
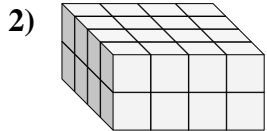
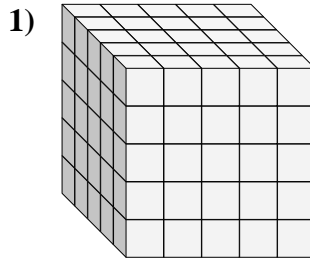
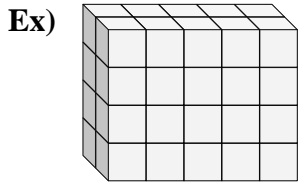
7. _____

8. _____

9. _____



Find the length, width and height of the rectangular prism. Then find the volume.



Answers

Ex. 2 5 4 40

1. 5 5 5 125

2. 4 4 2 32

3. 2 3 2 12

4. 2 5 2 20

5. 2 4 5 40

6. 2 3 3 18

7. 5 2 5 50

8. 5 4 5 100

9. 2 2 5 20