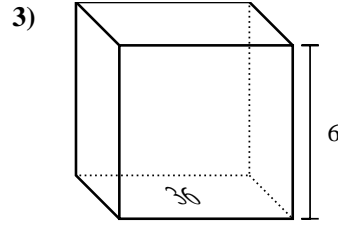
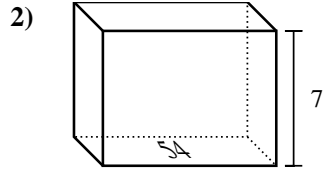
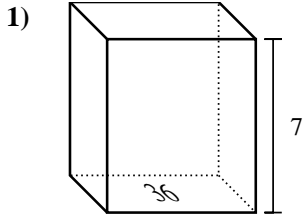




Find the volume of each rectangular prism. Units are in cm (not to scale). Remember $V = BH$ and $V = L \times W \times H$

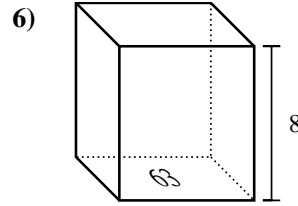
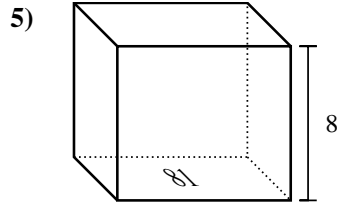
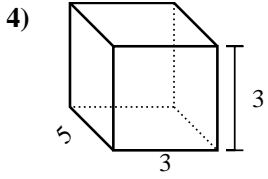
Answers



1. _____

2. _____

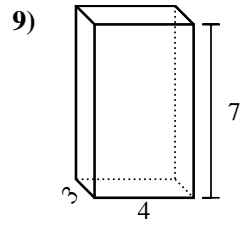
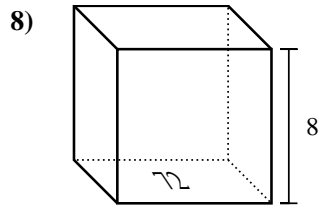
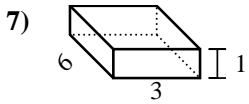
3. _____



4. _____

5. _____

6. _____



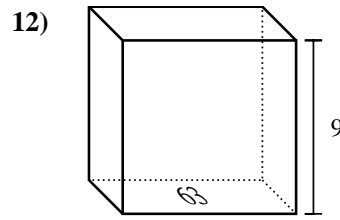
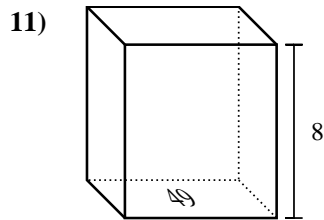
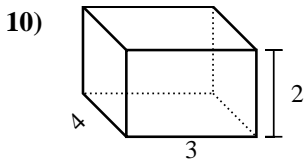
7. _____

8. _____

9. _____

10. _____

11. _____

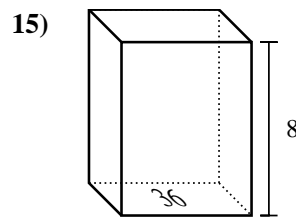
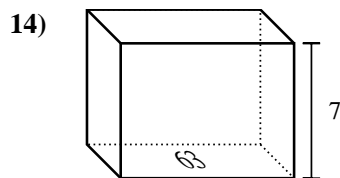
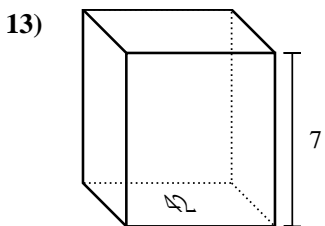


12. _____

13. _____

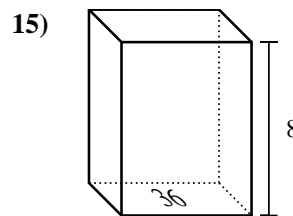
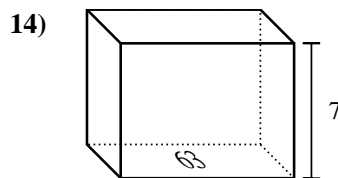
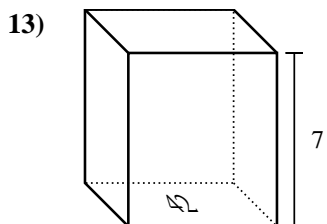
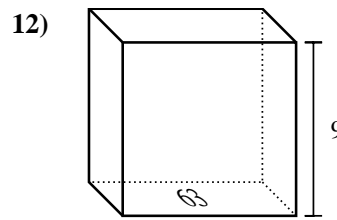
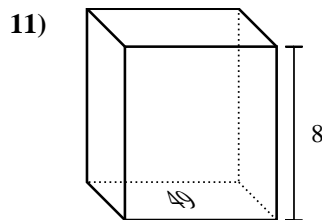
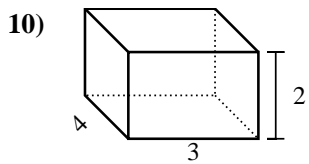
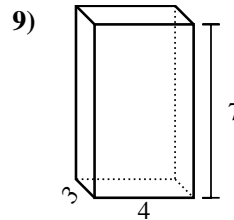
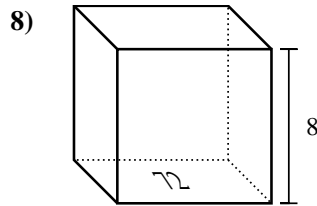
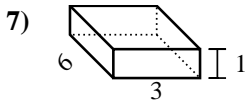
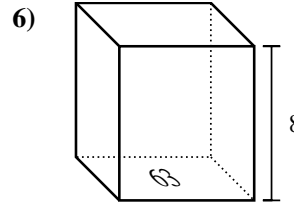
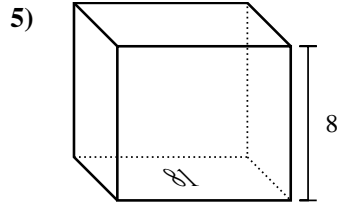
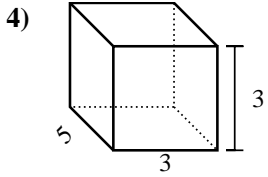
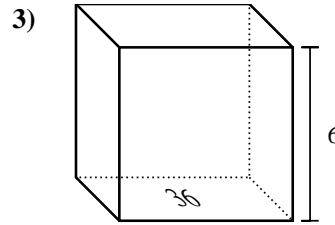
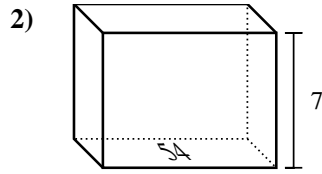
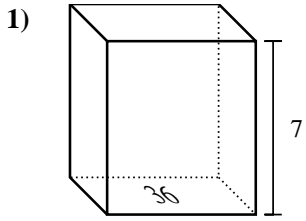
14. _____

15. _____





Find the volume of each rectangular prism. Units are in cm (not to scale). Remember $V = BH$ and $V = L \times W \times H$



Answers

1. 252 cm³
2. 378 cm³
3. 216 cm³
4. 45 cm³
5. 648 cm³
6. 504 cm³
7. 18 cm³
8. 576 cm³
9. 84 cm³
10. 24 cm³
11. 392 cm³
12. 567 cm³
13. 294 cm³
14. 441 cm³
15. 288 cm³