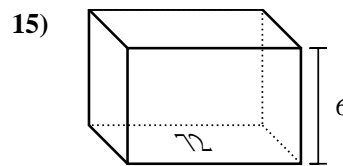
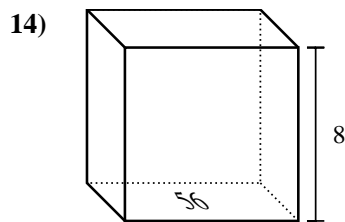
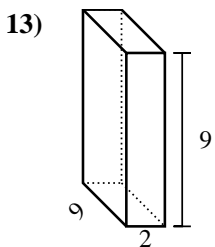
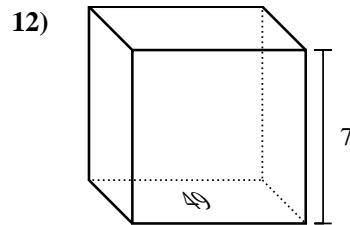
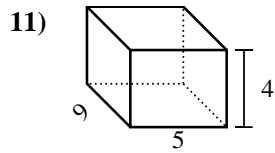
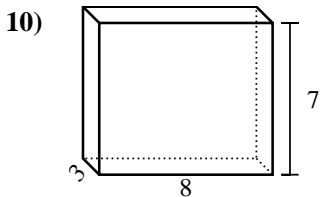
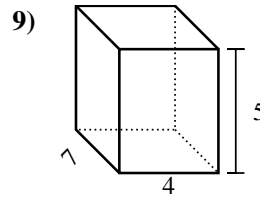
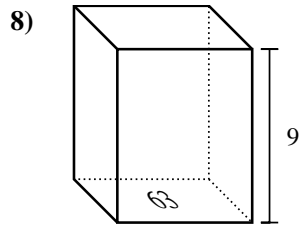
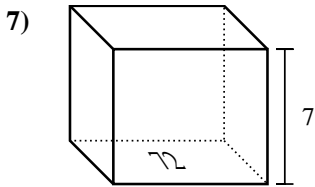
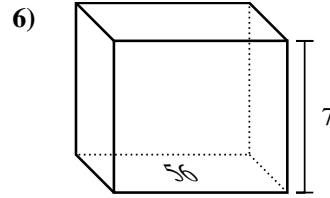
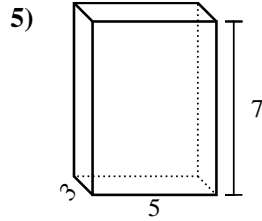
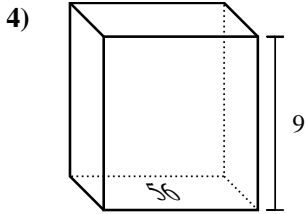
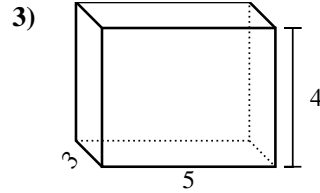
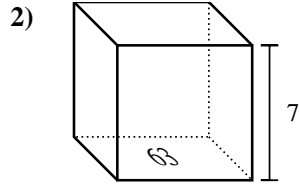
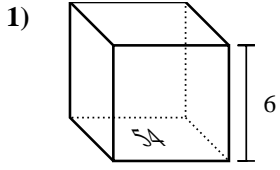




Find the volume of each rectangular prism. Units are in cm (not to scale). Remember $V = BH$ and $V = L \times W \times H$

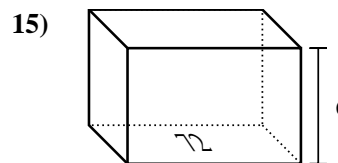
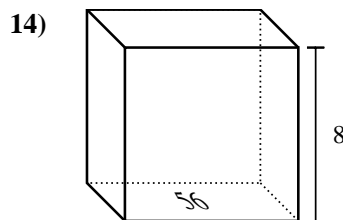
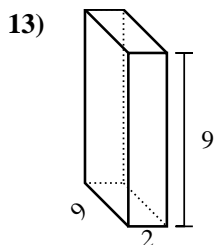
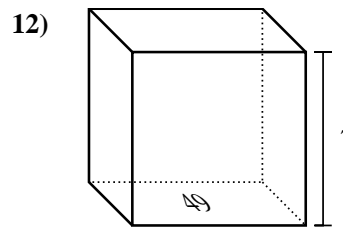
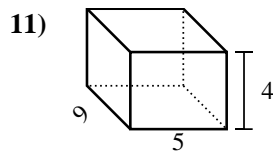
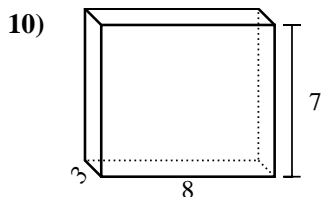
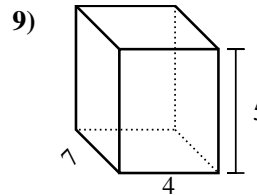
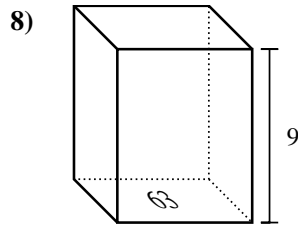
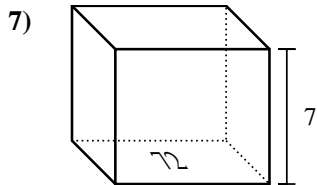
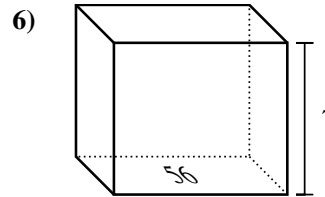
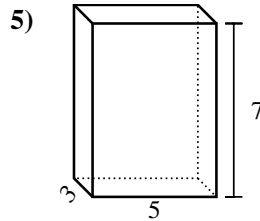
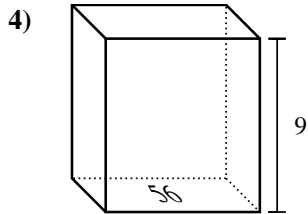
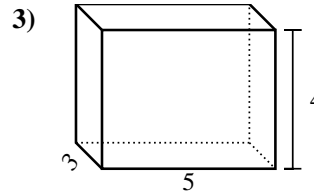
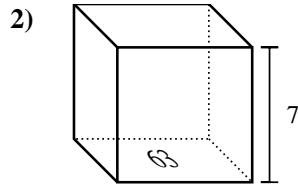
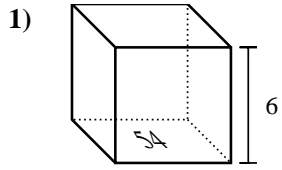
Answers



1. _____
2. _____
3. _____
4. _____
5. _____
6. _____
7. _____
8. _____
9. _____
10. _____
11. _____
12. _____
13. _____
14. _____
15. _____



Find the volume of each rectangular prism. Units are in cm (not to scale). Remember $V = BH$ and $V = L \times W \times H$



Answers

1. 324 cm³
2. 441 cm³
3. 60 cm³
4. 504 cm³
5. 105 cm³
6. 392 cm³
7. 504 cm³
8. 567 cm³
9. 140 cm³
10. 168 cm³
11. 180 cm³
12. 343 cm³
13. 162 cm³
14. 448 cm³
15. 432 cm³