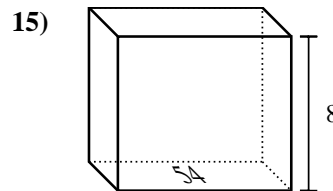
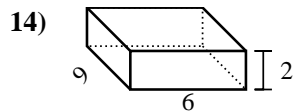
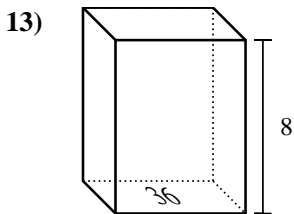
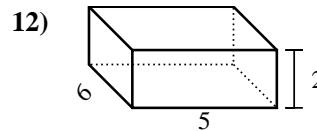
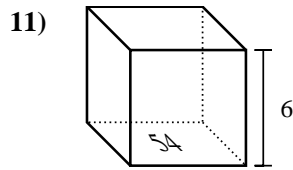
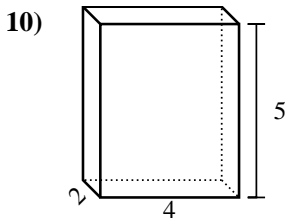
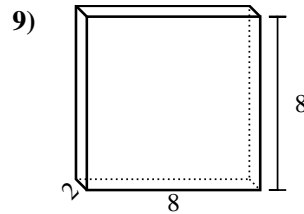
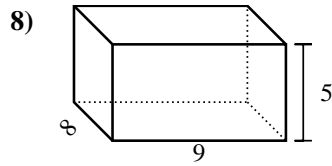
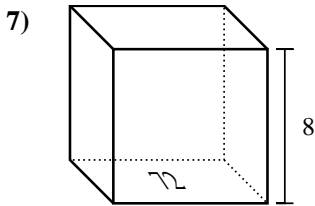
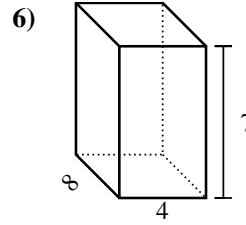
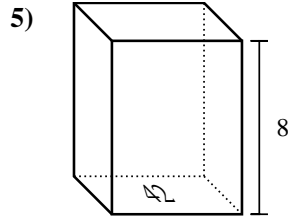
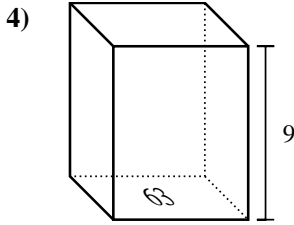
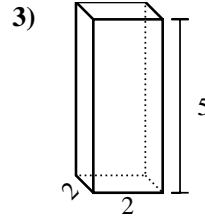
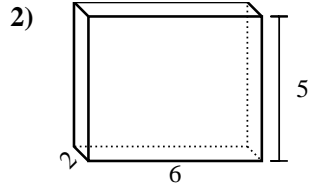
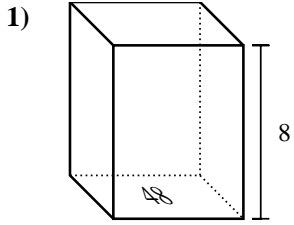




Find the volume of each rectangular prism. Units are in cm (not to scale). Remember $V = BH$ and $V = L \times W \times H$

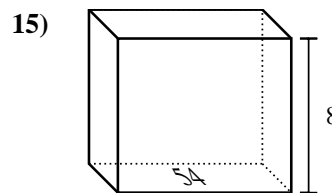
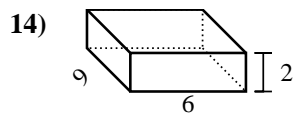
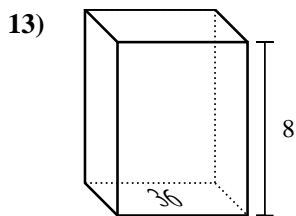
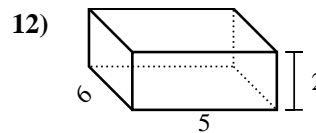
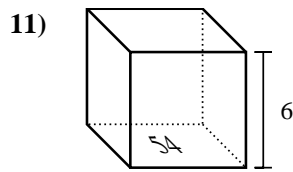
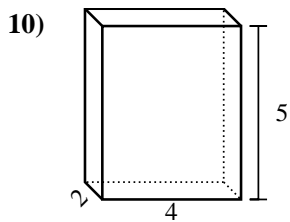
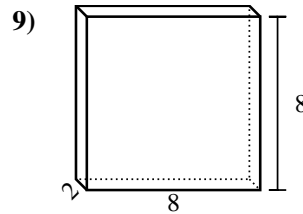
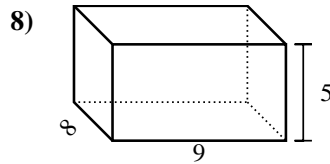
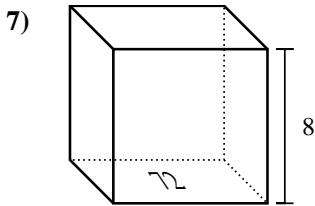
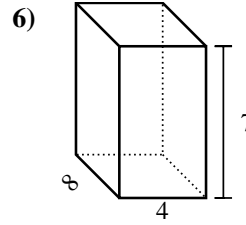
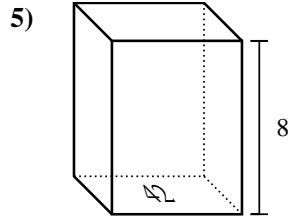
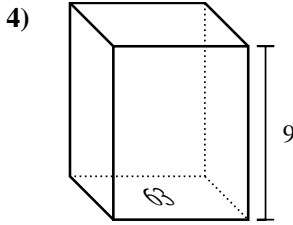
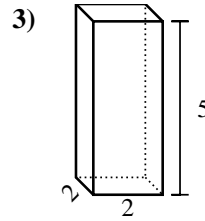
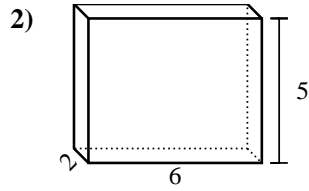
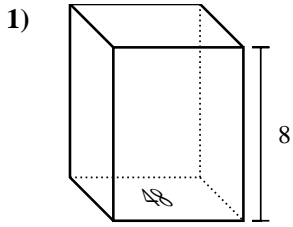
Answers



1. _____
2. _____
3. _____
4. _____
5. _____
6. _____
7. _____
8. _____
9. _____
10. _____
11. _____
12. _____
13. _____
14. _____
15. _____



Find the volume of each rectangular prism. Units are in cm (not to scale). Remember $V = BH$ and $V = L \times W \times H$



Answers

1. 384 cm³

2. 60 cm³

3. 20 cm³

4. 567 cm³

5. 336 cm³

6. 224 cm³

7. 576 cm³

8. 360 cm³

9. 128 cm³

10. 40 cm³

11. 324 cm³

12. 60 cm³

13. 288 cm³

14. 108 cm³

15. 432 cm³