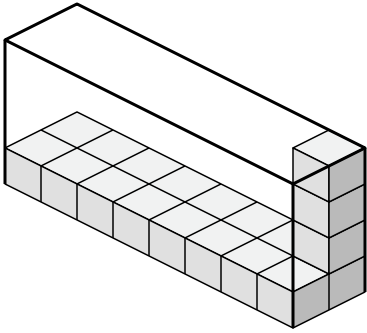




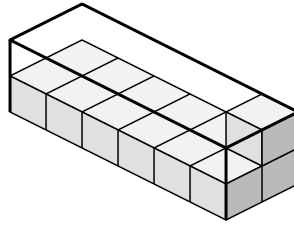
Create an expression to determine the volume of each box.

Answers

1)



2)



1. _____

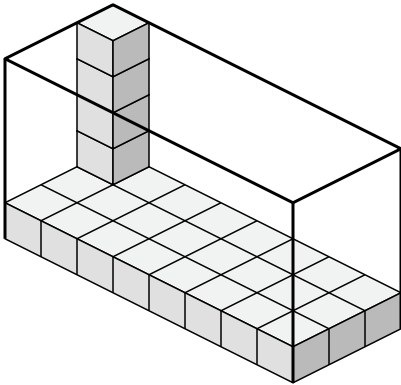
2. _____

3. _____

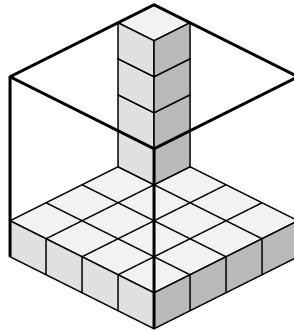
4. _____

5. _____

3)



4)

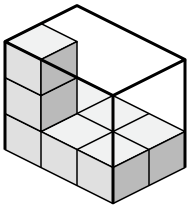


6. _____

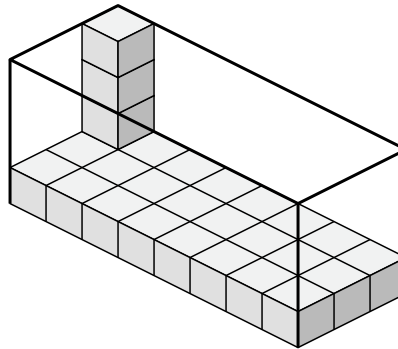
7. _____

8. _____

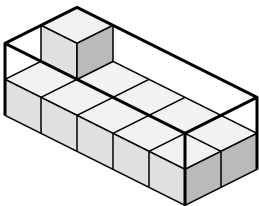
5)



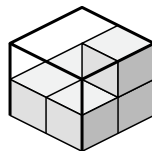
6)



7)



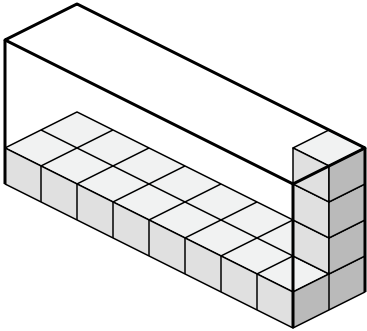
8)



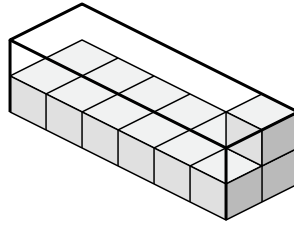


Create an expression to determine the volume of each box.

1)



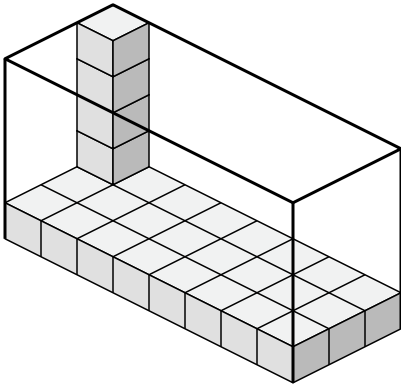
2)



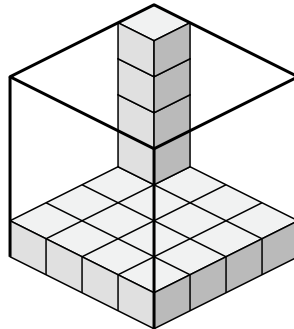
1. $8 \times 2 \times 4$

2. $6 \times 2 \times 2$

3)



4)



3. $8 \times 3 \times 5$

4. $4 \times 4 \times 5$

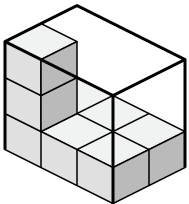
5. $3 \times 2 \times 3$

6. $8 \times 3 \times 4$

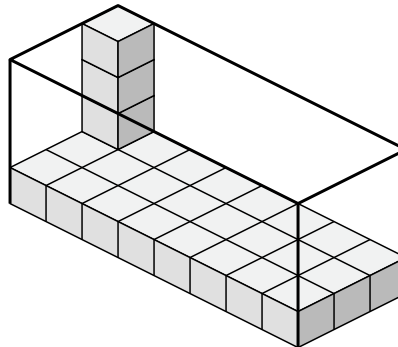
7. $5 \times 2 \times 2$

8. $2 \times 2 \times 2$

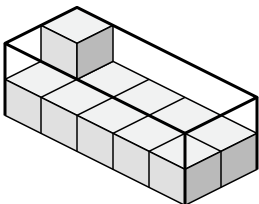
5)



6)



7)



8)

