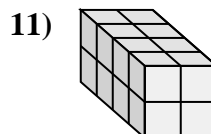
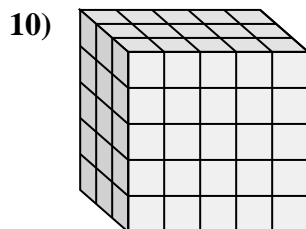
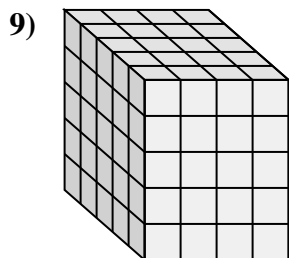
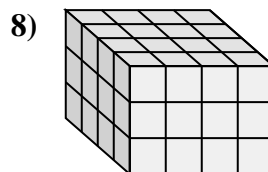
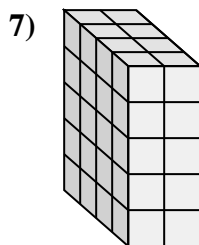
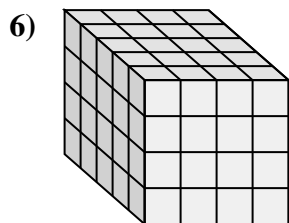
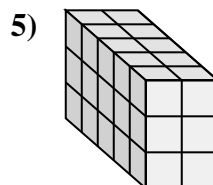
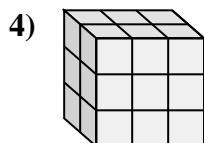
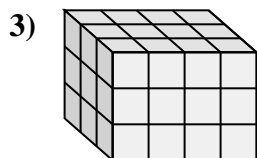
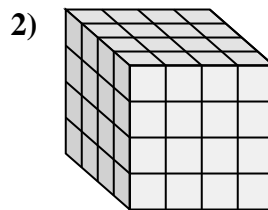
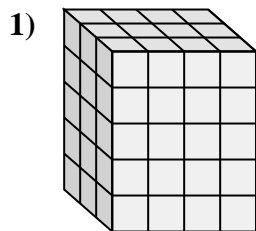
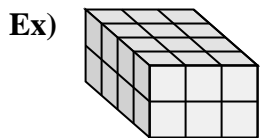






Match each problem with the equation that could represent it. Answer with the missing term and letter.



A.  $4 \times 4 \times \underline{\quad} = 48$

B.  $3 \times 4 \times 5 = \underline{\quad}$

C.  $4 \times 2 \times 2 = \underline{\quad}$

D.  $5 \times 4 \times \underline{\quad} = 100$

E.  $\underline{\quad} \times 2 \times 5 = 40$

F.  $5 \times 2 \times \underline{\quad} = 30$

G.  $3 \times 4 \times \underline{\quad} = 36$

H.  $2 \times 3 \times \underline{\quad} = 18$

I.  $5 \times \underline{\quad} \times 4 = 80$

J.  $\underline{\quad} \times 3 \times 2 = 24$

K.  $4 \times \underline{\quad} \times 4 = 64$

L.  $\underline{\quad} \times 5 \times 5 = 75$

Answers

Ex. J, 4

1. B, 60

2. K, 4

3. G, 3

4. H, 3

5. F, 3

6. I, 4

7. E, 4

8. A, 3

9. D, 5

10. L, 3

11. C, 16