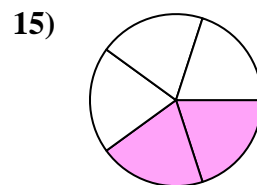
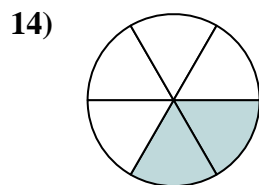
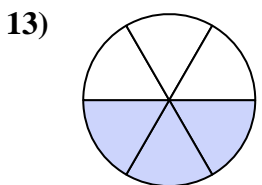
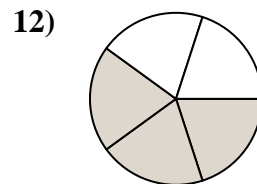
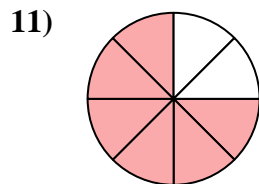
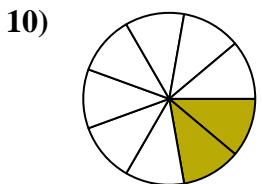
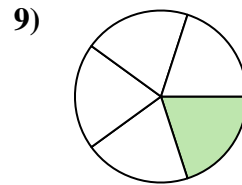
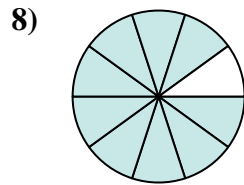
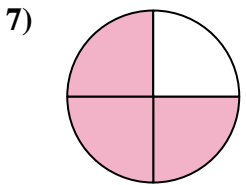
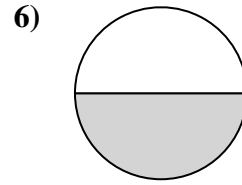
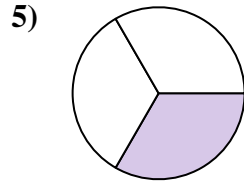
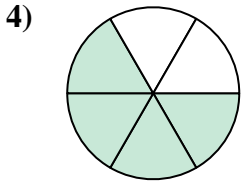
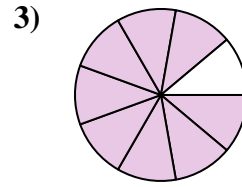
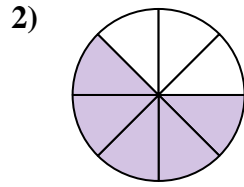
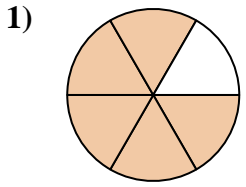




Find the angle (in degrees) of the shaded portion of the circle.

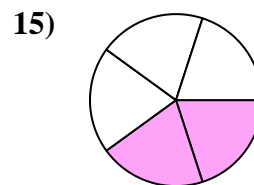
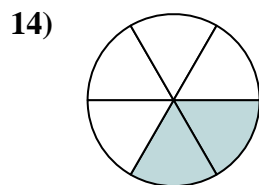
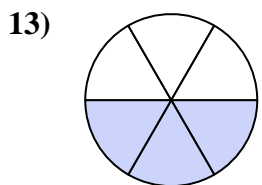
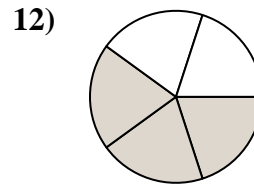
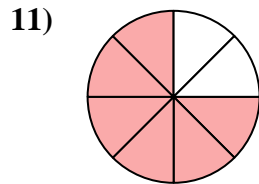
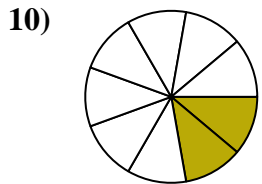
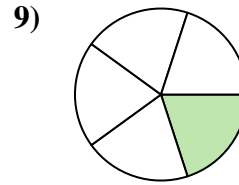
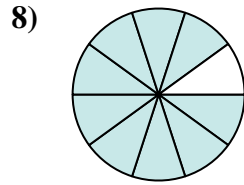
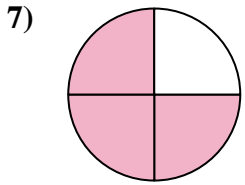
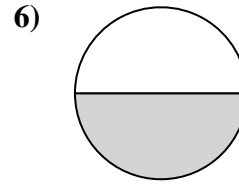
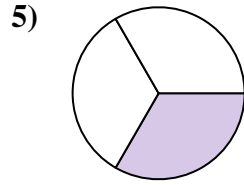
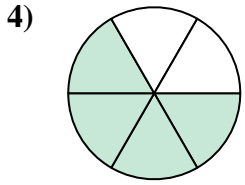
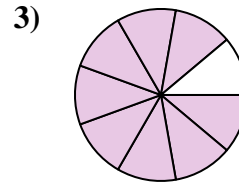
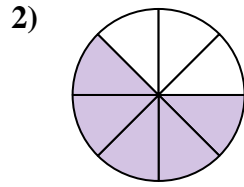
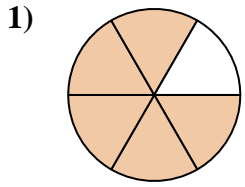
Answers



1. _____
2. _____
3. _____
4. _____
5. _____
6. _____
7. _____
8. _____
9. _____
10. _____
11. _____
12. _____
13. _____
14. _____
15. _____



Find the angle (in degrees) of the shaded portion of the circle.



Answers

1. 300

2. 225

3. 320

4. 240

5. 120

6. 180

7. 270

8. 324

9. 72

10. 80

11. 270

12. 216

13. 180

14. 120

15. 144



Find the angle (in degrees) of the shaded portion of the circle.

Answers

270

180

216

72

320

80

240

225

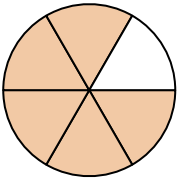
300

120

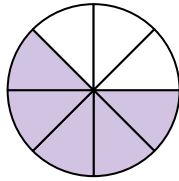
270

324

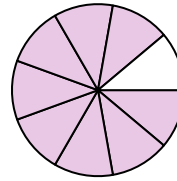
1)



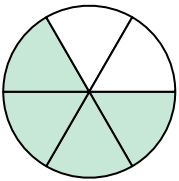
2)



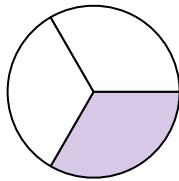
3)



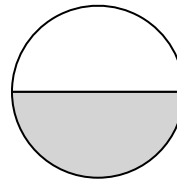
4)



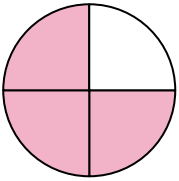
5)



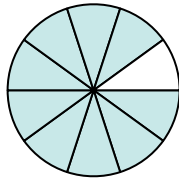
6)



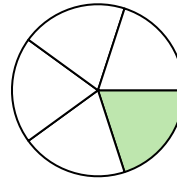
7)



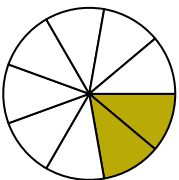
8)



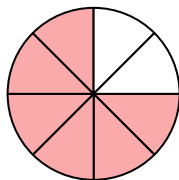
9)



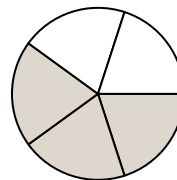
10)



11)



12)



1. _____

2. _____

3. _____

4. _____

5. _____

6. _____

7. _____

8. _____

9. _____

10. _____

11. _____

12. _____