



Calculate the angle of the circle relative to (0,0).

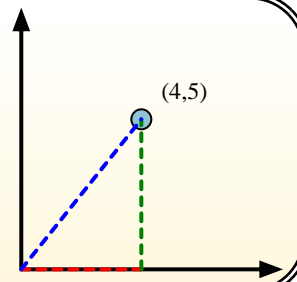
First find the slope.

$$(y_2 - y_1) \div (x_2 - x_1) = m$$

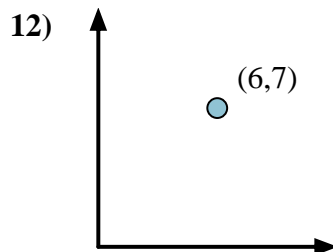
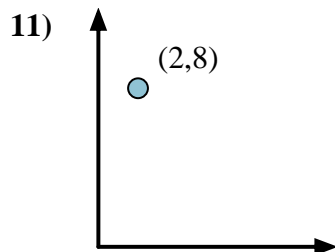
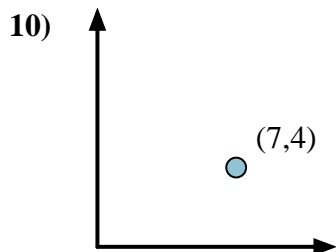
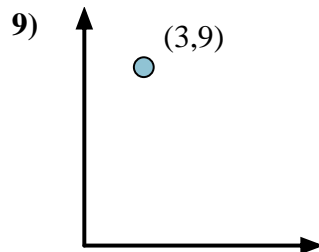
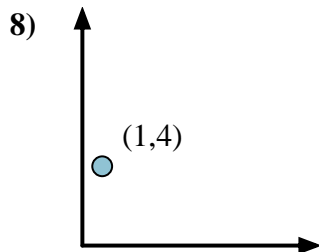
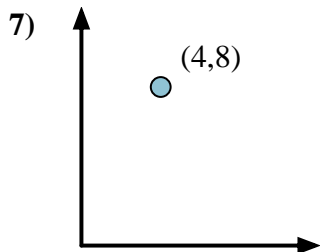
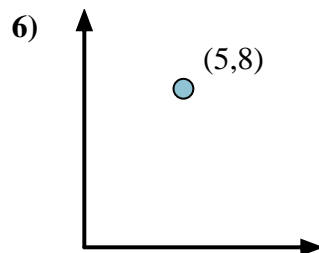
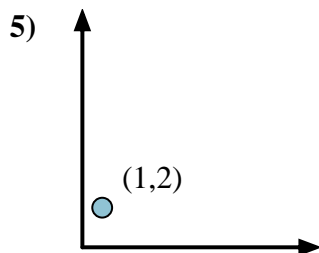
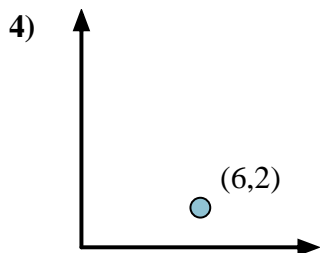
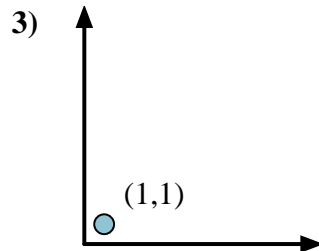
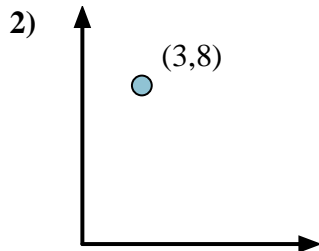
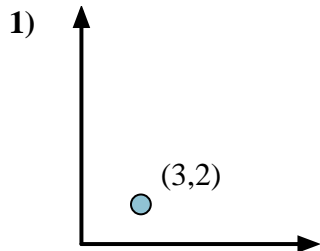
$$(5 - 0) \div (4 - 0) = 1.25$$

Then find the arc tangent (aka. inverse tangent) of the slope.

$$\arctan(1.25) = 51.34^\circ$$



Answers



1. _____
2. _____
3. _____
4. _____
5. _____
6. _____
7. _____
8. _____
9. _____
10. _____
11. _____
12. _____



Calculate the angle of the circle relative to (0,0).

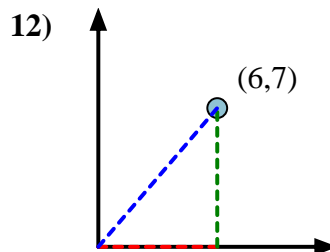
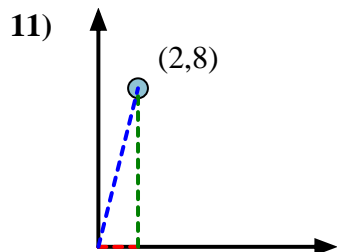
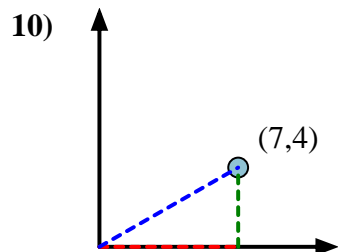
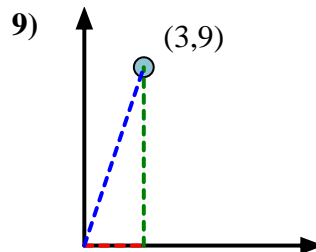
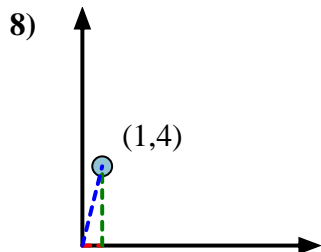
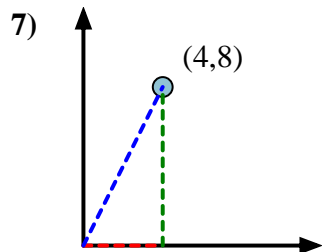
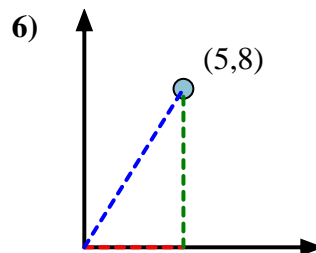
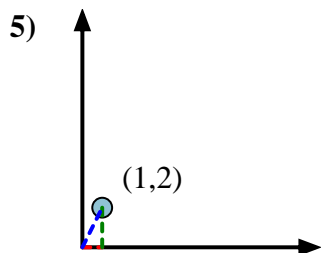
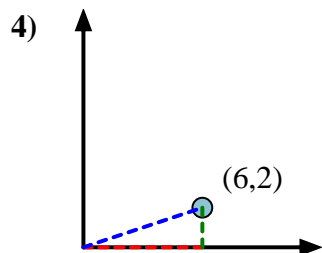
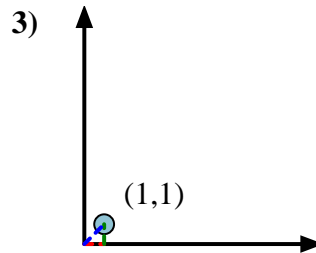
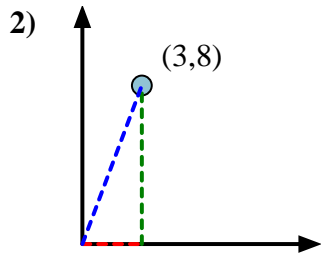
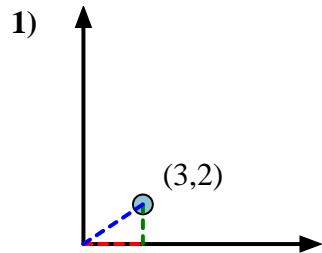


First find the slope.
 $(y_2 - y_1) \div (x_2 - x_1) = m$
 $(5 - 0) \div (4 - 0) = 1.25$

Then find the arc tangent (aka. inverse tangent) of the slope.
 $\arctan(1.25) = 51.34^\circ$



Answers



1. 33.69
2. 69.44
3. 45.00
4. 18.43
5. 63.43
6. 57.99
7. 63.43
8. 75.96
9. 71.57
10. 29.74
11. 75.96
12. 49.40