



Solve each problem using a tape diagram.

Answers

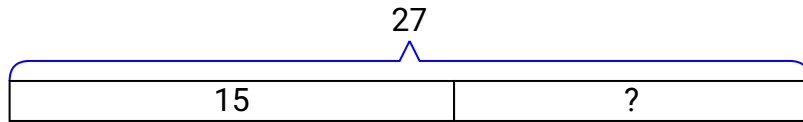
- 1) Victor had 27 cherries. He ate 15 of them. How many cherries does Victor have left?
- 2) Adam and Vanessa have 36 books. Vanessa has 17. How many books does Adam have?
- 3) Lana could send 61 text messages a day. If she sent 43, how many text messages does she have left she can send?
- 4) A fast food restaurant sold 41 ice cream cones. They used waffle cones on 11 of them and the rest were sugar cones. How many sugar cones did they use?
- 5) Debby's hair was 21 centimeters long. If she cut off 11 centimeters, how long is her hair now?
- 6) A museum had 60 paintings. If they got rid of 13 of them, how many pictures would they have left?
- 7) A store has 65 shirts. If 43 are long sleeve, how many are short sleeve?

1. _____
2. _____
3. _____
4. _____
5. _____
6. _____
7. _____

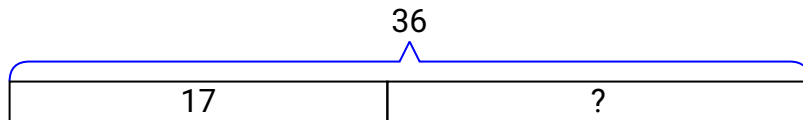


Solve each problem using a tape diagram.

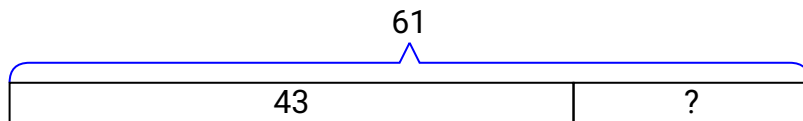
- 1) Victor had 27 cherries. He ate 15 of them. How many cherries does Victor have left?



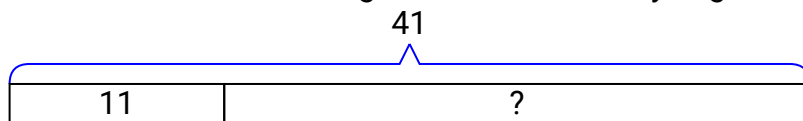
- 2) Adam and Vanessa have 36 books. Vanessa has 17. How many books does Adam have?



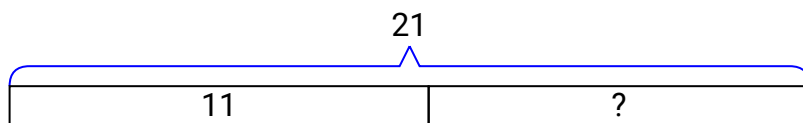
- 3) Lana could send 61 text messages a day. If she sent 43, how many text messages does she have left she can send?



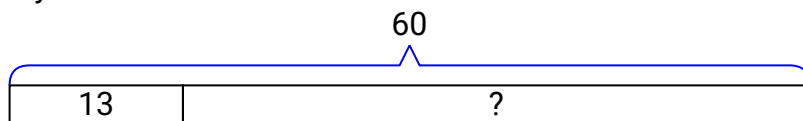
- 4) A fast food restaurant sold 41 ice cream cones. They used waffle cones on 11 of them and the rest were sugar cones. How many sugar cones did they use?



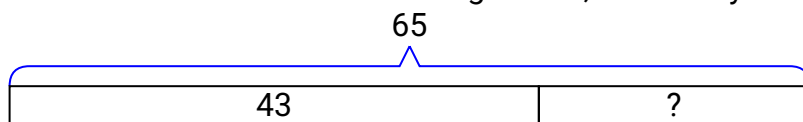
- 5) Debby's hair was 21 centimeters long. If she cut off 11 centimeters, how long is her hair now?



- 6) A museum had 60 paintings. If they got rid of 13 of them, how many pictures would they have left?



- 7) A store has 65 shirts. If 43 are long sleeve, how many are short sleeve?

**Answers**

1. **12**
2. **19**
3. **18**
4. **30**
5. **10**
6. **47**
7. **22**