



Solve each problem using a tape diagram.

Answers

1) An ice cream shop sold 29 waffle cones. They sold 2 times as many sugar cones as waffle cones and 3 times as many wafer cones as sugar cones. How many cones did they sell total?

1. \_\_\_\_\_

2. \_\_\_\_\_

3. \_\_\_\_\_

4. \_\_\_\_\_

2) In one day a restaurant used 50 knives. They also used 3 as many forks as they used knives. And 2 times as many spoons as forks. How many utensils do they use in a day?

5. \_\_\_\_\_

3) An ice cream shop sold 28 waffle cones. They sold 3 times as many sugar cones as waffle cones and 9 times as many wafer cones as sugar cones. How many cones did they sell total?

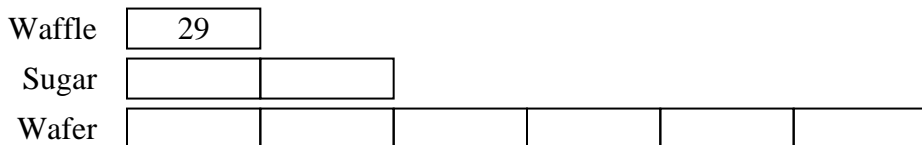
4) On week 1 a football player jogged for 13 minutes. On week 2 he jogged for 4 times as long. On week 3 he jogged for 3 times as long as he jogged on week 2. How many minute did he jog across all 3 weeks?

5) A school principal was looking over grades. In math 40 students scored a C. 4 times as many students scored a B. And 7 times as many students scored an A as scored a B. How many students scored an A, B or C?

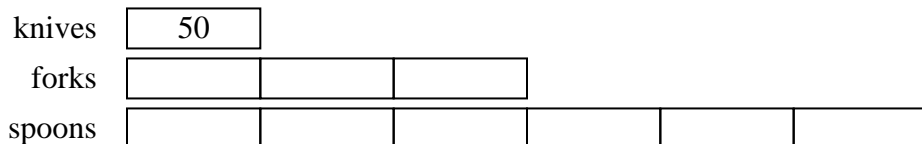


Solve each problem using a tape diagram.

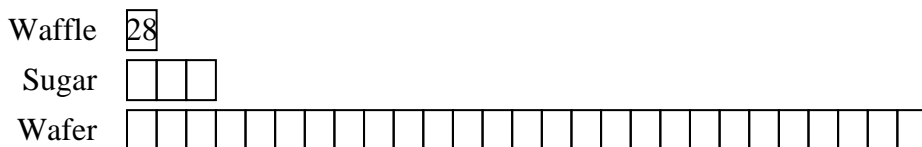
- 1) An ice cream shop sold 29 waffle cones. They sold 2 times as many sugar cones as waffle cones and 3 times as many wafer cones as sugar cones. How many cones did they sell total?



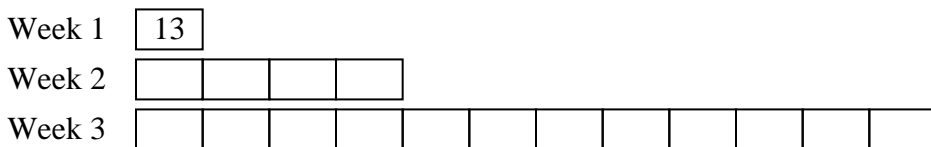
- 2) In one day a restaurant used 50 knives. They also used 3 as many forks as they used knives. And 2 times as many spoons as forks. How many utensils do they use in a day?



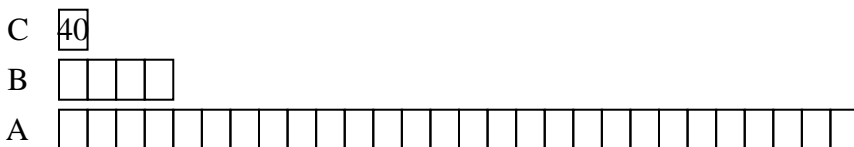
- 3) An ice cream shop sold 28 waffle cones. They sold 3 times as many sugar cones as waffle cones and 9 times as many wafer cones as sugar cones. How many cones did they sell total?



- 4) On week 1 a football player jogged for 13 minutes. On week 2 he jogged for 4 times as long. On week 3 he jogged for 3 times as long as he jogged on week 2. How many minute did he jog across all 3 weeks?



- 5) A school principal was looking over grades. In math 40 students scored a C. 4 times as many students scored a B. And 7 times as many students scored an A as scored a B. How many students scored an A, B or C?



Answers

1. 261

2. 500

3. 868

4. 221

5. 1320