

**Solve each problem using a tape diagram.****Answers**

- 1) In a school district the elementary school earned \$12 fundraising. The high school earned 2 times as much as the elementary school and the middle school earned \$9 less than the elementary. How much did they earn total?
- 2) On Monday morning a store had 29 customer. In the afternoon they had 8 fewer customers than the morning. In the evening they had 3 times as many customers as the morning. How many customers did they have total?
- 3) Carol uploaded a video to youtube that was 12 minutes long. The next week she uploaded a video that was 6 minutes longer. Then the following week she uploaded a video that was 2 times as long as the first week. How many minutes did she upload total?
- 4) Amy, Billy and Carl were working on a school project. Amy spent 17 minutes on her portion. Billy spent 10 times as long on his portion. And Carl spent 3 minutes fewer than Billy did. How many minutes total were they working?
- 5) The school book fair sold 23 books on Wednesday. On Friday they sold 4 fewer than Thursday. On Thursday they sold 6 times as many as on Wednesday. How many books did they sell in those three days?

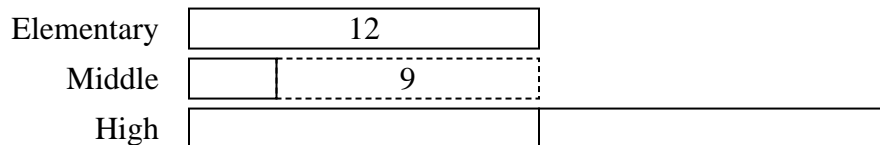
1. \_\_\_\_\_
2. \_\_\_\_\_
3. \_\_\_\_\_
4. \_\_\_\_\_
5. \_\_\_\_\_



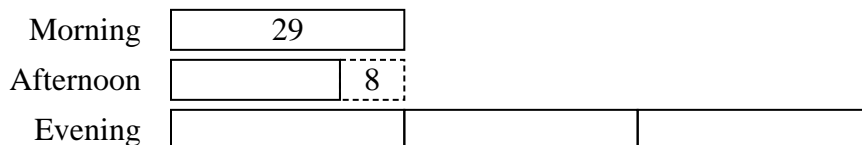
Solve each problem using a tape diagram.

**Answers**


- 1) In a school district the elementary school earned \$12 fundraising. The high school earned 2 times as much as the elementary school and the middle school earned \$9 less than the elementary. How much did they earn total?

1. **39**2. **137**3. **54**4. **354**5. **295**


- 2) On Monday morning a store had 29 customer. In the afternoon they had 8 fewer customers than the morning. In the evening they had 3 times as many customers as the morning. How many customers did they have total?



- 3) Carol uploaded a video to youtube that was 12 minutes long. The next week she uploaded a video that was 6 minutes longer. Then the following week she uploaded a video that was 2 times as long as the first week. How many minutes did she upload total?



- 4) Amy, Billy and Carl were working on a school project. Amy spent 17 minutes on her portion. Billy spent 10 times as long on his portion. And Carl spent 3 minutes fewer than Billy did. How many minutes total were they working?



- 5) The school book fair sold 23 books on Wednesday. On Friday they sold 4 fewer than Thursday. On Thursday they sold 6 times as many as on Wednesday. How many books did they sell in those three days?

