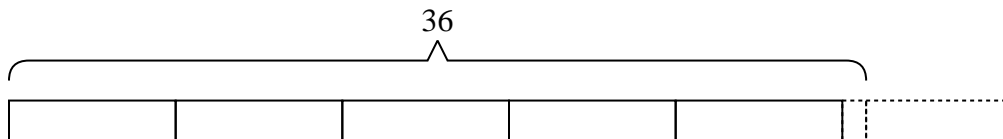




Solve each problem.

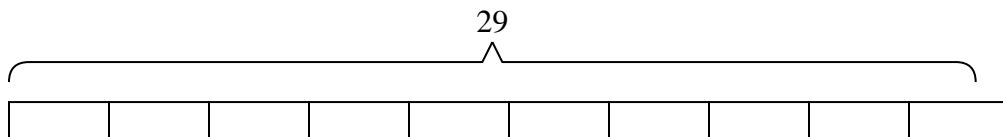
Answers

- 1) Paul wanted to give each of his {seven} friends an equal amount of candy. At the store he bought {thirty-six} pieces total to give to them. He many more pieces should he have bought so he didn't have any extra?



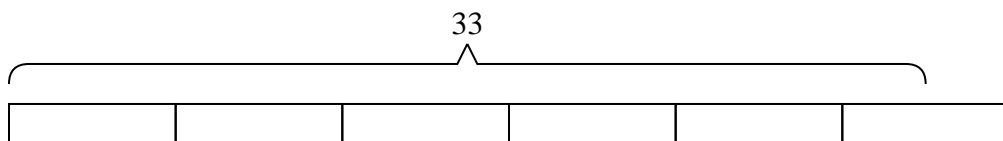
1. _____

- 2) A flash drive could hold {three} gigs of data. If you needed to store {twenty-nine} gigs, how many flash drive would you need?



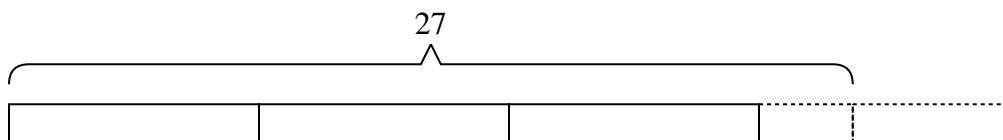
2. _____

- 3) Cody has to sell {thirty-three} chocolate bars to win a trip. If each box contains {six} chocolate bars, how many boxes will he need to sell to win the trip?



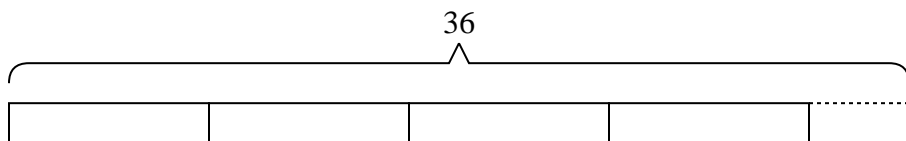
3. _____

- 4) At the carnival, {eight} friends bought {twenty-seven} tickets. If they wanted to split all the tickets so each friend got the same amount, how many more tickets would they need to buy?



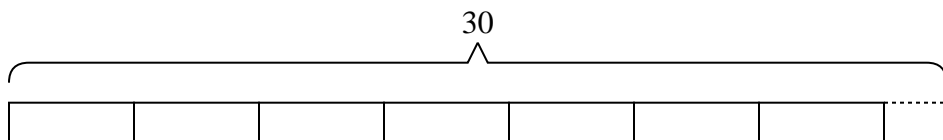
4. _____

- 5) A post office has {thirty-six} pieces of junk mail they want to split evenly between {eight} mail trucks. How many extra pieces of junk mail will they have if they give each truck the same amount?



5. _____

- 6) An industrial machine can make {thirty} crayons a day. If each box of crayons has {four} crayons in it, how many full boxes does the machine make a day?

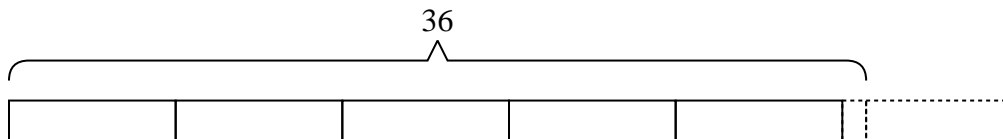


6. _____

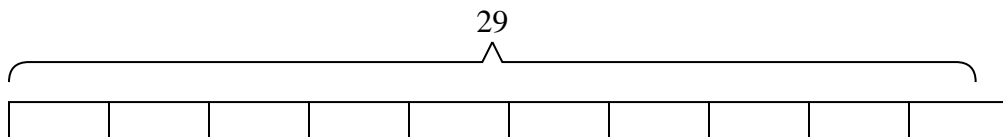


Solve each problem.

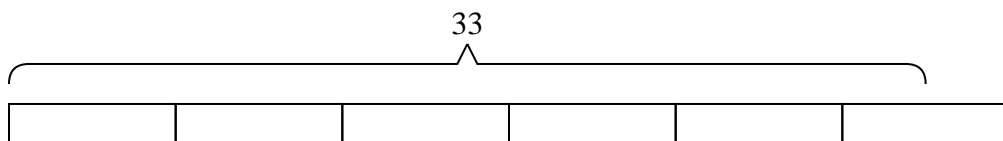
- 1) Paul wanted to give each of his {seven} friends an equal amount of candy. At the store he bought {thirty-six} pieces total to give to them. He many more pieces should he have bought so he didn't have any extra?



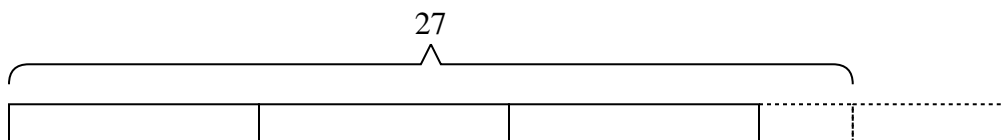
- 2) A flash drive could hold {three} gigs of data. If you needed to store {twenty-nine} gigs, how many flash drive would you need?



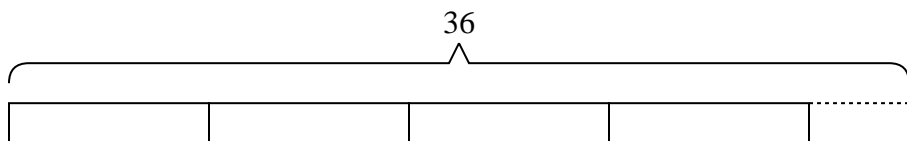
- 3) Cody has to sell {thirty-three} chocolate bars to win a trip. If each box contains {six} chocolate bars, how many boxes will he need to sell to win the trip?



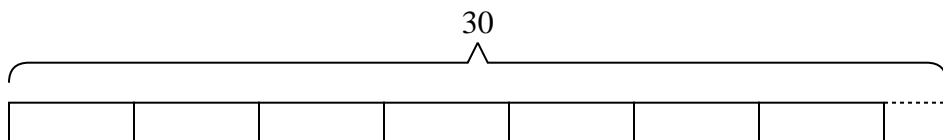
- 4) At the carnival, {eight} friends bought {twenty-seven} tickets. If they wanted to split all the tickets so each friend got the same amount, how many more tickets would they need to buy?



- 5) A post office has {thirty-six} pieces of junk mail they want to split evenly between {eight} mail trucks. How many extra pieces of junk mail will they have if they give each truck the same amount?



- 6) An industrial machine can make {thirty} crayons a day. If each box of crayons has {four} crayons in it, how many full boxes does the machine make a day?



Answers

1. 6

2. 10

3. 6

4. 5

5. 4

6. 7