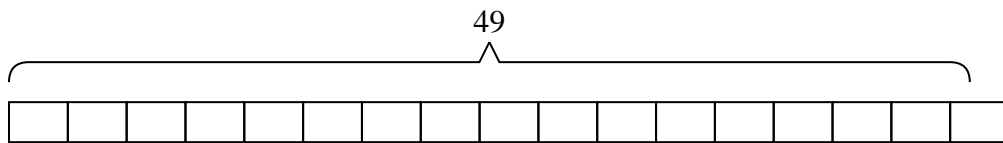




Solve each problem.

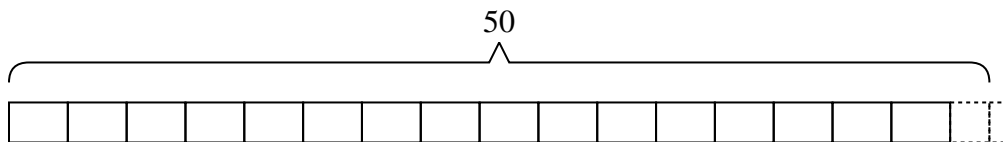
Answers

- 1) A clown needed {forty-nine} balloons for a party he was going to, but the balloons only came in packs of {three}. How many packs of balloons would he need to buy?



1. \_\_\_\_\_

- 2) A movie store had {fifty} movies they were putting on {three} shelves. If the owner wanted to make sure each shelf had the same number of movies how many more movies would he need?



2. \_\_\_\_\_

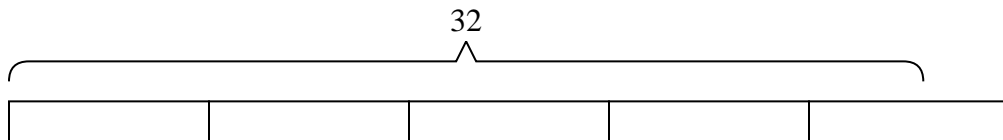
3. \_\_\_\_\_

4. \_\_\_\_\_

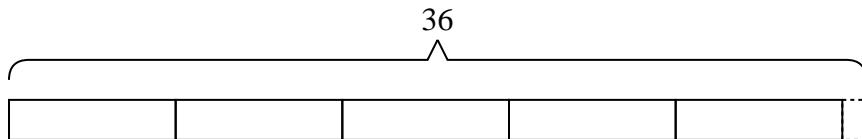
5. \_\_\_\_\_

6. \_\_\_\_\_

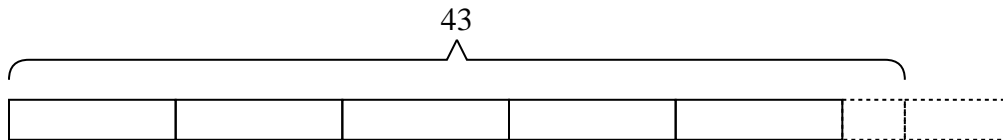
- 3) Billy was trying to beat his old score of {thirty-two} points in a video game. If he scores exactly {seven} points each round, how many rounds would he need to play to beat his old score?



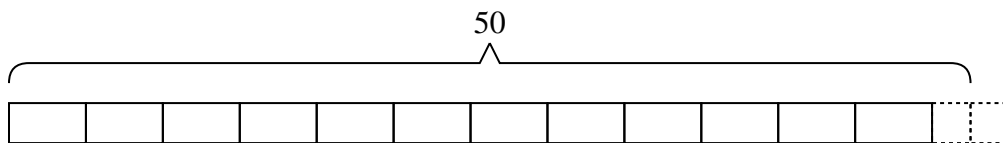
- 4) Carol had {thirty-six} photos to put into a photo album. If each page holds {seven} photos, how many full pages will she have?



- 5) It takes {eight} apples to make an apple pie. If a chef bought {forty-three} apples, the last pie would need how many more apples?



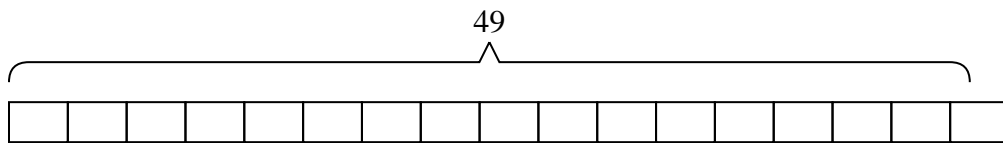
- 6) A botanist picked {fifty} flowers. She wanted to put them into {four} bouquets with the same number of flowers in each. How many more should she pick so she doesn't have any extra?



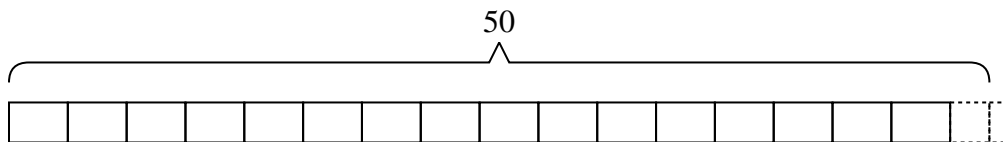


Solve each problem.

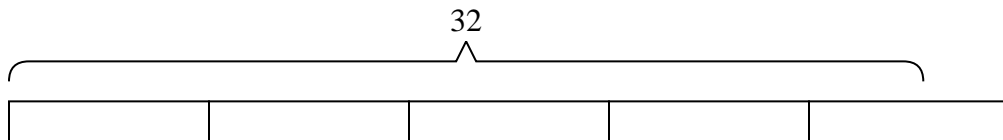
- 1) A clown needed {forty-nine} balloons for a party he was going to, but the balloons only came in packs of {three}. How many packs of balloons would he need to buy?



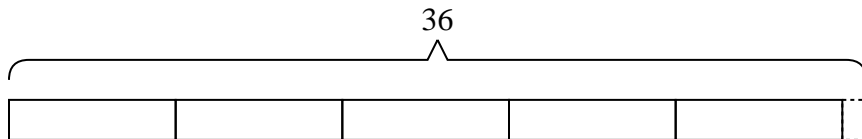
- 2) A movie store had {fifty} movies they were putting on {three} shelves. If the owner wanted to make sure each shelf had the same number of movies how many more movies would he need?



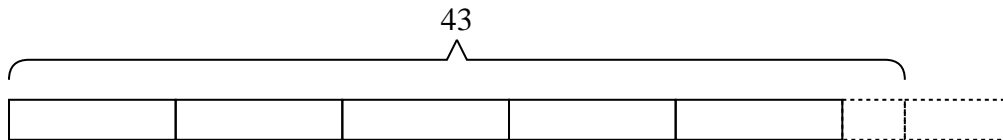
- 3) Billy was trying to beat his old score of {thirty-two} points in a video game. If he scores exactly {seven} points each round, how many rounds would he need to play to beat his old score?



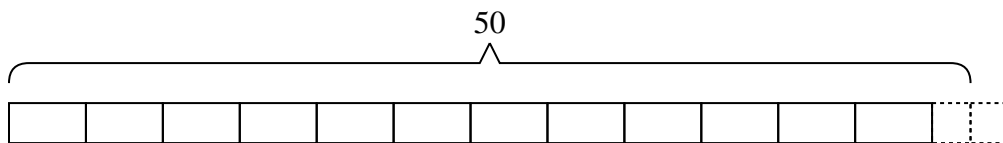
- 4) Carol had {thirty-six} photos to put into a photo album. If each page holds {seven} photos, how many full pages will she have?



- 5) It takes {eight} apples to make an apple pie. If a chef bought {forty-three} apples, the last pie would need how many more apples?



- 6) A botanist picked {fifty} flowers. She wanted to put them into {four} bouquets with the same number of flowers in each. How many more should she pick so she doesn't have any extra?



Answers

1. 17

2. 1

3. 5

4. 5

5. 5

6. 2