

**Solve each problem.****Answers**

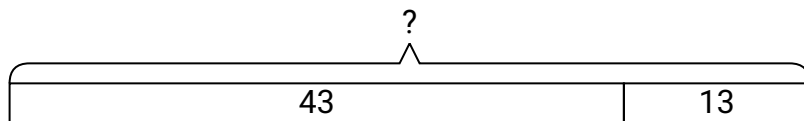
- 1) Amy had 13 books. If she bought 43 more at a yard sale how many would she have total?
- 2) Vanessa received 47 text messages before noon and another 41 after noon. How many text messages did Vanessa receive total?
- 3) At the fair Gwen started with 50 tickets and then bought 19 more. How many tickets did Gwen have total?
- 4) There were 37 people in line at lunch when 12 more got in line. How many people were there total in line?
- 5) Janet had 44 DS games and her friend had 36 games. How many do they have total?
- 6) Olivia went to the movies 42 times last year and 36 times this year. How many times did Olivia go to the movies total?
- 7) In the first half of a trivia game Adam scored 17 points. In the second half he scored 14 points. How many points did he score total?

1. _____
2. _____
3. _____
4. _____
5. _____
6. _____
7. _____

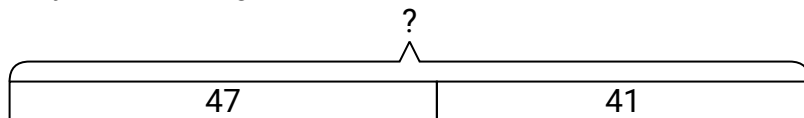


Solve each problem.

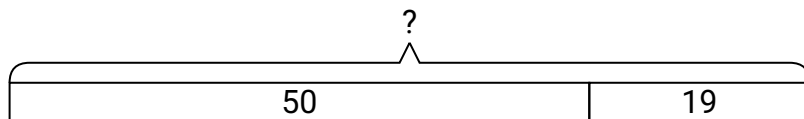
- 1) Amy had 13 books. If she bought 43 more at a yard sale how many would she have total?



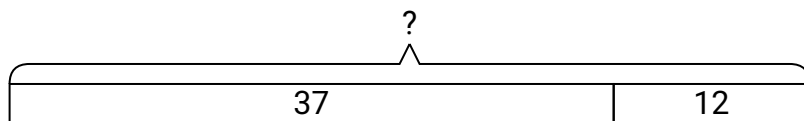
- 2) Vanessa received 47 text messages before noon and another 41 after noon. How many text messages did Vanessa receive total?



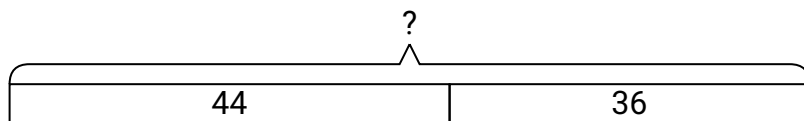
- 3) At the fair Gwen started with 50 tickets and then bought 19 more. How many tickets did Gwen have total?



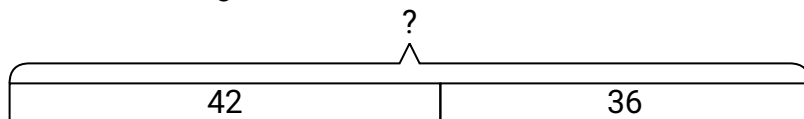
- 4) There were 37 people in line at lunch when 12 more got in line. How many people were there total in line?



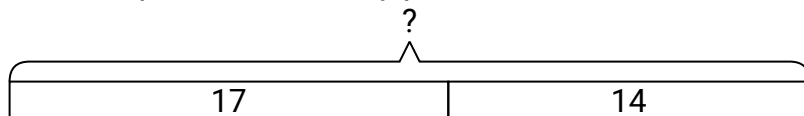
- 5) Janet had 44 DS games and her friend had 36 games. How many do they have total?



- 6) Olivia went to the movies 42 times last year and 36 times this year. How many times did Olivia go to the movies total?



- 7) In the first half of a trivia game Adam scored 17 points. In the second half he scored 14 points. How many points did he score total?

**Answers**

1. **56**
2. **88**
3. **69**
4. **49**
5. **80**
6. **78**
7. **31**