



Determine if the angle shown is 'less', 'more' or 'equal' to 90°.

Answers

Ex)



1)



2)



Ex. less

1. _____

2. _____

3)



4)



5)



3. _____

4. _____

5. _____

6)



7)



8)



6. _____

7. _____

8. _____

9)



10)



11)



9. _____

10. _____

11. _____

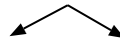
12)



13)



14)

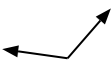


12. _____

13. _____

14. _____

15)



16)



17)



15. _____

16. _____

17. _____

18)



19)



20)



18. _____

19. _____

20. _____



Determine if the angle shown is 'less', 'more' or 'equal' to 90°.

Ex)



1)



2)



Ex. less

3)



4)



5)



1. equal

2. less

3. more

4. equal

5. equal

6)



7)



8)



6. less

7. less

8. more

9)



10)



11)

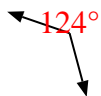


9. equal

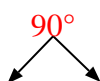
10. equal

11. more

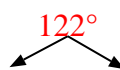
12)



13)



14)



12. more

13. equal

14. more

15)



16)



17)



15. more

16. less

17. equal

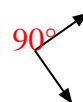
18)



19)



20)



18. less

19. less

20. equal