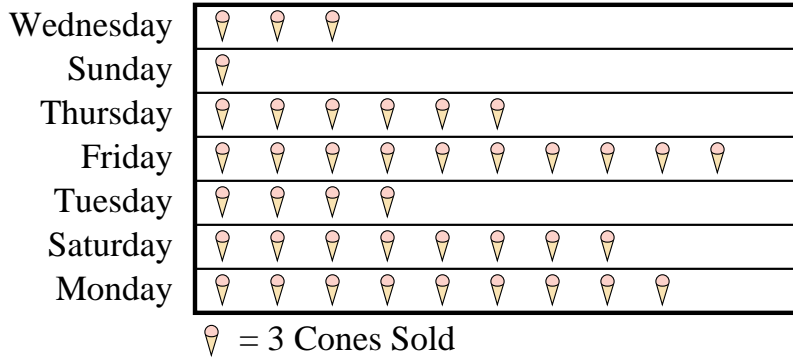


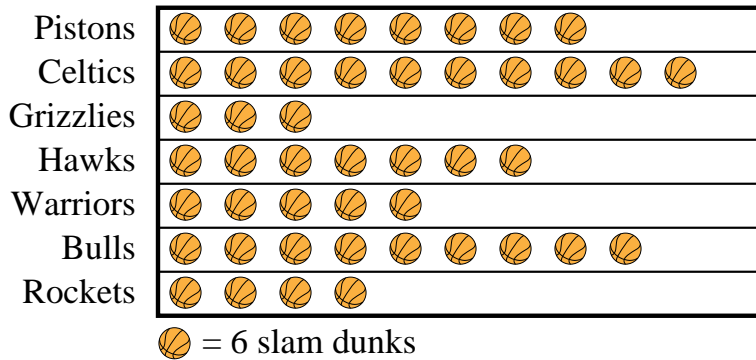


At a fundraiser students from Mrs. Long's class were selling ice cream cones. Mrs. Long recorded their sales information in the pictograph below.

Cones Sold

- 1) Did they sell more cones on Wednesday or Sunday?
- 2) Which day did they sell the fewest ice cream cones?
- 3) How many ice cream cones did they sell on Thursday?
- 4) Which day did they sell exactly 30 ice cream cones?
- 5) Which day did they sell the most ice cream cones?

Edward was recording how many slam dunks his favorite teams scored. He organized the information in the pictograph below.

Slam Dunks

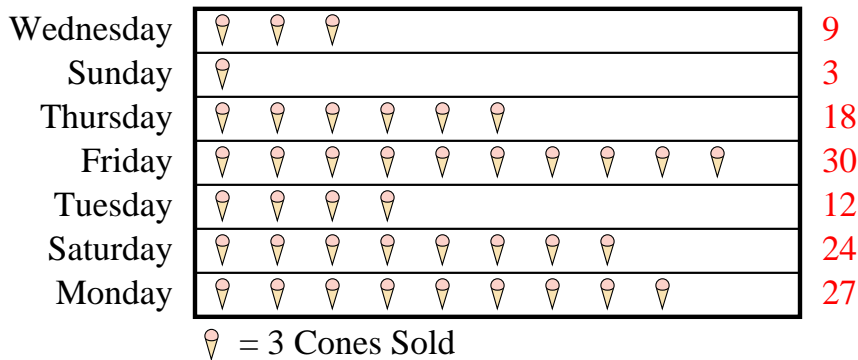
- 6) Which team scored exactly 42 slam dunks?
- 7) How many slam dunks did the Grizzlies make?
- 8) Which team had the fewest number of slam dunks?
- 9) Which team had more slam dunks, Pistons or Celtics?
- 10) Which team had the largest number of slam dunks?

Answers

1. _____
2. _____
3. _____
4. _____
5. _____
6. _____
7. _____
8. _____
9. _____
10. _____




At a fundraiser students from Mrs. Long's class were selling ice cream cones. Mrs. Long recorded their sales information in the pictograph below.

Cones Sold

- 1) Did they sell more cones on Wednesday or Sunday?
- 2) Which day did they sell the fewest ice cream cones?
- 3) How many ice cream cones did they sell on Thursday?
- 4) Which day did they sell exactly 30 ice cream cones?
- 5) Which day did they sell the most ice cream cones?

Edward was recording how many slam dunks his favorite teams scored. He organized the information in the pictograph below.

Slam Dunks

- 6) Which team scored exactly 42 slam dunks?
- 7) How many slam dunks did the Grizzlies make?
- 8) Which team had the fewest number of slam dunks?
- 9) Which team had more slam dunks, Pistons or Celtics?
- 10) Which team had the largest number of slam dunks?

Answers

1. **Wednesday**
2. **Sunday**
3. **18**
4. **Friday**
5. **Friday**
6. **Hawks**
7. **18**
8. **Grizzlies**
9. **Celtics**
10. **Celtics**