



Determine which pictograph best represents the information in the chart.

**Answers**

1)

Location	Pictures Taken
Zoo	15
Fair	40
Home	25
School	50
Party	5

2)

Location	Pictures Taken
Zoo	10
Fair	45
Home	50
School	25
Party	35

3)

Location	Pictures Taken
Zoo	10
Fair	35
Home	40
School	20
Party	15

4)

Location	Pictures Taken
Zoo	15
Fair	30
Home	25
School	50
Party	45

5)

Location	Pictures Taken
Zoo	15
Fair	5
Home	30
School	10
Party	45

6)

Location	Pictures Taken
Zoo	20
Fair	5
Home	35
School	45
Party	40

1. \_\_\_\_\_

2. \_\_\_\_\_






3. \_\_\_\_\_


4. \_\_\_\_\_

5. \_\_\_\_\_






6. \_\_\_\_\_


A.

Location	Pictures Taken
Zoo	
Fair	
Home	
School	
Party	






Each  = 5 picture


B.

Location	Pictures Taken
Zoo	
Fair	
Home	
School	
Party	






Each  = 5 picture


C.

Location	Pictures Taken
Zoo	
Fair	
Home	
School	
Party	






Each  = 5 picture


D.

Location	Pictures Taken
Zoo	
Fair	
Home	
School	
Party	






Each  = 5 picture


E.

Location	Pictures Taken
Zoo	
Fair	
Home	
School	
Party	

Each  = 5 picture

F.

Location	Pictures Taken
Zoo	
Fair	
Home	
School	
Party	

Each  = 5 picture



# Matching Pictographs to Charts

Name: **Answer Key**

Determine which pictograph best represents the information in the chart.

## Answers

1)

Location	Pictures Taken
Zoo	15
Fair	40
Home	25
School	50
Party	5

2)

Location	Pictures Taken
Zoo	10
Fair	45
Home	50
School	25
Party	35

3)

Location	Pictures Taken
Zoo	10
Fair	35
Home	40
School	20
Party	15

4)

Location	Pictures Taken
Zoo	15
Fair	30
Home	25
School	50
Party	45

5)

Location	Pictures Taken
Zoo	15
Fair	5
Home	30
School	10
Party	45

6)

Location	Pictures Taken
Zoo	20
Fair	5
Home	35
School	45
Party	40

1. **D**

2. **C**

3. **E**

4. **B**

5. **A**

6. **F**

A.

Location	Pictures Taken
Zoo	
Fair	
Home	
School	
Party	

Each = 5 picture

B.

Location	Pictures Taken
Zoo	
Fair	
Home	
School	
Party	

Each = 5 picture

C.

Location	Pictures Taken
Zoo	
Fair	
Home	
School	
Party	

Each = 5 picture

D.

Location	Pictures Taken
Zoo	
Fair	
Home	
School	
Party	

Each = 5 picture

E.

Location	Pictures Taken
Zoo	
Fair	
Home	
School	
Party	

Each = 5 picture

F.

Location	Pictures Taken
Zoo	
Fair	
Home	
School	
Party	

Each = 5 picture