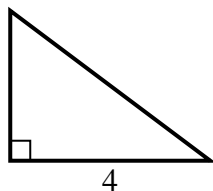


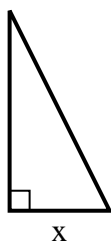


Find the value of X.

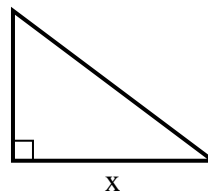
1) area =  $6 u^2$



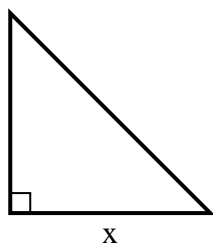
2) area =  $4 u^2$



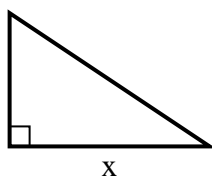
3) area =  $24 u^2$



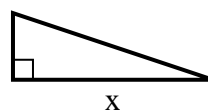
4) area =  $8 u^2$



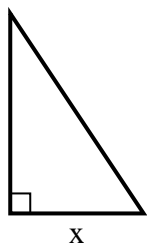
5) area =  $12 u^2$



6) area =  $6 u^2$



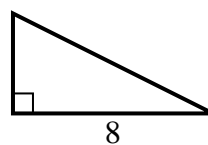
7) area =  $12 u^2$



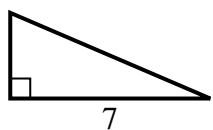
8) area =  $13.5 u^2$



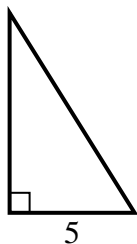
9) area =  $16 u^2$



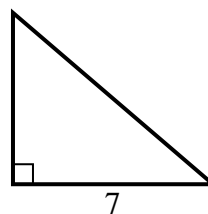
10) area =  $10.5 u^2$



11) area =  $20 u^2$



12) area =  $21 u^2$



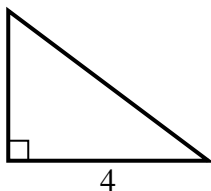
**Answers**

1. \_\_\_\_\_
2. \_\_\_\_\_
3. \_\_\_\_\_
4. \_\_\_\_\_
5. \_\_\_\_\_
6. \_\_\_\_\_
7. \_\_\_\_\_
8. \_\_\_\_\_
9. \_\_\_\_\_
10. \_\_\_\_\_
11. \_\_\_\_\_
12. \_\_\_\_\_

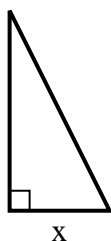


Find the value of X.

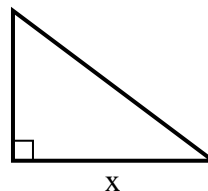
1) area =  $6 u^2$



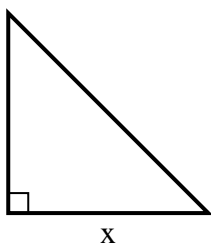
2) area =  $4 u^2$



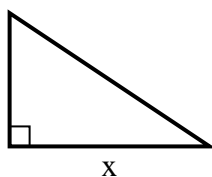
3) area =  $24 u^2$



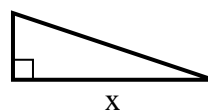
4) area =  $8 u^2$



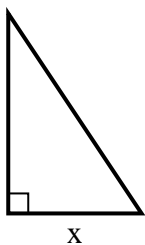
5) area =  $12 u^2$



6) area =  $6 u^2$



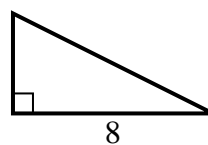
7) area =  $12 u^2$



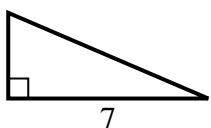
8) area =  $13.5 u^2$



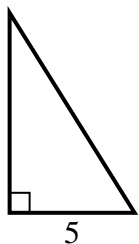
9) area =  $16 u^2$



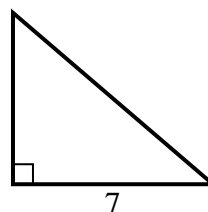
10) area =  $10.5 u^2$



11) area =  $20 u^2$



12) area =  $21 u^2$



Answers

1. 3

2. 2

3. 8

4. 4

5. 6

6. 6

7. 4

8. 3

9. 4

10. 3

11. 8

12. 6