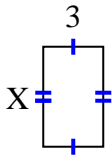


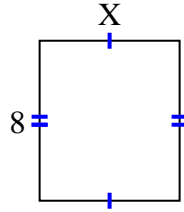


Find the value of X for each figure. Each figure is in centimeters (cm). Not to scale.

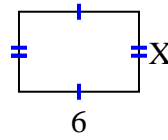
1) area = 15 cm^2



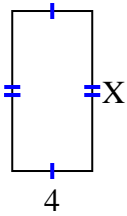
2) area = 56 cm^2



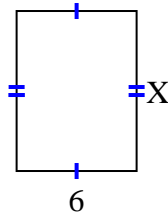
3) area = 24 cm^2



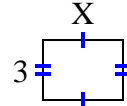
4) area = 32 cm^2



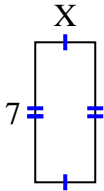
5) area = 48 cm^2



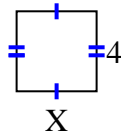
6) area = 12 cm^2



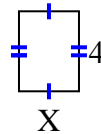
7) area = 21 cm^2



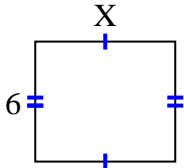
8) area = 16 cm^2



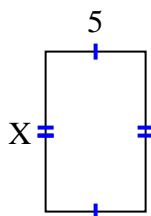
9) area = 12 cm^2



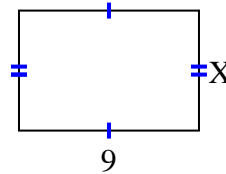
10) area = 42 cm^2



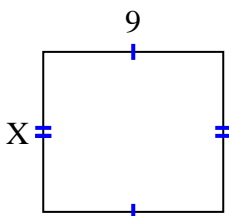
11) area = 40 cm^2



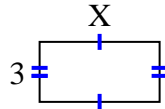
12) area = 54 cm^2



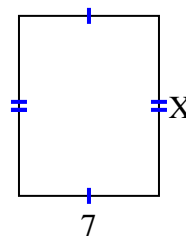
13) area = 72 cm^2



14) area = 18 cm^2



15) area = 63 cm^2



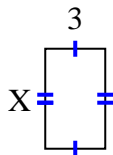
Answers

1. _____
2. _____
3. _____
4. _____
5. _____
6. _____
7. _____
8. _____
9. _____
10. _____
11. _____
12. _____
13. _____
14. _____
15. _____

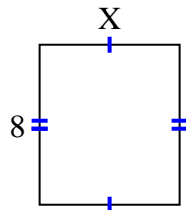


Find the value of X for each figure. Each figure is in centimeters (cm). Not to scale.

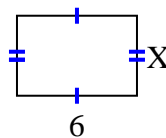
1) area = 15 cm^2



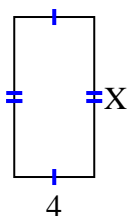
2) area = 56 cm^2



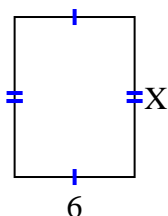
3) area = 24 cm^2



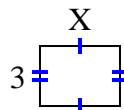
4) area = 32 cm^2



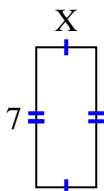
5) area = 48 cm^2



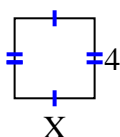
6) area = 12 cm^2



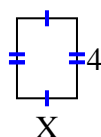
7) area = 21 cm^2



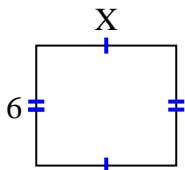
8) area = 16 cm^2



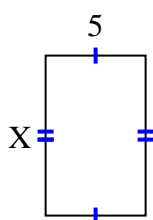
9) area = 12 cm^2



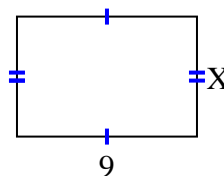
10) area = 42 cm^2



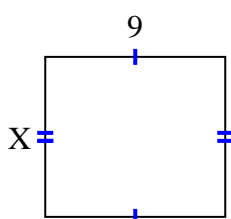
11) area = 40 cm^2



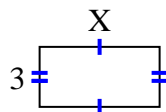
12) area = 54 cm^2



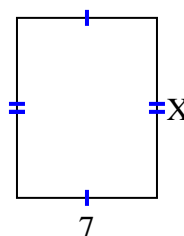
13) area = 72 cm^2



14) area = 18 cm^2



15) area = 63 cm^2



Answers

1. 5

2. 7

3. 4

4. 8

5. 8

6. 4

7. 3

8. 4

9. 3

10. 7

11. 8

12. 6

13. 8

14. 6

15. 9